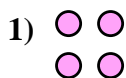
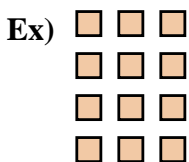




Write each array as an addition problem and solve.



Answers

Ex. $3+3+3+3=12$

1. _____

2. _____

3. _____

4. _____

5. _____

6. _____

7. _____

8. _____

9. _____



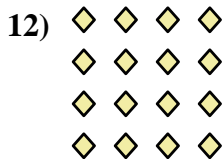
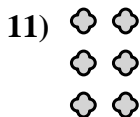
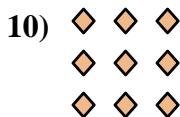


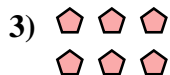
10. _____

11. _____

12. _____

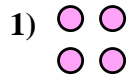
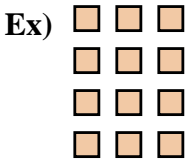
13. _____

14. _____





Write each array as an addition problem and solve.



Answers

Ex. $3+3+3+3=12$

1. $2+2=4$

2. $2+2+2+2+2=10$

3. $3+3=6$

4. $2+2+2+2=8$

5. $3+3+3+3+3=15$

6. $5+5+5+5=20$

7. $5+5+5=15$

8. $5+5+5+5+5=25$

9. $4+4=8$

10. $3+3+3=9$

11. $2+2+2=6$

12. $4+4+4+4=16$

13. $4+4+4+4+4=20$

14. $4+4+4=12$

