
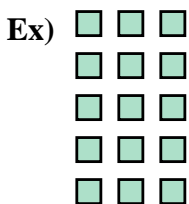




Write each array as an addition problem and solve.



Answers

Ex. $3+3+3+3+3=15$

1. _____

2. _____

3. _____

4. _____

5. _____

6. _____

7. _____

8. _____

9. _____

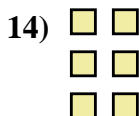

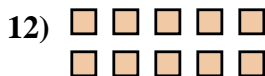
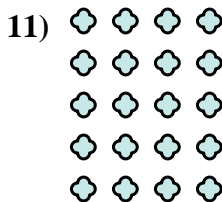
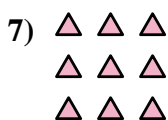


10. _____

11. _____

12. _____

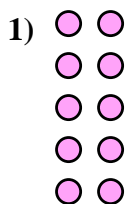
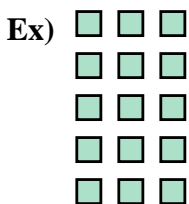
13. _____

14. _____





Write each array as an addition problem and solve.



Answers

Ex. 3+3+3+3+3=15

1. 2+2+2+2+2=10

2. 4+4+4+4=16

3. 4+4=8

4. 5+5+5+5=20

5. 5+5+5+5+5=25

6. 3+3+3+3=12

7. 3+3+3=9

8. 4+4+4=12

9. 2+2+2+2=8

10. 2+2=4

11. 4+4+4+4+4=20

12. 5+5=10

13. 5+5+5=15

14. 2+2+2=6

