




Use the units provided to measure the width of each of the bars.



Answers

1. _____

2. _____

3. _____

4. _____

5. _____

6. _____

7. _____

8. _____

9. _____




10. _____

Cut out and use the units shown to measure the bars on the previous page.





Use the units provided to measure the width of each of the bars.



Answers

1. 12

2. 6

3. 8

4. 7

5. 14

6. 13

7. 4

8. 10

9. 1

10. 2