



Determine which letter best represents the length / height.

**Answers**

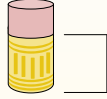
**Millimeter (mm)**

A millimeter is about the thickness of a credit card.



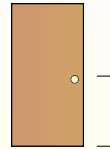
**Centimeter (cm)**

10 mm = 1 cm.  
The metal portion of a pencil is about 1 cm. A ruler is about 30 centimeters.



**Meter (m)**

100 cm = 1 m  
From the floor to a door knob is about 1 meter.

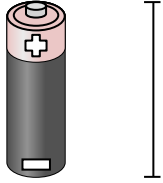


**Kilometer (km)**

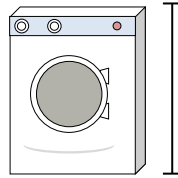
1,000 m = 1 km  
Most major roads are at least a kilometer long.




1. \_\_\_\_\_
2. \_\_\_\_\_
3. \_\_\_\_\_
4. \_\_\_\_\_
5. \_\_\_\_\_
6. \_\_\_\_\_
7. \_\_\_\_\_
8. \_\_\_\_\_
9. \_\_\_\_\_



- 1) Battery
- A. 60 centimeters
  - B. 5 centimeters
  - C. 3 kilometers
  - D. 2 meters




- 2) Washing Machine
- A. 10 centimeters
  - B. 1 meter
  - C. 2 meters
  - D. 30 centimeters



- 3) Gallon of Milk
- A. 8 centimeters
  - B. 20 centimeters
  - C. 10 millimeters
  - D. 3 meters



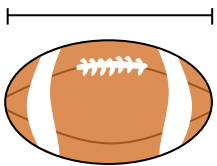
- 4) Pencil
- A. 20 centimeters
  - B. 150 centimeters
  - C. 1 meter
  - D. 30 millimeters



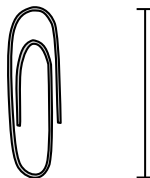
- 5) Cereal Box Height
- A. 10 centimeters
  - B. 30 centimeters
  - C. 3 centimeters
  - D. 60 centimeters



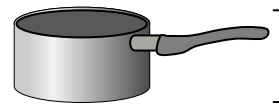
- 6) Bicycle
- A. 25 centimeters
  - B. 3 meters
  - C. 1 meter
  - D. 10 centimeters



- 7) Football
- A. 25 centimeters
  - B. 3 centimeters
  - C. 1 meter
  - D. 60 centimeters



- 8) Paperclip
- A. 3 centimeters
  - B. 60 centimeters
  - C. 30 centimeters
  - D. 10 centimeters



- 9) Cooking Pot
- A. 3 centimeters
  - B. 25 centimeters
  - C. 60 centimeters
  - D. 10 centimeters



Determine which letter best represents the length / height.

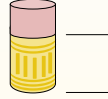
**Millimeter (mm)**

A millimeter is about the thickness of a credit card.



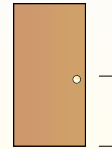
**Centimeter (cm)**

10 mm = 1 cm.  
The metal portion of a pencil is about 1 cm. A ruler is about 30 centimeters.



**Meter (m)**

100 cm = 1 m  
From the floor to a door knob is about 1 meter.

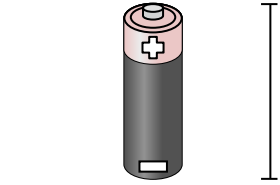


**Kilometer (km)**

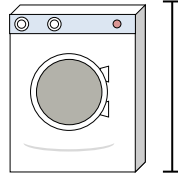
1,000 m = 1 km  
Most major roads are at least a kilometer long.




**Answers**



- 1) Battery  
A. 60 centimeters  
B. 5 centimeters  
C. 3 kilometers  
D. 2 meters




- 2) Washing Machine  
A. 10 centimeters  
B. 1 meter  
C. 2 meters  
D. 30 centimeters



- 3) Gallon of Milk  
A. 8 centimeters  
B. 20 centimeters  
C. 10 millimeters  
D. 3 meters



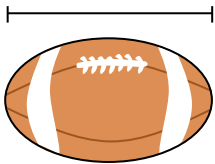
- 4) Pencil  
A. 20 centimeters  
B. 150 centimeters  
C. 1 meter  
D. 30 millimeters



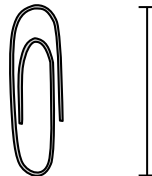
- 5) Cereal Box Height  
A. 10 centimeters  
B. 30 centimeters  
C. 3 centimeters  
D. 60 centimeters



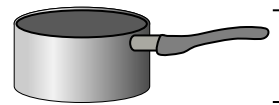
- 6) Bicycle  
A. 25 centimeters  
B. 3 meters  
C. 1 meter  
D. 10 centimeters



- 7) Football  
A. 25 centimeters  
B. 3 centimeters  
C. 1 meter  
D. 60 centimeters



- 8) Paperclip  
A. 3 centimeters  
B. 60 centimeters  
C. 30 centimeters  
D. 10 centimeters



- 9) Cooking Pot  
A. 3 centimeters  
B. 25 centimeters  
C. 60 centimeters  
D. 10 centimeters

1.     **B**
2.     **B**
3.     **B**
4.     **A**
5.     **B**
6.     **C**
7.     **A**
8.     **A**
9.     **B**