



Measure the width of each block in inches and in centimeters.

Ex)

Answers

Ex(in). 5

Ex(cm). 12

1)

1(in). _____

1(cm). _____

2)

2(in). _____

2(cm). _____

3)

3(in). _____

3(cm). _____

4)

4(in). _____

4(cm). _____

5)

5(in). _____

5(cm). _____

6)

6(in). _____

6(cm). _____

7)

7(in). _____

7(cm). _____

8)

8(in). _____

8(cm). _____

9)

9(in). _____

9(cm). _____

10)





10(in). _____

10(cm). _____

N		1		2		3		4		5		6		7				
Cm	1	2	3	4	5	6	7	8	9	10	11	12	13	14	15	16	17	18
N		1		2		3		4		5		6		7				
Cm	1	2	3	4	5	6	7	8	9	10	11	12	13	14	15	16	17	18
N		1		2		3		4		5		6		7				
Cm	1	2	3	4	5	6	7	8	9	10	11	12	13	14	15	16	17	18
N		1		2		3		4		5		6		7				
Cm	1	2	3	4	5	6	7	8	9	10	11	12	13	14	15	16	17	18
N		1		2		3		4		5		6		7				
Cm	1	2	3	4	5	6	7	8	9	10	11	12	13	14	15	16	17	18
N		1		2		3		4		5		6		7				
Cm	1	2	3	4	5	6	7	8	9	10	11	12	13	14	15	16	17	18
N		1		2		3		4		5		6		7				
Cm	1	2	3	4	5	6	7	8	9	10	11	12	13	14	15	16	17	18
N		1		2		3		4		5		6		7				
Cm	1	2	3	4	5	6	7	8	9	10	11	12	13	14	15	16	17	18
N		1		2		3		4		5		6		7				
Cm	1	2	3	4	5	6	7	8	9	10	11	12	13	14	15	16	17	18
N		1		2		3		4		5		6		7				
Cm	1	2	3	4	5	6	7	8	9	10	11	12	13	14	15	16	17	18
N		1		2		3		4		5		6		7				
Cm	1	2	3	4	5	6	7	8	9	10	11	12	13	14	15	16	17	18



Measure the width of each block in inches and in centimeters.



Answers

Ex(in). 5

Ex(cm). 12

1(in). 3

1(cm). 7 - 8

2(in). 1 1/2

2(cm). 3 - 4

3(in). 5

3(cm). 12 - 13

4(in). 2 1/2

4(cm). 6 - 7

5(in). 2

5(cm). 5 - 6

6(in). 4

6(cm). 10 - 11

7(in). 4 1/2

7(cm). 11 - 12

8(in). 0 1/2

8(cm). 1 - 2

9(in). 5 1/2

9(cm). 13 - 14

10(in). 3 1/2

10(cm). 8 - 9