



Measure the width of each block in inches and in centimeters.




Ex(in). 5

Ex(cm). 12



1(in). \_\_\_\_\_

1(cm). \_\_\_\_\_



2(in). \_\_\_\_\_

2(cm). \_\_\_\_\_




3(in). \_\_\_\_\_

3(cm). \_\_\_\_\_



4(in). \_\_\_\_\_

4(cm). \_\_\_\_\_



5(in). \_\_\_\_\_

5(cm). \_\_\_\_\_



6(in). \_\_\_\_\_

6(cm). \_\_\_\_\_



7(in). \_\_\_\_\_

7(cm). \_\_\_\_\_



8(in). \_\_\_\_\_

8(cm). \_\_\_\_\_



9(in). \_\_\_\_\_

9(cm). \_\_\_\_\_



10(in). \_\_\_\_\_



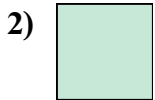
10(cm). \_\_\_\_\_

Answers

<b>N</b>		1		2		3		4		5		6		7				
<b>Cm</b>	1	2	3	4	5	6	7	8	9	10	11	12	13	14	15	16	17	18
<b>N</b>		1		2		3		4		5		6		7				
<b>Cm</b>	1	2	3	4	5	6	7	8	9	10	11	12	13	14	15	16	17	18
<b>N</b>		1		2		3		4		5		6		7				
<b>Cm</b>	1	2	3	4	5	6	7	8	9	10	11	12	13	14	15	16	17	18
<b>N</b>		1		2		3		4		5		6		7				
<b>Cm</b>	1	2	3	4	5	6	7	8	9	10	11	12	13	14	15	16	17	18
<b>N</b>		1		2		3		4		5		6		7				
<b>Cm</b>	1	2	3	4	5	6	7	8	9	10	11	12	13	14	15	16	17	18
<b>N</b>		1		2		3		4		5		6		7				
<b>Cm</b>	1	2	3	4	5	6	7	8	9	10	11	12	13	14	15	16	17	18
<b>N</b>		1		2		3		4		5		6		7				
<b>Cm</b>	1	2	3	4	5	6	7	8	9	10	11	12	13	14	15	16	17	18
<b>N</b>		1		2		3		4		5		6		7				
<b>Cm</b>	1	2	3	4	5	6	7	8	9	10	11	12	13	14	15	16	17	18
<b>N</b>		1		2		3		4		5		6		7				
<b>Cm</b>	1	2	3	4	5	6	7	8	9	10	11	12	13	14	15	16	17	18
<b>N</b>		1		2		3		4		5		6		7				
<b>Cm</b>	1	2	3	4	5	6	7	8	9	10	11	12	13	14	15	16	17	18
<b>N</b>		1		2		3		4		5		6		7				
<b>Cm</b>	1	2	3	4	5	6	7	8	9	10	11	12	13	14	15	16	17	18



Measure the width of each block in inches and in centimeters.



Answers

Ex(in). 5

Ex(cm). 12

1(in). 4

1(cm). 10 - 11

2(in). 0 1/2

2(cm). 1 - 2

3(in). 1

3(cm). 2 - 3

4(in). 1 1/2

4(cm). 3 - 4

5(in). 3

5(cm). 7 - 8

6(in). 4 1/2

6(cm). 11 - 12

7(in). 5

7(cm). 12 - 13

8(in). 3 1/2

8(cm). 8 - 9

9(in). 2 1/2

9(cm). 6 - 7

10(in). 2

10(cm). 5 - 6