



Measure the width of each block in inches and in centimeters.

Ex)



Answers

Ex(in). 5

Ex(cm). 12


1)



1(in). _____

1(cm). _____

2)



2(in). _____

2(cm). _____

3)



3(in). _____

3(cm). _____

4)



4(in). _____

4(cm). _____

5)



5(in). _____

5(cm). _____

6)



6(in). _____

6(cm). _____

7)



7(in). _____

7(cm). _____


8)



8(in). _____

8(cm). _____

9)



9(in). _____

9(cm). _____

10)



10(in). _____

10(cm). _____

N		1		2		3		4		5		6		7				
Cm	1	2	3	4	5	6	7	8	9	10	11	12	13	14	15	16	17	18
N		1		2		3		4		5		6		7				
Cm	1	2	3	4	5	6	7	8	9	10	11	12	13	14	15	16	17	18
N		1		2		3		4		5		6		7				
Cm	1	2	3	4	5	6	7	8	9	10	11	12	13	14	15	16	17	18
N		1		2		3		4		5		6		7				
Cm	1	2	3	4	5	6	7	8	9	10	11	12	13	14	15	16	17	18
N		1		2		3		4		5		6		7				
Cm	1	2	3	4	5	6	7	8	9	10	11	12	13	14	15	16	17	18
N		1		2		3		4		5		6		7				
Cm	1	2	3	4	5	6	7	8	9	10	11	12	13	14	15	16	17	18
N		1		2		3		4		5		6		7				
Cm	1	2	3	4	5	6	7	8	9	10	11	12	13	14	15	16	17	18
N		1		2		3		4		5		6		7				
Cm	1	2	3	4	5	6	7	8	9	10	11	12	13	14	15	16	17	18
N		1		2		3		4		5		6		7				
Cm	1	2	3	4	5	6	7	8	9	10	11	12	13	14	15	16	17	18
N		1		2		3		4		5		6		7				
Cm	1	2	3	4	5	6	7	8	9	10	11	12	13	14	15	16	17	18
N		1		2		3		4		5		6		7				
Cm	1	2	3	4	5	6	7	8	9	10	11	12	13	14	15	16	17	18



Measure the width of each block in inches and in centimeters.

Answers




Ex(in). 5

Ex(cm). 12



1(in). 3 1/2

1(cm). 8 - 9



2(in). 5 1/2

2(cm). 13 - 14




3(in). 5

3(cm). 12 - 13



4(in). 2

4(cm). 5 - 6



5(in). 2 1/2

5(cm). 6 - 7



6(in). 1

6(cm). 2 - 3




7(in). 3

7(cm). 7 - 8



8(in). 1 1/2

8(cm). 3 - 4



9(in). 0 1/2

9(cm). 1 - 2



10(in). 4

10(cm). 10 - 11