





Measure the width and height of each block in inches and in centimeters.


Ex)




1)



2)



3)



4)



Answers

Ex. (w - in) 5

Ex. (h - in) 1 1/2

Ex. (w - cm) 12

Ex. (h - cm) 4

1. (w - in) \_\_\_\_\_

1. (h - in) \_\_\_\_\_

1. (w - cm) \_\_\_\_\_

1. (h - cm) \_\_\_\_\_

2. (w - in) \_\_\_\_\_

2. (h - in) \_\_\_\_\_

2. (w - cm) \_\_\_\_\_

2. (h - cm) \_\_\_\_\_

3. (w - in) \_\_\_\_\_

3. (h - in) \_\_\_\_\_

3. (w - cm) \_\_\_\_\_

3. (h - cm) \_\_\_\_\_

4. (w - in) \_\_\_\_\_

4. (h - in) \_\_\_\_\_

4. (w - cm) \_\_\_\_\_


4. (h - cm) \_\_\_\_\_

In		1		2		3		4		5		6		7				
Cm	1	2	3	4	5	6	7	8	9	10	11	12	13	14	15	16	17	18
In		1		2		3		4		5		6		7				
Cm	1	2	3	4	5	6	7	8	9	10	11	12	13	14	15	16	17	18
In		1		2		3		4		5		6		7				
Cm	1	2	3	4	5	6	7	8	9	10	11	12	13	14	15	16	17	18
In		1		2		3		4		5		6		7				
Cm	1	2	3	4	5	6	7	8	9	10	11	12	13	14	15	16	17	18
In		1		2		3		4		5		6		7				
Cm	1	2	3	4	5	6	7	8	9	10	11	12	13	14	15	16	17	18
In		1		2		3		4		5		6		7				
Cm	1	2	3	4	5	6	7	8	9	10	11	12	13	14	15	16	17	18
In		1		2		3		4		5		6		7				
Cm	1	2	3	4	5	6	7	8	9	10	11	12	13	14	15	16	17	18
In		1		2		3		4		5		6		7				
Cm	1	2	3	4	5	6	7	8	9	10	11	12	13	14	15	16	17	18
In		1		2		3		4		5		6		7				
Cm	1	2	3	4	5	6	7	8	9	10	11	12	13	14	15	16	17	18
In		1		2		3		4		5		6		7				
Cm	1	2	3	4	5	6	7	8	9	10	11	12	13	14	15	16	17	18
In		1		2		3		4		5		6		7				
Cm	1	2	3	4	5	6	7	8	9	10	11	12	13	14	15	16	17	18




Measure the width and height of each block in inches and in centimeters.


Ex)




1)




2)



3)



4)



Answers

Ex. (w - in) 5

Ex. (h - in) 1 1/2

Ex. (w - cm) 12

Ex. (h - cm) 4

1. (w - in) 1

1. (h - in) 1 1/2

1. (w - cm) 2.5

1. (h - cm) 3.8

2. (w - in) 2 1/2

2. (h - in) 1 1/2

2. (w - cm) 6.4

2. (h - cm) 3.8

3. (w - in) 5 1/2

3. (h - in) 1 1/2

3. (w - cm) 14

3. (h - cm) 3.8

4. (w - in) 5

4. (h - in) 1 1/2

4. (w - cm) 12.7

4. (h - cm) 3.8