





Measure the width and height of each block in inches and in centimeters.

Ex)



1)



2)



3)



4)



Answers

Ex. (w - in) 5

Ex. (h - in) 1 1/2

Ex. (w - cm) 12

Ex. (h - cm) 4

1. (w - in) _____

1. (h - in) _____

1. (w - cm) _____

1. (h - cm) _____

2. (w - in) _____

2. (h - in) _____

2. (w - cm) _____

2. (h - cm) _____

3. (w - in) _____

3. (h - in) _____

3. (w - cm) _____

3. (h - cm) _____

4. (w - in) _____

4. (h - in) _____

4. (w - cm) _____


4. (h - cm) _____

In		1		2		3		4		5		6		7				
Cm	1	2	3	4	5	6	7	8	9	10	11	12	13	14	15	16	17	18
In		1		2		3		4		5		6		7				
Cm	1	2	3	4	5	6	7	8	9	10	11	12	13	14	15	16	17	18
In		1		2		3		4		5		6		7				
Cm	1	2	3	4	5	6	7	8	9	10	11	12	13	14	15	16	17	18
In		1		2		3		4		5		6		7				
Cm	1	2	3	4	5	6	7	8	9	10	11	12	13	14	15	16	17	18
In		1		2		3		4		5		6		7				
Cm	1	2	3	4	5	6	7	8	9	10	11	12	13	14	15	16	17	18
In		1		2		3		4		5		6		7				
Cm	1	2	3	4	5	6	7	8	9	10	11	12	13	14	15	16	17	18
In		1		2		3		4		5		6		7				
Cm	1	2	3	4	5	6	7	8	9	10	11	12	13	14	15	16	17	18
In		1		2		3		4		5		6		7				
Cm	1	2	3	4	5	6	7	8	9	10	11	12	13	14	15	16	17	18
In		1		2		3		4		5		6		7				
Cm	1	2	3	4	5	6	7	8	9	10	11	12	13	14	15	16	17	18
In		1		2		3		4		5		6		7				
Cm	1	2	3	4	5	6	7	8	9	10	11	12	13	14	15	16	17	18
In		1		2		3		4		5		6		7				
Cm	1	2	3	4	5	6	7	8	9	10	11	12	13	14	15	16	17	18




Measure the width and height of each block in inches and in centimeters.

Ex)



1)



2)



3)



4)



Answers

Ex. (w - in) 5

Ex. (h - in) 1 1/2

Ex. (w - cm) 12

Ex. (h - cm) 4

1. (w - in) 2

1. (h - in) 1 1/2

1. (w - cm) 5.1

1. (h - cm) 3.8

2. (w - in) 1 1/2

2. (h - in) 0 1/2

2. (w - cm) 3.8

2. (h - cm) 1.3

3. (w - in) 2 1/2

3. (h - in) 1

3. (w - cm) 6.4

3. (h - cm) 2.5

4. (w - in) 1

4. (h - in) 0 1/2

4. (w - cm) 2.5

4. (h - cm) 1.3