



Measure the width of each block in inches and in centimeters.



Answers
Ex(in). 5

Ex(cm). 12



1(in). _____

1(cm). _____



2(in). _____

2(cm). _____



3(in). _____

3(cm). _____



4(in). _____

4(cm). _____



5(in). _____

5(cm). _____



6(in). _____

6(cm). _____




7(in). _____

7(cm). _____



8(in). _____

8(cm). _____



9(in). _____

9(cm). _____






10(in). _____

10(cm). _____

$\mathbb{I}m$		1		2		3		4		5		6		7				
Cm	1	2	3	4	5	6	7	8	9	10	11	12	13	14	15	16	17	18
$\mathbb{I}m$		1		2		3		4		5		6		7				
Cm	1	2	3	4	5	6	7	8	9	10	11	12	13	14	15	16	17	18
$\mathbb{I}m$		1		2		3		4		5		6		7				
Cm	1	2	3	4	5	6	7	8	9	10	11	12	13	14	15	16	17	18
$\mathbb{I}m$		1		2		3		4		5		6		7				
Cm	1	2	3	4	5	6	7	8	9	10	11	12	13	14	15	16	17	18
$\mathbb{I}m$		1		2		3		4		5		6		7				
Cm	1	2	3	4	5	6	7	8	9	10	11	12	13	14	15	16	17	18
$\mathbb{I}m$		1		2		3		4		5		6		7				
Cm	1	2	3	4	5	6	7	8	9	10	11	12	13	14	15	16	17	18
$\mathbb{I}m$		1		2		3		4		5		6		7				
Cm	1	2	3	4	5	6	7	8	9	10	11	12	13	14	15	16	17	18
$\mathbb{I}m$		1		2		3		4		5		6		7				
Cm	1	2	3	4	5	6	7	8	9	10	11	12	13	14	15	16	17	18
$\mathbb{I}m$		1		2		3		4		5		6		7				
Cm	1	2	3	4	5	6	7	8	9	10	11	12	13	14	15	16	17	18
$\mathbb{I}m$		1		2		3		4		5		6		7				
Cm	1	2	3	4	5	6	7	8	9	10	11	12	13	14	15	16	17	18



Measure the width of each block in inches and in centimeters.



Answers

Ex(in). 5

Ex(cm). 12

1(in). 1 1/2

1(cm). 3 - 4

2(in). 0 1/2

2(cm). 1 - 2

3(in). 5

3(cm). 12 - 13

4(in). 4

4(cm). 10 - 11

5(in). 3

5(cm). 7 - 8

6(in). 2

6(cm). 5 - 6

7(in). 2 1/2

7(cm). 6 - 7

8(in). 1

8(cm). 2 - 3

9(in). 3 1/2

9(cm). 8 - 9

10(in). 4 1/2

10(cm). 11 - 12