


















Measure each of the bars (in centimeters) and then generate a line plot based on the information.

- 1) 
- 2) 
- 3) 
- 4) 
- 5) 
- 6) 
- 7) 
- 8) 
- 9) 
- 10) 
- 11) 
- 12) 
- 13) 
- 14) 
- 15) 

Line Plot

Answers

- 1. _____
- 2. _____
- 3. _____
- 4. _____
- 5. _____
- 6. _____
- 7. _____
- 8. _____
- 9. _____
- 10. _____
- 11. _____
- 12. _____
- 13. _____
- 14. _____
- 15. _____
- 16. **Plot**
- 17. **Plot**
- 18. **Plot**
- 19. **Plot**
- 20. **Plot**

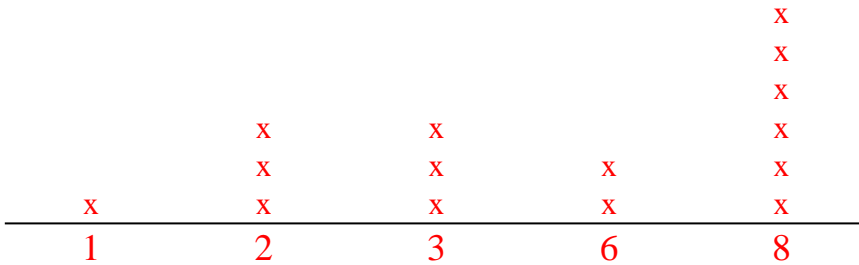
\mathbb{I}_m		1		2		3		4		5		6		7				
Cm	1	2	3	4	5	6	7	8	9	10	11	12	13	14	15	16	17	18
\mathbb{I}_m		1		2		3		4		5		6		7				
Cm	1	2	3	4	5	6	7	8	9	10	11	12	13	14	15	16	17	18
\mathbb{I}_m		1		2		3		4		5		6		7				
Cm	1	2	3	4	5	6	7	8	9	10	11	12	13	14	15	16	17	18
\mathbb{I}_m		1		2		3		4		5		6		7				
Cm	1	2	3	4	5	6	7	8	9	10	11	12	13	14	15	16	17	18
\mathbb{I}_m		1		2		3		4		5		6		7				
Cm	1	2	3	4	5	6	7	8	9	10	11	12	13	14	15	16	17	18
\mathbb{I}_m		1		2		3		4		5		6		7				
Cm	1	2	3	4	5	6	7	8	9	10	11	12	13	14	15	16	17	18
\mathbb{I}_m		1		2		3		4		5		6		7				
Cm	1	2	3	4	5	6	7	8	9	10	11	12	13	14	15	16	17	18
\mathbb{I}_m		1		2		3		4		5		6		7				
Cm	1	2	3	4	5	6	7	8	9	10	11	12	13	14	15	16	17	18
\mathbb{I}_m		1		2		3		4		5		6		7				
Cm	1	2	3	4	5	6	7	8	9	10	11	12	13	14	15	16	17	18
\mathbb{I}_m		1		2		3		4		5		6		7				
Cm	1	2	3	4	5	6	7	8	9	10	11	12	13	14	15	16	17	18



Measure each of the bars (in centimeters) and then generate a line plot based on the information.

- 1)
- 2)
- 3)
- 4)
- 5)
- 6)
- 7)
- 8)
- 9)
- 10)
- 11)
- 12)
- 13)
- 14)
- 15)

Line Plot





Answers

- 1. 3
- 2. 3
- 3. 2
- 4. 2
- 5. 8
- 6. 8
- 7. 6
- 8. 8
- 9. 3
- 10. 8
- 11. 6
- 12. 1
- 13. 2
- 14. 8
- 15. 8
- 16. Plot
- 17. Plot
- 18. Plot
- 19. Plot
- 20. Plot



Measure each of the bars (in centimeters) and then generate a line plot based on the information.



Line Plot

Answers

1. _____

2. _____

3. _____

4. _____

5. _____

6. _____

7. _____

8. _____

9. _____

10. _____

11. _____

12. _____

13. _____

14. _____

15. _____

16. **Plot**

17. **Plot**

18. **Plot**

19. **Plot**

20. **Plot**

1-10	95	90	85	80	75	70	65	60	55	50
11-20	45	40	35	30	25	20	15	10	5	0

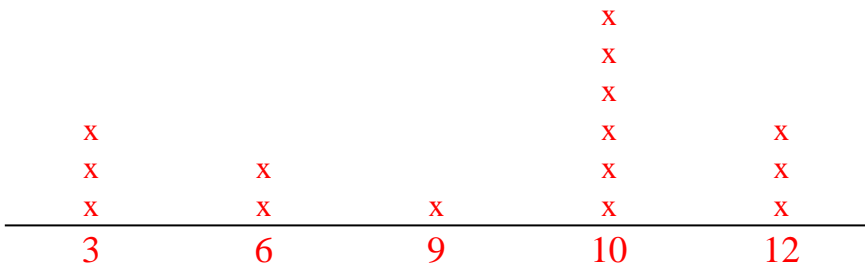
\mathbb{I}_m		1		2		3		4		5		6		7				
Cm	1	2	3	4	5	6	7	8	9	10	11	12	13	14	15	16	17	18
\mathbb{I}_m		1		2		3		4		5		6		7				
Cm	1	2	3	4	5	6	7	8	9	10	11	12	13	14	15	16	17	18
\mathbb{I}_m		1		2		3		4		5		6		7				
Cm	1	2	3	4	5	6	7	8	9	10	11	12	13	14	15	16	17	18
\mathbb{I}_m		1		2		3		4		5		6		7				
Cm	1	2	3	4	5	6	7	8	9	10	11	12	13	14	15	16	17	18
\mathbb{I}_m		1		2		3		4		5		6		7				
Cm	1	2	3	4	5	6	7	8	9	10	11	12	13	14	15	16	17	18
\mathbb{I}_m		1		2		3		4		5		6		7				
Cm	1	2	3	4	5	6	7	8	9	10	11	12	13	14	15	16	17	18
\mathbb{I}_m		1		2		3		4		5		6		7				
Cm	1	2	3	4	5	6	7	8	9	10	11	12	13	14	15	16	17	18
\mathbb{I}_m		1		2		3		4		5		6		7				
Cm	1	2	3	4	5	6	7	8	9	10	11	12	13	14	15	16	17	18
\mathbb{I}_m		1		2		3		4		5		6		7				
Cm	1	2	3	4	5	6	7	8	9	10	11	12	13	14	15	16	17	18
\mathbb{I}_m		1		2		3		4		5		6		7				
Cm	1	2	3	4	5	6	7	8	9	10	11	12	13	14	15	16	17	18



Measure each of the bars (in centimeters) and then generate a line plot based on the information.

- 1)
- 2)
- 3)
- 4)
- 5)
- 6)
- 7)
- 8)
- 9)
- 10)
- 11)
- 12)
- 13)
- 14)
- 15)

Line Plot



Answers

- 1. 10
- 2. 3
- 3. 12
- 4. 9
- 5. 10
- 6. 10
- 7. 3
- 8. 10
- 9. 10
- 10. 6
- 11. 12
- 12. 12
- 13. 10
- 14. 3
- 15. 6
- 16. Plot
- 17. Plot
- 18. Plot
- 19. Plot
- 20. Plot



Measure each of the bars (in centimeters) and then generate a line plot based on the information.



Line Plot

Answers

1. _____

2. _____

3. _____

4. _____

5. _____

6. _____

7. _____

8. _____

9. _____

10. _____

11. _____

12. _____

13. _____

14. _____

15. _____

16. **Plot**

17. **Plot**

18. **Plot**

19. **Plot**

20. **Plot**

1-10	95	90	85	80	75	70	65	60	55	50
11-20	45	40	35	30	25	20	15	10	5	0

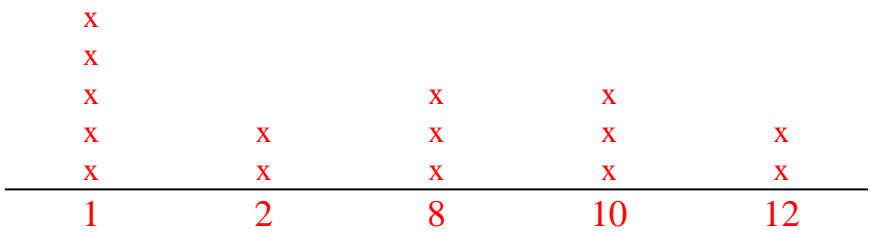
\mathbb{I}_m		1		2		3		4		5		6		7				
Cm	1	2	3	4	5	6	7	8	9	10	11	12	13	14	15	16	17	18
\mathbb{I}_m		1		2		3		4		5		6		7				
Cm	1	2	3	4	5	6	7	8	9	10	11	12	13	14	15	16	17	18
\mathbb{I}_m		1		2		3		4		5		6		7				
Cm	1	2	3	4	5	6	7	8	9	10	11	12	13	14	15	16	17	18
\mathbb{I}_m		1		2		3		4		5		6		7				
Cm	1	2	3	4	5	6	7	8	9	10	11	12	13	14	15	16	17	18
\mathbb{I}_m		1		2		3		4		5		6		7				
Cm	1	2	3	4	5	6	7	8	9	10	11	12	13	14	15	16	17	18
\mathbb{I}_m		1		2		3		4		5		6		7				
Cm	1	2	3	4	5	6	7	8	9	10	11	12	13	14	15	16	17	18
\mathbb{I}_m		1		2		3		4		5		6		7				
Cm	1	2	3	4	5	6	7	8	9	10	11	12	13	14	15	16	17	18
\mathbb{I}_m		1		2		3		4		5		6		7				
Cm	1	2	3	4	5	6	7	8	9	10	11	12	13	14	15	16	17	18
\mathbb{I}_m		1		2		3		4		5		6		7				
Cm	1	2	3	4	5	6	7	8	9	10	11	12	13	14	15	16	17	18
\mathbb{I}_m		1		2		3		4		5		6		7				
Cm	1	2	3	4	5	6	7	8	9	10	11	12	13	14	15	16	17	18



Measure each of the bars (in centimeters) and then generate a line plot based on the information.

- 1)
- 2)
- 3)
- 4)
- 5)
- 6)
- 7)
- 8)
- 9)
- 10)
- 11)
- 12)
- 13)
- 14)
- 15)

Line Plot


















Answers

- 1. 10
- 2. 1
- 3. 10
- 4. 2
- 5. 1
- 6. 8
- 7. 8
- 8. 1
- 9. 10
- 10. 8
- 11. 1
- 12. 1
- 13. 12
- 14. 12
- 15. 2
- 16. Plot
- 17. Plot
- 18. Plot
- 19. Plot
- 20. Plot



Measure each of the bars (in centimeters) and then generate a line plot based on the information.

- 1) 
- 2) 
- 3) 
- 4) 
- 5) 
- 6) 
- 7) 
- 8) 
- 9) 
- 10) 
- 11) 
- 12) 
- 13) 
- 14) 
- 15) 

Line Plot

Answers

- 1. _____
- 2. _____
- 3. _____
- 4. _____
- 5. _____
- 6. _____
- 7. _____
- 8. _____
- 9. _____
- 10. _____
- 11. _____
- 12. _____
- 13. _____
- 14. _____
- 15. _____
- 16. **Plot**
- 17. **Plot**
- 18. **Plot**
- 19. **Plot**
- 20. **Plot**

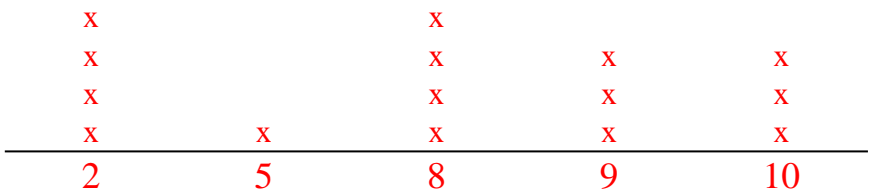
\mathbb{I}_m		1		2		3		4		5		6		7				
Cm	1	2	3	4	5	6	7	8	9	10	11	12	13	14	15	16	17	18
\mathbb{I}_m		1		2		3		4		5		6		7				
Cm	1	2	3	4	5	6	7	8	9	10	11	12	13	14	15	16	17	18
\mathbb{I}_m		1		2		3		4		5		6		7				
Cm	1	2	3	4	5	6	7	8	9	10	11	12	13	14	15	16	17	18
\mathbb{I}_m		1		2		3		4		5		6		7				
Cm	1	2	3	4	5	6	7	8	9	10	11	12	13	14	15	16	17	18
\mathbb{I}_m		1		2		3		4		5		6		7				
Cm	1	2	3	4	5	6	7	8	9	10	11	12	13	14	15	16	17	18
\mathbb{I}_m		1		2		3		4		5		6		7				
Cm	1	2	3	4	5	6	7	8	9	10	11	12	13	14	15	16	17	18
\mathbb{I}_m		1		2		3		4		5		6		7				
Cm	1	2	3	4	5	6	7	8	9	10	11	12	13	14	15	16	17	18
\mathbb{I}_m		1		2		3		4		5		6		7				
Cm	1	2	3	4	5	6	7	8	9	10	11	12	13	14	15	16	17	18
\mathbb{I}_m		1		2		3		4		5		6		7				
Cm	1	2	3	4	5	6	7	8	9	10	11	12	13	14	15	16	17	18
\mathbb{I}_m		1		2		3		4		5		6		7				
Cm	1	2	3	4	5	6	7	8	9	10	11	12	13	14	15	16	17	18



Measure each of the bars (in centimeters) and then generate a line plot based on the information.

- 1)
- 2)
- 3)
- 4)
- 5)
- 6)
- 7)
- 8)
- 9)
- 10)
- 11)
- 12)
- 13)
- 14)
- 15)

Line Plot





Answers

- 1. 9
- 2. 9
- 3. 2
- 4. 10
- 5. 8
- 6. 9
- 7. 8
- 8. 8
- 9. 10
- 10. 2
- 11. 2
- 12. 10
- 13. 2
- 14. 5
- 15. 8
- 16. Plot
- 17. Plot
- 18. Plot
- 19. Plot
- 20. Plot



Measure each of the bars (in centimeters) and then generate a line plot based on the information.



Line Plot

Answers

1. _____

2. _____

3. _____

4. _____

5. _____

6. _____

7. _____

8. _____

9. _____

10. _____

11. _____

12. _____

13. _____

14. _____

15. _____

16. **Plot**

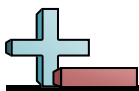
17. **Plot**

18. **Plot**




19. **Plot**

20. **Plot**

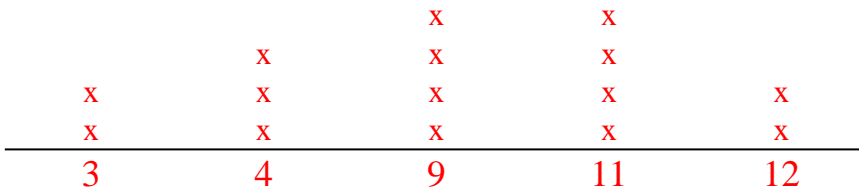
\mathbb{I}_m		1		2		3		4		5		6		7				
Cm	1	2	3	4	5	6	7	8	9	10	11	12	13	14	15	16	17	18
\mathbb{I}_m		1		2		3		4		5		6		7				
Cm	1	2	3	4	5	6	7	8	9	10	11	12	13	14	15	16	17	18
\mathbb{I}_m		1		2		3		4		5		6		7				
Cm	1	2	3	4	5	6	7	8	9	10	11	12	13	14	15	16	17	18
\mathbb{I}_m		1		2		3		4		5		6		7				
Cm	1	2	3	4	5	6	7	8	9	10	11	12	13	14	15	16	17	18
\mathbb{I}_m		1		2		3		4		5		6		7				
Cm	1	2	3	4	5	6	7	8	9	10	11	12	13	14	15	16	17	18
\mathbb{I}_m		1		2		3		4		5		6		7				
Cm	1	2	3	4	5	6	7	8	9	10	11	12	13	14	15	16	17	18
\mathbb{I}_m		1		2		3		4		5		6		7				
Cm	1	2	3	4	5	6	7	8	9	10	11	12	13	14	15	16	17	18
\mathbb{I}_m		1		2		3		4		5		6		7				
Cm	1	2	3	4	5	6	7	8	9	10	11	12	13	14	15	16	17	18
\mathbb{I}_m		1		2		3		4		5		6		7				
Cm	1	2	3	4	5	6	7	8	9	10	11	12	13	14	15	16	17	18
\mathbb{I}_m		1		2		3		4		5		6		7				
Cm	1	2	3	4	5	6	7	8	9	10	11	12	13	14	15	16	17	18



Measure each of the bars (in centimeters) and then generate a line plot based on the information.



Line Plot



Answers

1. 11

2. 12

3. 4

4. 11

5. 9

6. 4

7. 4

8. 11

9. 9

10. 3

11. 9

12. 9

13. 3

14. 12

15. 11

16. Plot

17. Plot

18. Plot

19. Plot

20. Plot



Measure each of the bars (in centimeters) and then generate a line plot based on the information.

- 1)
- 2)
- 3)
- 4)
- 5)
- 6)
- 7)
- 8)
- 9)
- 10)
- 11)
- 12)
- 13)
- 14)
- 15)

Line Plot

Answers

- 1. _____
- 2. _____
- 3. _____
- 4. _____
- 5. _____
- 6. _____
- 7. _____
- 8. _____
- 9. _____
- 10. _____
- 11. _____
- 12. _____
- 13. _____
- 14. _____
- 15. _____
- 16. **Plot**
- 17. **Plot**
- 18. **Plot**
- 19. **Plot**
- 20. **Plot**

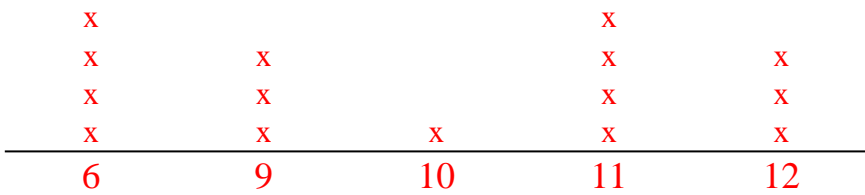
\mathbb{I}_m		1		2		3		4		5		6		7				
Cm	1	2	3	4	5	6	7	8	9	10	11	12	13	14	15	16	17	18
\mathbb{I}_m		1		2		3		4		5		6		7				
Cm	1	2	3	4	5	6	7	8	9	10	11	12	13	14	15	16	17	18
\mathbb{I}_m		1		2		3		4		5		6		7				
Cm	1	2	3	4	5	6	7	8	9	10	11	12	13	14	15	16	17	18
\mathbb{I}_m		1		2		3		4		5		6		7				
Cm	1	2	3	4	5	6	7	8	9	10	11	12	13	14	15	16	17	18
\mathbb{I}_m		1		2		3		4		5		6		7				
Cm	1	2	3	4	5	6	7	8	9	10	11	12	13	14	15	16	17	18
\mathbb{I}_m		1		2		3		4		5		6		7				
Cm	1	2	3	4	5	6	7	8	9	10	11	12	13	14	15	16	17	18
\mathbb{I}_m		1		2		3		4		5		6		7				
Cm	1	2	3	4	5	6	7	8	9	10	11	12	13	14	15	16	17	18
\mathbb{I}_m		1		2		3		4		5		6		7				
Cm	1	2	3	4	5	6	7	8	9	10	11	12	13	14	15	16	17	18
\mathbb{I}_m		1		2		3		4		5		6		7				
Cm	1	2	3	4	5	6	7	8	9	10	11	12	13	14	15	16	17	18
\mathbb{I}_m		1		2		3		4		5		6		7				
Cm	1	2	3	4	5	6	7	8	9	10	11	12	13	14	15	16	17	18



Measure each of the bars (in centimeters) and then generate a line plot based on the information.

- 1)
- 2)
- 3)
- 4)
- 5)
- 6)
- 7)
- 8)
- 9)
- 10)
- 11)
- 12)
- 13)
- 14)
- 15)

Line Plot


















Answers

- 1. 12
- 2. 12
- 3. 11
- 4. 6
- 5. 9
- 6. 11
- 7. 11
- 8. 9
- 9. 6
- 10. 6
- 11. 10
- 12. 9
- 13. 12
- 14. 11
- 15. 6
- 16. Plot
- 17. Plot
- 18. Plot
- 19. Plot
- 20. Plot



Measure each of the bars (in centimeters) and then generate a line plot based on the information.

- 1) 
- 2) 
- 3) 
- 4) 
- 5) 
- 6) 
- 7) 
- 8) 
- 9) 
- 10) 
- 11) 
- 12) 
- 13) 
- 14) 
- 15) 

Line Plot

Answers

- 1. _____
- 2. _____
- 3. _____
- 4. _____
- 5. _____
- 6. _____
- 7. _____
- 8. _____
- 9. _____
- 10. _____
- 11. _____
- 12. _____
- 13. _____
- 14. _____
- 15. _____
- 16. **Plot**
- 17. **Plot**
- 18. **Plot**
- 19. **Plot**
- 20. **Plot**

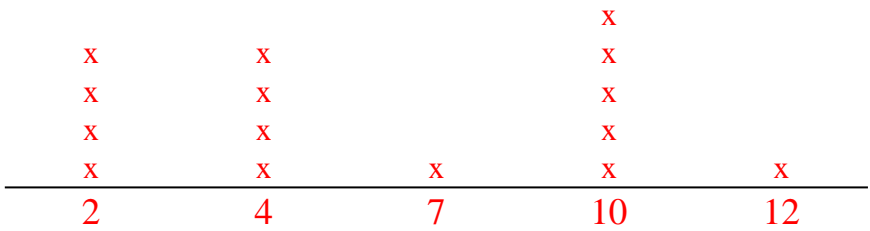
\mathbb{I}_m		1		2		3		4		5		6		7				
Cm	1	2	3	4	5	6	7	8	9	10	11	12	13	14	15	16	17	18
\mathbb{I}_m		1		2		3		4		5		6		7				
Cm	1	2	3	4	5	6	7	8	9	10	11	12	13	14	15	16	17	18
\mathbb{I}_m		1		2		3		4		5		6		7				
Cm	1	2	3	4	5	6	7	8	9	10	11	12	13	14	15	16	17	18
\mathbb{I}_m		1		2		3		4		5		6		7				
Cm	1	2	3	4	5	6	7	8	9	10	11	12	13	14	15	16	17	18
\mathbb{I}_m		1		2		3		4		5		6		7				
Cm	1	2	3	4	5	6	7	8	9	10	11	12	13	14	15	16	17	18
\mathbb{I}_m		1		2		3		4		5		6		7				
Cm	1	2	3	4	5	6	7	8	9	10	11	12	13	14	15	16	17	18
\mathbb{I}_m		1		2		3		4		5		6		7				
Cm	1	2	3	4	5	6	7	8	9	10	11	12	13	14	15	16	17	18
\mathbb{I}_m		1		2		3		4		5		6		7				
Cm	1	2	3	4	5	6	7	8	9	10	11	12	13	14	15	16	17	18
\mathbb{I}_m		1		2		3		4		5		6		7				
Cm	1	2	3	4	5	6	7	8	9	10	11	12	13	14	15	16	17	18
\mathbb{I}_m		1		2		3		4		5		6		7				
Cm	1	2	3	4	5	6	7	8	9	10	11	12	13	14	15	16	17	18



Measure each of the bars (in centimeters) and then generate a line plot based on the information.

- 1)
- 2)
- 3)
- 4)
- 5)
- 6)
- 7)
- 8)
- 9)
- 10)
- 11)
- 12)
- 13)
- 14)
- 15)

Line Plot







Answers

- 1. 2
- 2. 12
- 3. 7
- 4. 10
- 5. 2
- 6. 4
- 7. 4
- 8. 4
- 9. 10
- 10. 2
- 11. 10
- 12. 2
- 13. 10
- 14. 10
- 15. 4
- 16. Plot
- 17. Plot
- 18. Plot
- 19. Plot
- 20. Plot



Measure each of the bars (in centimeters) and then generate a line plot based on the information.



Line Plot

Answers

1. _____

2. _____

3. _____

4. _____

5. _____

6. _____

7. _____

8. _____

9. _____

10. _____

11. _____

12. _____

13. _____

14. _____

15. _____

16. **Plot**

17. **Plot**

18. **Plot**

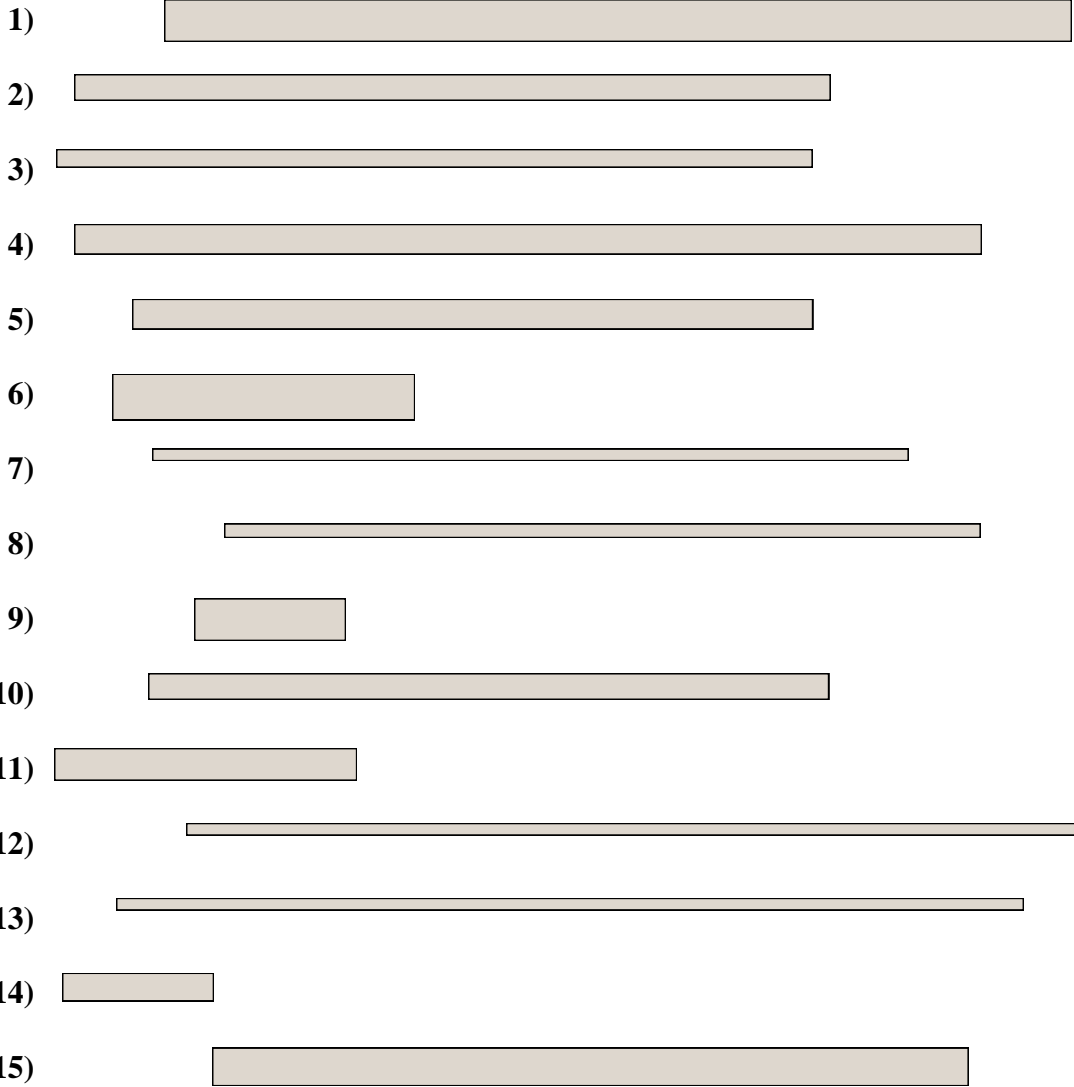
19. **Plot**

20. **Plot**

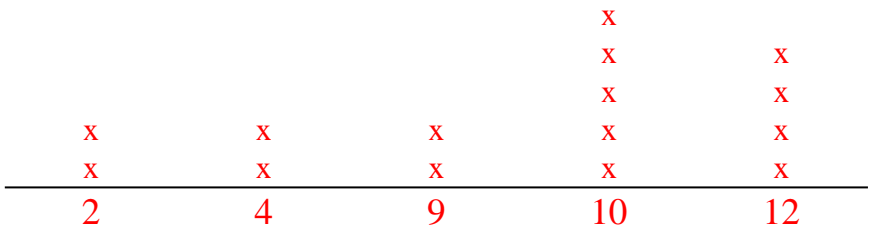
\mathbb{I}_m		1		2		3		4		5		6		7				
Cm	1	2	3	4	5	6	7	8	9	10	11	12	13	14	15	16	17	18
\mathbb{I}_m		1		2		3		4		5		6		7				
Cm	1	2	3	4	5	6	7	8	9	10	11	12	13	14	15	16	17	18
\mathbb{I}_m		1		2		3		4		5		6		7				
Cm	1	2	3	4	5	6	7	8	9	10	11	12	13	14	15	16	17	18
\mathbb{I}_m		1		2		3		4		5		6		7				
Cm	1	2	3	4	5	6	7	8	9	10	11	12	13	14	15	16	17	18
\mathbb{I}_m		1		2		3		4		5		6		7				
Cm	1	2	3	4	5	6	7	8	9	10	11	12	13	14	15	16	17	18
\mathbb{I}_m		1		2		3		4		5		6		7				
Cm	1	2	3	4	5	6	7	8	9	10	11	12	13	14	15	16	17	18
\mathbb{I}_m		1		2		3		4		5		6		7				
Cm	1	2	3	4	5	6	7	8	9	10	11	12	13	14	15	16	17	18
\mathbb{I}_m		1		2		3		4		5		6		7				
Cm	1	2	3	4	5	6	7	8	9	10	11	12	13	14	15	16	17	18
\mathbb{I}_m		1		2		3		4		5		6		7				
Cm	1	2	3	4	5	6	7	8	9	10	11	12	13	14	15	16	17	18
\mathbb{I}_m		1		2		3		4		5		6		7				
Cm	1	2	3	4	5	6	7	8	9	10	11	12	13	14	15	16	17	18



Measure each of the bars (in centimeters) and then generate a line plot based on the information.



Line Plot



Answers

- 1. 12
- 2. 10
- 3. 10
- 4. 12
- 5. 9
- 6. 4
- 7. 10
- 8. 10
- 9. 2
- 10. 9
- 11. 4
- 12. 12
- 13. 12
- 14. 2
- 15. 10
- 16. Plot
- 17. Plot
- 18. Plot
- 19. Plot
- 20. Plot



Measure each of the bars (in centimeters) and then generate a line plot based on the information.

- 1)
- 2)
- 3)
- 4)
- 5)
- 6)
- 7)
- 8)
- 9)
- 10)
- 11)
- 12)
- 13)
- 14)
- 15)

Line Plot

Answers

- 1. _____
- 2. _____
- 3. _____
- 4. _____
- 5. _____
- 6. _____
- 7. _____
- 8. _____
- 9. _____
- 10. _____
- 11. _____
- 12. _____
- 13. _____
- 14. _____
- 15. _____
- 16. **Plot**
- 17. **Plot**
- 18. **Plot**
- 19. **Plot**
- 20. **Plot**

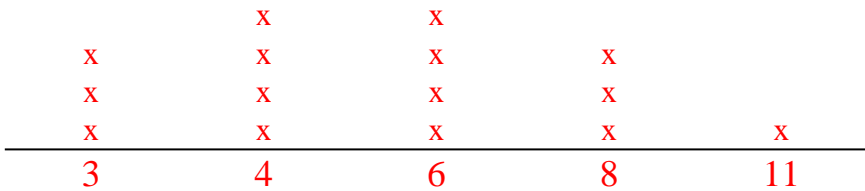
$\mathbb{I}m$		1		2		3		4		5		6		7				
Cm	1	2	3	4	5	6	7	8	9	10	11	12	13	14	15	16	17	18
$\mathbb{I}m$		1		2		3		4		5		6		7				
Cm	1	2	3	4	5	6	7	8	9	10	11	12	13	14	15	16	17	18
$\mathbb{I}m$		1		2		3		4		5		6		7				
Cm	1	2	3	4	5	6	7	8	9	10	11	12	13	14	15	16	17	18
$\mathbb{I}m$		1		2		3		4		5		6		7				
Cm	1	2	3	4	5	6	7	8	9	10	11	12	13	14	15	16	17	18
$\mathbb{I}m$		1		2		3		4		5		6		7				
Cm	1	2	3	4	5	6	7	8	9	10	11	12	13	14	15	16	17	18
$\mathbb{I}m$		1		2		3		4		5		6		7				
Cm	1	2	3	4	5	6	7	8	9	10	11	12	13	14	15	16	17	18
$\mathbb{I}m$		1		2		3		4		5		6		7				
Cm	1	2	3	4	5	6	7	8	9	10	11	12	13	14	15	16	17	18
$\mathbb{I}m$		1		2		3		4		5		6		7				
Cm	1	2	3	4	5	6	7	8	9	10	11	12	13	14	15	16	17	18
$\mathbb{I}m$		1		2		3		4		5		6		7				
Cm	1	2	3	4	5	6	7	8	9	10	11	12	13	14	15	16	17	18
$\mathbb{I}m$		1		2		3		4		5		6		7				
Cm	1	2	3	4	5	6	7	8	9	10	11	12	13	14	15	16	17	18



Measure each of the bars (in centimeters) and then generate a line plot based on the information.

- 1)
- 2)
- 3)
- 4)
- 5)
- 6)
- 7)
- 8)
- 9)
- 10)
- 11)
- 12)
- 13)
- 14)
- 15)

Line Plot



Answers

- 1. 4
- 2. 11
- 3. 4
- 4. 8
- 5. 6
- 6. 3
- 7. 4
- 8. 8
- 9. 6
- 10. 4
- 11. 8
- 12. 6
- 13. 6
- 14. 3
- 15. 3
- 16. Plot
- 17. Plot
- 18. Plot
- 19. Plot
- 20. Plot



Measure each of the bars (in centimeters) and then generate a line plot based on the information.

- 1)
- 2)
- 3)
- 4)
- 5)
- 6)
- 7)
- 8)
- 9)
- 10)
- 11)
- 12)
- 13)
- 14)
- 15)

Line Plot

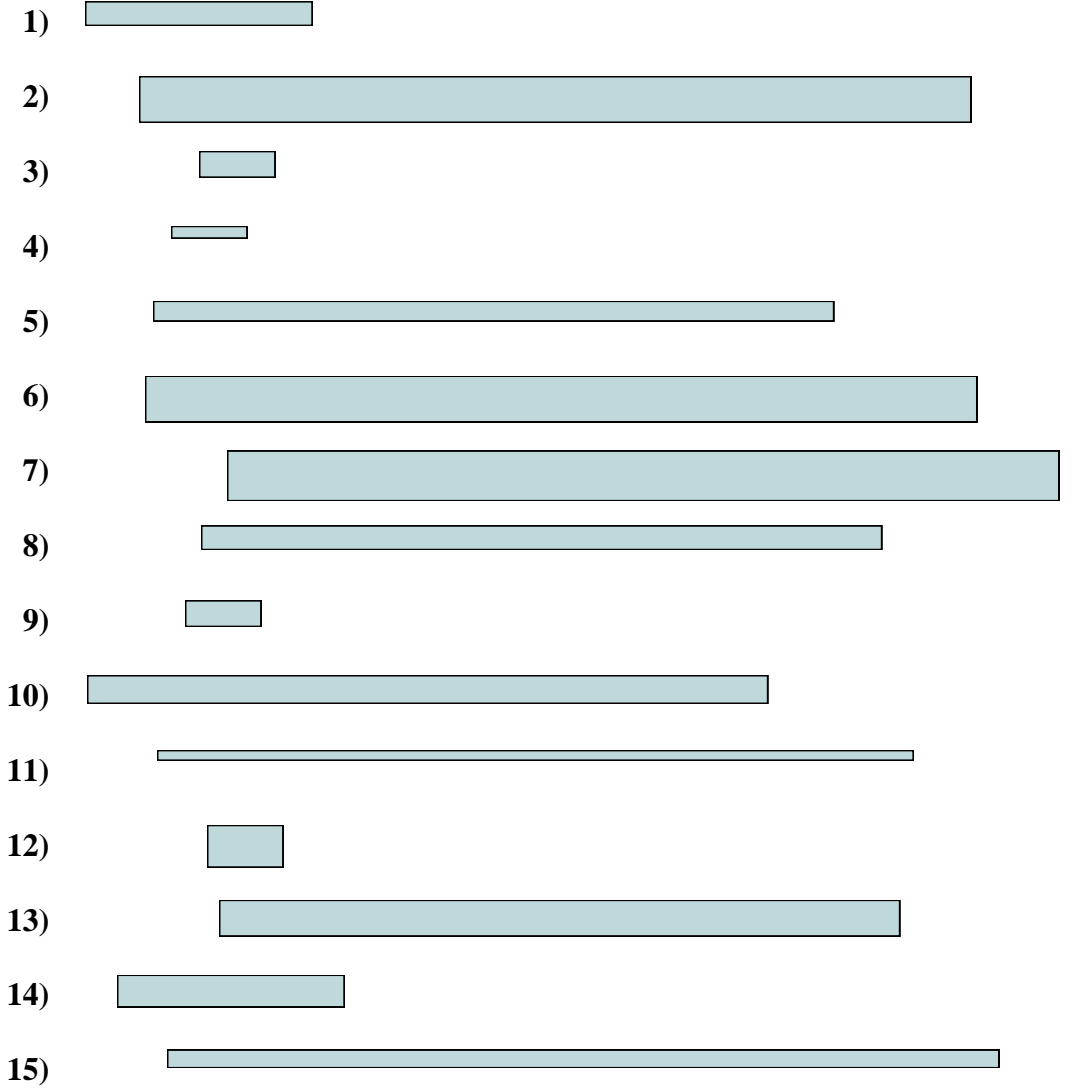
Answers

- 1. _____
- 2. _____
- 3. _____
- 4. _____
- 5. _____
- 6. _____
- 7. _____
- 8. _____
- 9. _____
- 10. _____
- 11. _____
- 12. _____
- 13. _____
- 14. _____
- 15. _____
- 16. **Plot**
- 17. **Plot**
- 18. **Plot**
- 19. **Plot**
- 20. **Plot**

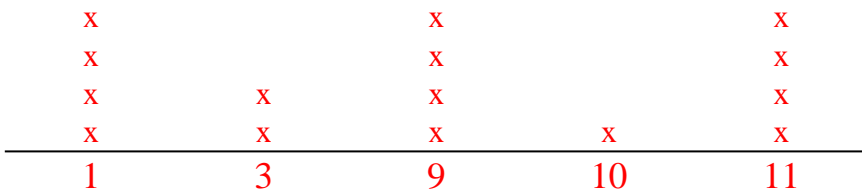
\mathbb{I}_m		1		2		3		4		5		6		7				
Cm	1	2	3	4	5	6	7	8	9	10	11	12	13	14	15	16	17	18
\mathbb{I}_m		1		2		3		4		5		6		7				
Cm	1	2	3	4	5	6	7	8	9	10	11	12	13	14	15	16	17	18
\mathbb{I}_m		1		2		3		4		5		6		7				
Cm	1	2	3	4	5	6	7	8	9	10	11	12	13	14	15	16	17	18
\mathbb{I}_m		1		2		3		4		5		6		7				
Cm	1	2	3	4	5	6	7	8	9	10	11	12	13	14	15	16	17	18
\mathbb{I}_m		1		2		3		4		5		6		7				
Cm	1	2	3	4	5	6	7	8	9	10	11	12	13	14	15	16	17	18
\mathbb{I}_m		1		2		3		4		5		6		7				
Cm	1	2	3	4	5	6	7	8	9	10	11	12	13	14	15	16	17	18
\mathbb{I}_m		1		2		3		4		5		6		7				
Cm	1	2	3	4	5	6	7	8	9	10	11	12	13	14	15	16	17	18
\mathbb{I}_m		1		2		3		4		5		6		7				
Cm	1	2	3	4	5	6	7	8	9	10	11	12	13	14	15	16	17	18
\mathbb{I}_m		1		2		3		4		5		6		7				
Cm	1	2	3	4	5	6	7	8	9	10	11	12	13	14	15	16	17	18
\mathbb{I}_m		1		2		3		4		5		6		7				
Cm	1	2	3	4	5	6	7	8	9	10	11	12	13	14	15	16	17	18



Measure each of the bars (in centimeters) and then generate a line plot based on the information.



Line Plot



Answers

- 1. 3
- 2. 11
- 3. 1
- 4. 1
- 5. 9
- 6. 11
- 7. 11
- 8. 9
- 9. 1
- 10. 9
- 11. 10
- 12. 1
- 13. 9
- 14. 3
- 15. 11
- 16. Plot
- 17. Plot
- 18. Plot
- 19. Plot
- 20. Plot