


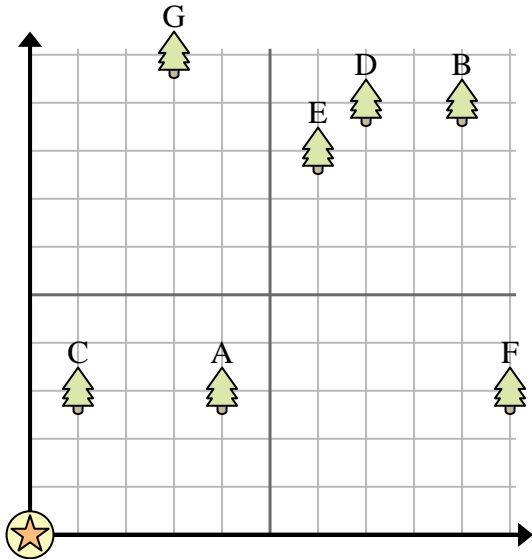




Use the grid to solve each problem.

-  = Tree
-  = House
-  = 1 Square Yard





- 1) Which tree is closest to the house?
- 2) Which tree is furthest from the house?
- 3) If you were to go 7 yards east and 9 yards north from the house which tree would you end up at?
- 4) Which tree is further west? Tree A or tree B?
- 5) Tom wanted to plant a new tree, but wanted to make sure it was at least 2 yards from a pre-existing tree. Should he plant a tree 3 yards east and 2 yards north of his house?

Answers

1. _____
2. _____
3. _____
4. _____
5. _____
6. _____
7. _____
8. _____
9. _____
10. _____

6) Which ship is closest to the buoy?

 = Ship

 = Buoy

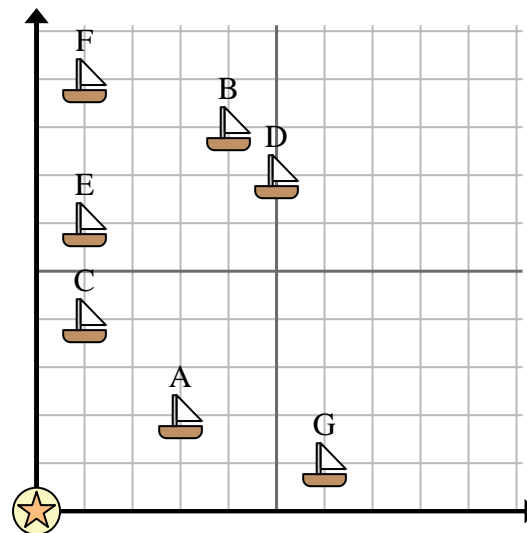
 = 1 Square Mile

7) Which ship is furthest from the buoy?

8) Which ship is 4 miles east and 8 miles north from the buoy?

9) Which ship is further north? Ship A or ship F?

10) A new ship wanted to fish, but the captain wanted to make sure they were at least 2 miles from another ship. If he sailed 9 miles east and 9 miles north would that spot suit him?



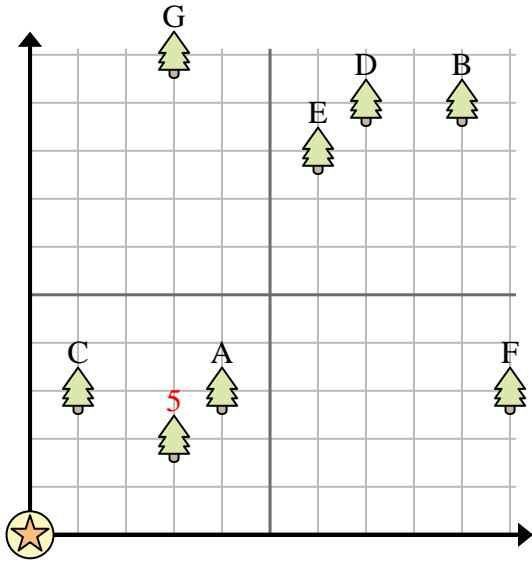


Use the grid to solve each problem.

= Tree

= House

= 1 Square Yard



- 1) Which tree is closest to the house?
- 2) Which tree is furthest from the house?
- 3) If you were to go 7 yards east and 9 yards north from the house which tree would you end up at?
- 4) Which tree is further west? Tree A or tree B?
- 5) Tom wanted to plant a new tree, but wanted to make sure it was at least 2 yards from a pre-existing tree. Should he plant a tree 3 yards east and 2 yards north of his house?

Answers

1. **C**
2. **B**
3. **D**
4. **A**
5. **no**
6. **A**
7. **F**
8. **B**
9. **F**
10. **yes**

6) Which ship is closest to the buoy?

= Ship

= Buoy

= 1 Square Mile

7) Which ship is furthest from the buoy?

8) Which ship is 4 miles east and 8 miles north from the buoy?

9) Which ship is further north? Ship A or ship F?

10) A new ship wanted to fish, but the captain wanted to make sure they were at least 2 miles from another ship. If he sailed 9 miles east and 9 miles north would that spot suit him?

