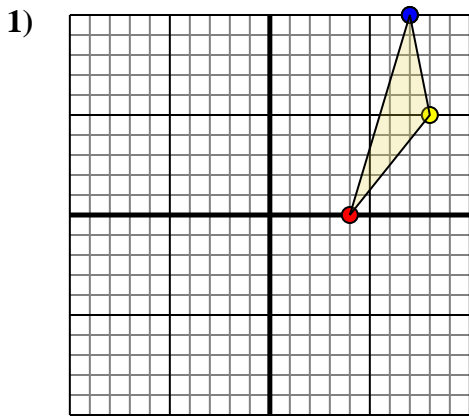




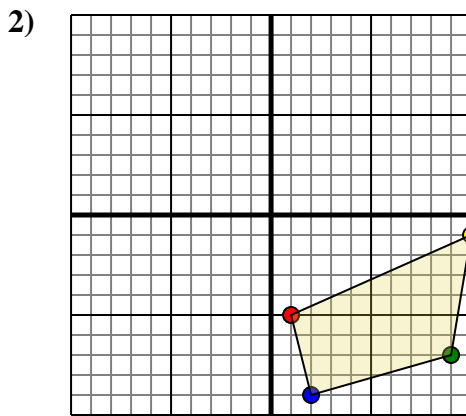
Rotate each shape as described.



The shape above has the following coordinates:

- A. (4,0)
- B. (8,5)
- C. (7,10)

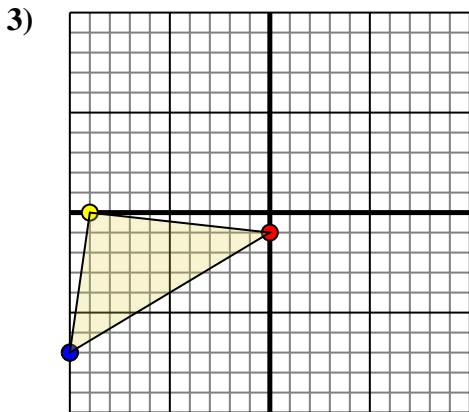
Rotate the shape 90° counter-clockwise.



The shape above has the following coordinates:

- A. (1,-5)
- B. (10,-1)
- C. (9,-7)
- D. (2,-9)

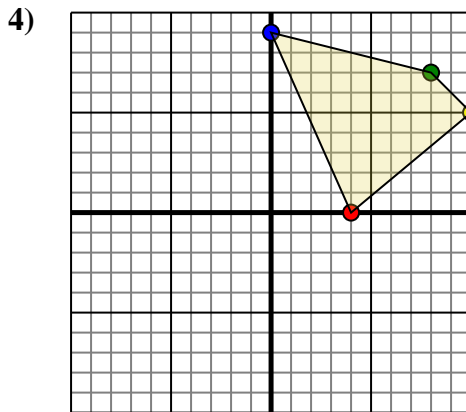
Rotate the shape 270° clockwise.



The shape above has the following coordinates:

- A. (0,-1)
- B. (-9,0)
- C. (-10,-7)

Rotate the shape 270° counter-clockwise.



The shape above has the following coordinates:

- A. (4,0)
- B. (10,5)
- C. (8,7)
- D. (0,9)

Rotate the shape 90° counter-clockwise.

Answers

1a. _____

1b. _____

1c. _____

1. **Graph**

2a. _____

2b. _____

2c. _____

2d. _____

2. **Graph**

3a. _____

3b. _____

3c. _____

3. **Graph**

4a. _____

4b. _____

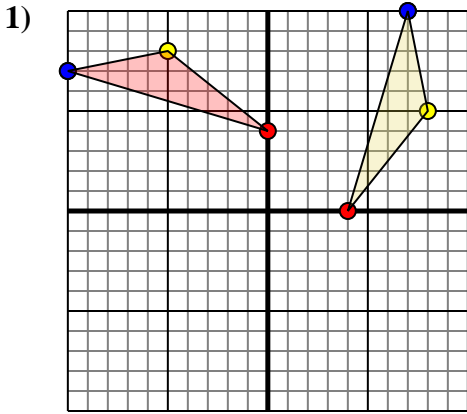
4c. _____

4d. _____

4. **Graph**



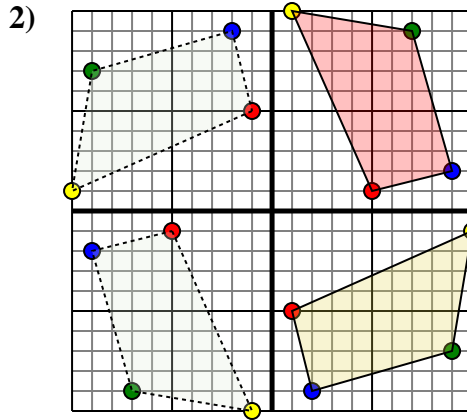
Rotate each shape as described.



The shape above has the following coordinates:

- A. (4,0)
- B. (8,5)
- C. (7,10)

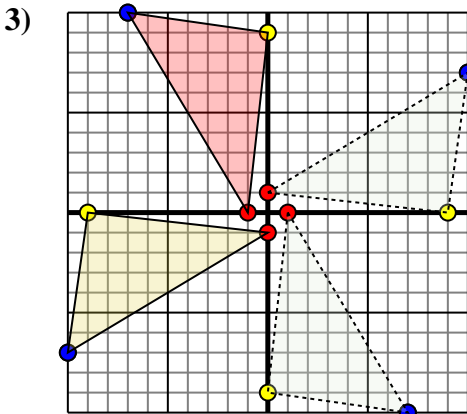
Rotate the shape 90° counter-clockwise.



The shape above has the following coordinates:

- A. (1,-5)
- B. (10,-1)
- C. (9,-7)
- D. (2,-9)

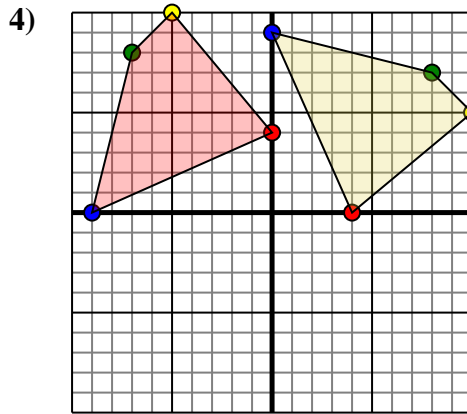
Rotate the shape 270° clockwise.



The shape above has the following coordinates:

- A. (0,-1)
- B. (-9,0)
- C. (-10,-7)

Rotate the shape 270° counter-clockwise.



The shape above has the following coordinates:

- A. (4,0)
- B. (10,5)
- C. (8,7)
- D. (0,9)

Rotate the shape 90° counter-clockwise.

Answers

1a. (0,4)

1b. (-5,8)

1c. (-10,7)

1. Graph

2a. (5,1)

2b. (1,10)

2c. (7,9)

2d. (9,2)

2. Graph

3a. (-1,0)

3b. (0,9)

3c. (-7,10)

3. Graph

4a. (0,4)

4b. (-5,10)

4c. (-7,8)

4d. (-9,0)

4. Graph