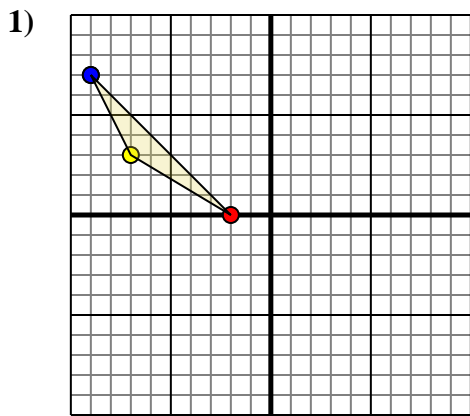




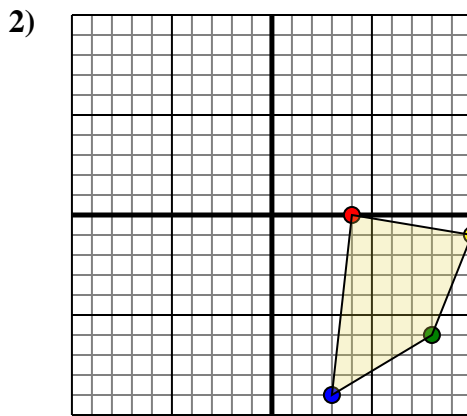
Rotate each shape as described.



The shape above has the following coordinates:

- A. (-2,0)
- B. (-7,3)
- C. (-9,7)

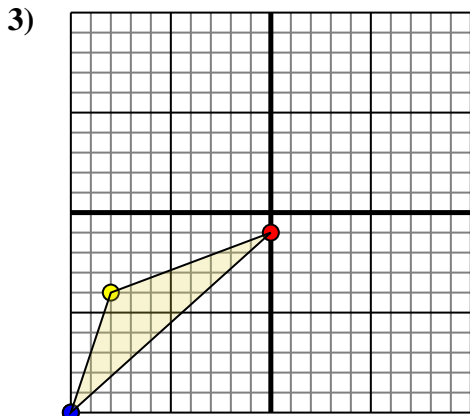
Rotate the shape 270° counter-clockwise.



The shape above has the following coordinates:

- A. (4,0)
- B. (10,-1)
- C. (8,-6)
- D. (3,-9)

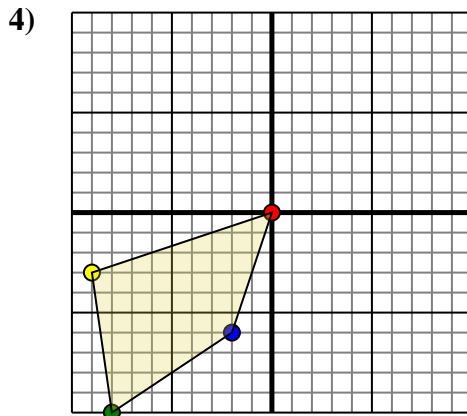
Rotate the shape 270° counter-clockwise.



The shape above has the following coordinates:

- A. (0,-1)
- B. (-8,-4)
- C. (-10,-10)

Rotate the shape 90° counter-clockwise.



The shape above has the following coordinates:

- A. (0,0)
- B. (-9,-3)
- C. (-8,-10)
- D. (-2,-6)

Rotate the shape 90° clockwise.

Answers

1a. _____

1b. _____

1c. _____

1. **Graph**

2a. _____

2b. _____

2c. _____

2d. _____

2. **Graph**

3a. _____

3b. _____

3c. _____

3. **Graph**

4a. _____

4b. _____

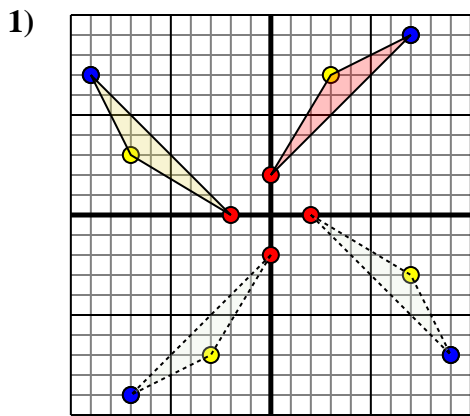
4c. _____

4d. _____

4. **Graph**



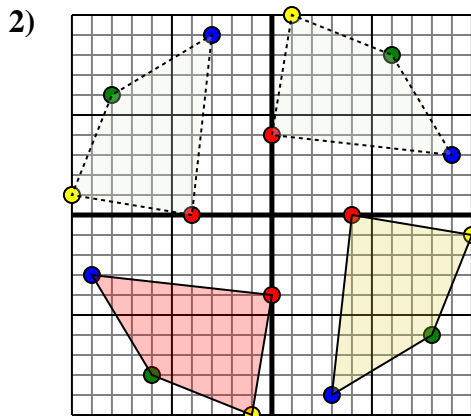
Rotate each shape as described.



The shape above has the following coordinates:

- A. (-2,0)
- B. (-7,3)
- C. (-9,7)

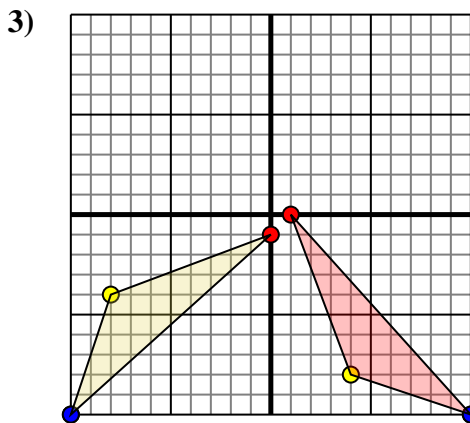
Rotate the shape 270° counter-clockwise.



The shape above has the following coordinates:

- A. (4,0)
- B. (10,-1)
- C. (8,-6)
- D. (3,-9)

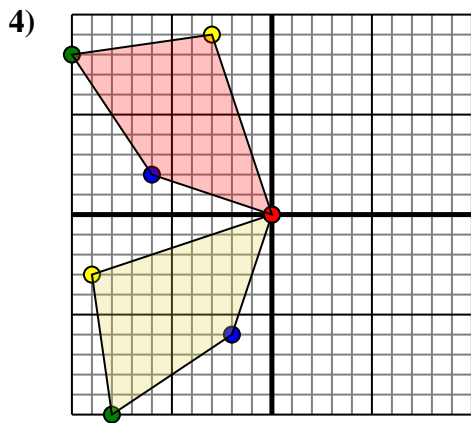
Rotate the shape 270° counter-clockwise.



The shape above has the following coordinates:

- A. (0,-1)
- B. (-8,-4)
- C. (-10,-10)

Rotate the shape 90° counter-clockwise.



The shape above has the following coordinates:

- A. (0,0)
- B. (-9,-3)
- C. (-8,-10)
- D. (-2,-6)

Rotate the shape 90° clockwise.

Answers

1a. (0,2)

1b. (3,7)

1c. (7,9)

1. Graph

2a. (-0,-4)

2b. (-1,-10)

2c. (-6,-8)

2d. (-9,-3)

2. Graph

3a. (1,-0)

3b. (4,-8)

3c. (10,-10)

3. Graph

4a. (0,0)

4b. (-3,9)

4c. (-10,8)

4d. (-6,2)

4. Graph