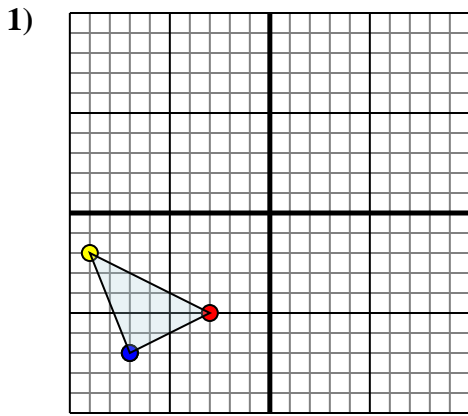




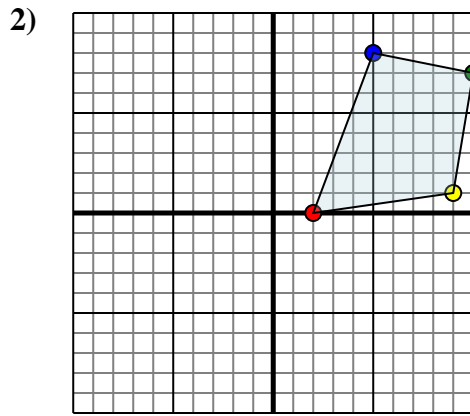
Reflect each shape as described.



The shape above has the following coordinates:

- A. (-3,-5)
- B. (-9,-2)
- C. (-7,-7)

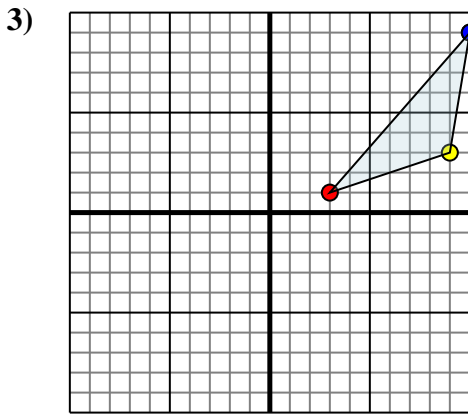
Reflect the shape over the X axis.



The shape above has the following coordinates:

- A. (2,0)
- B. (9,1)
- C. (10,7)
- D. (5,8)

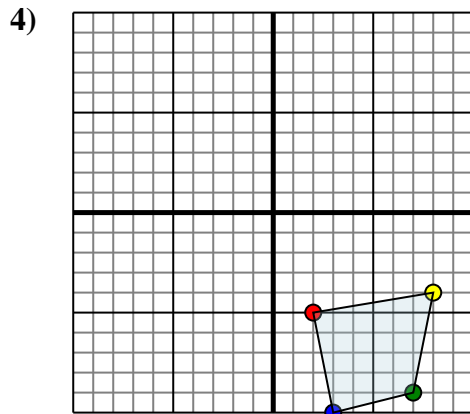
Reflect the shape over the X axis.



The shape above has the following coordinates:

- A. (3,1)
- B. (9,3)
- C. (10,9)

Reflect the shape over the Y axis.



The shape above has the following coordinates:

- A. (2,-5)
- B. (8,-4)
- C. (7,-9)
- D. (3,-10)

Reflect the shape over the X axis.

Answers

1a. _____

1b. _____

1c. _____

1. **Graph**

2a. _____

2b. _____

2c. _____

2d. _____

2. **Graph**

3a. _____

3b. _____

3c. _____

3. **Graph**

4a. _____

4b. _____

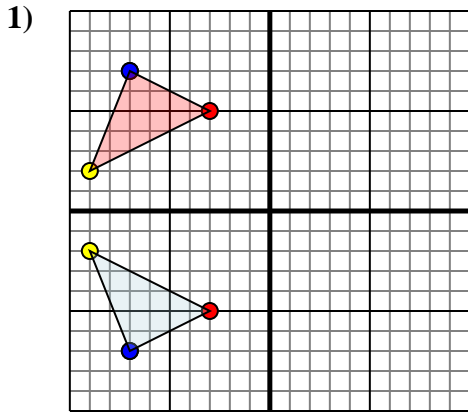
4c. _____

4d. _____

4. **Graph**



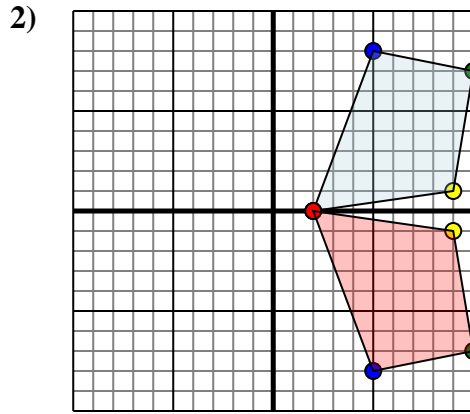
Reflect each shape as described.



The shape above has the following coordinates:

- A. (-3,-5)
- B. (-9,-2)
- C. (-7,-7)

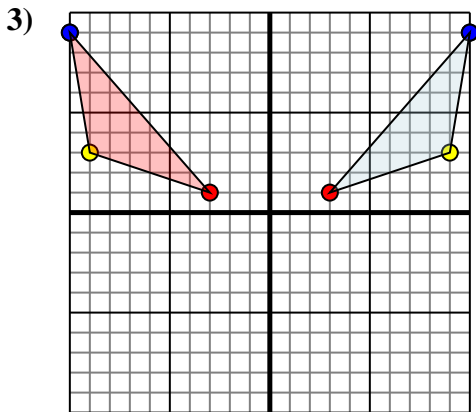
Reflect the shape over the X axis.



The shape above has the following coordinates:

- A. (2,0)
- B. (9,1)
- C. (10,7)
- D. (5,8)

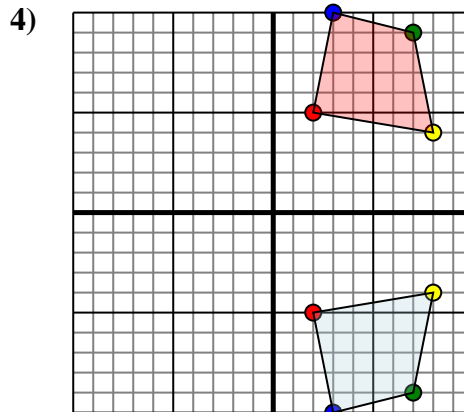
Reflect the shape over the X axis.



The shape above has the following coordinates:

- A. (3,1)
- B. (9,3)
- C. (10,9)

Reflect the shape over the Y axis.



The shape above has the following coordinates:

- A. (2,-5)
- B. (8,-4)
- C. (7,-9)
- D. (3,-10)

Reflect the shape over the X axis.

Answers

1a. (-3,5)

1b. (-9,2)

1c. (-7,7)

1. Graph

2a. (2,0)

2b. (9,-1)

2c. (10,-7)

2d. (5,-8)

2. Graph

3a. (-3,1)

3b. (-9,3)

3c. (-10,9)

3. Graph

4a. (2,5)

4b. (8,4)

4c. (7,9)

4d. (3,10)

4. Graph