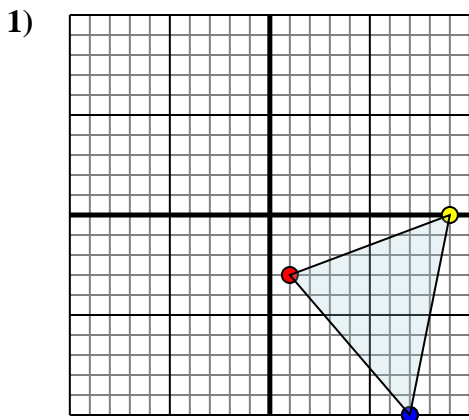




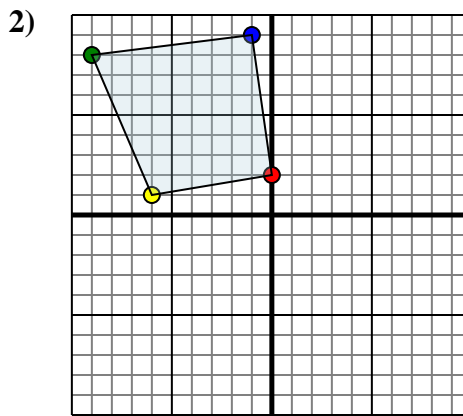
Reflect each shape as described.



The shape above has the following coordinates:

- A. (1,-3)
- B. (9,0)
- C. (7,-10)

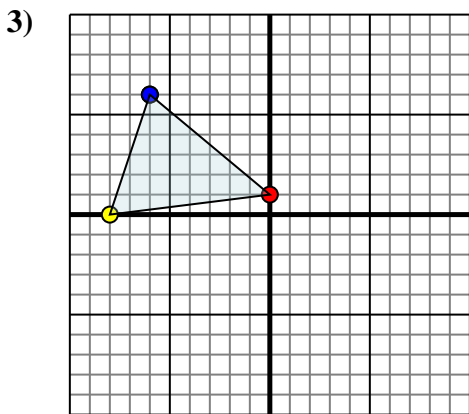
Reflect the shape over the X axis.



The shape above has the following coordinates:

- A. (0,2)
- B. (-6,1)
- C. (-9,8)
- D. (-1,9)

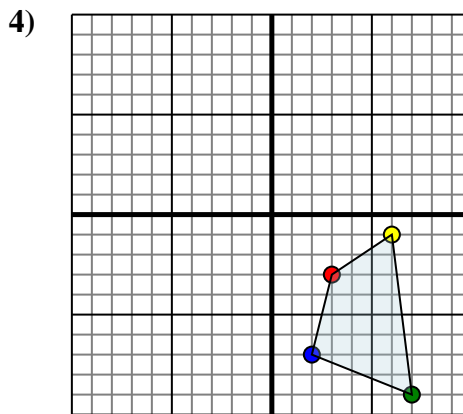
Reflect the shape over the X axis.



The shape above has the following coordinates:

- A. (0,1)
- B. (-8,0)
- C. (-6,6)

Reflect the shape over the X axis.



The shape above has the following coordinates:

- A. (3,-3)
- B. (6,-1)
- C. (7,-9)
- D. (2,-7)

Reflect the shape over the Y axis.

**Answers**

1a. \_\_\_\_\_

1b. \_\_\_\_\_

1c. \_\_\_\_\_

1. **Graph**

2a. \_\_\_\_\_

2b. \_\_\_\_\_

2c. \_\_\_\_\_

2d. \_\_\_\_\_

2. **Graph**

3a. \_\_\_\_\_

3b. \_\_\_\_\_

3c. \_\_\_\_\_

3. **Graph**

4a. \_\_\_\_\_

4b. \_\_\_\_\_

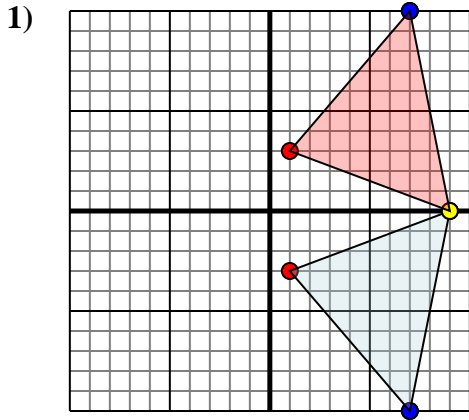
4c. \_\_\_\_\_

4d. \_\_\_\_\_

4. **Graph**



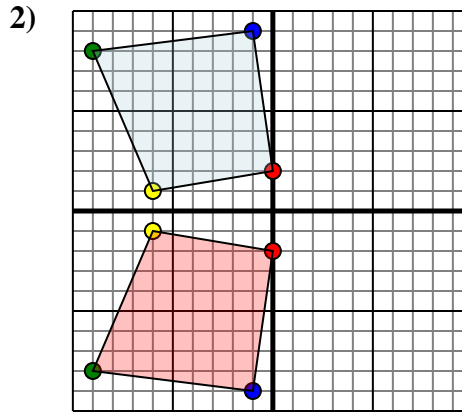
Reflect each shape as described.



The shape above has the following coordinates:

- A. (1,-3)
- B. (9,0)
- C. (7,-10)

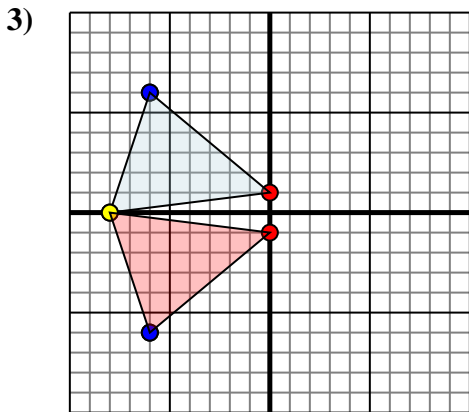
Reflect the shape over the X axis.



The shape above has the following coordinates:

- A. (0,2)
- B. (-6,1)
- C. (-9,8)
- D. (-1,9)

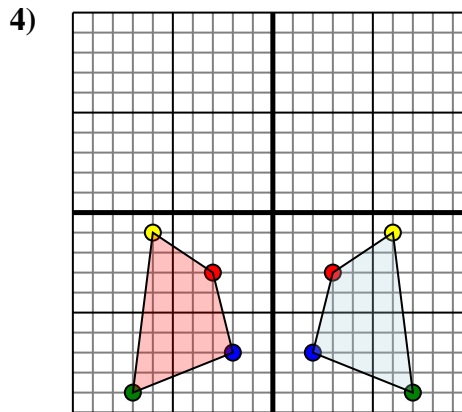
Reflect the shape over the X axis.



The shape above has the following coordinates:

- A. (0,1)
- B. (-8,0)
- C. (-6,6)

Reflect the shape over the X axis.



The shape above has the following coordinates:

- A. (3,-3)
- B. (6,-1)
- C. (7,-9)
- D. (2,-7)

Reflect the shape over the Y axis.

Answers

1a. **(1,3)**

1b. **(9,0)**

1c. **(7,10)**

1. **Graph**

2a. **(0,-2)**

2b. **(-6,-1)**

2c. **(-9,-8)**

2d. **(-1,-9)**

2. **Graph**

3a. **(0,-1)**

3b. **(-8,0)**

3c. **(-6,-6)**

3. **Graph**

4a. **(-3,-3)**

4b. **(-6,-1)**

4c. **(-7,-9)**

4d. **(-2,-7)**

4. **Graph**