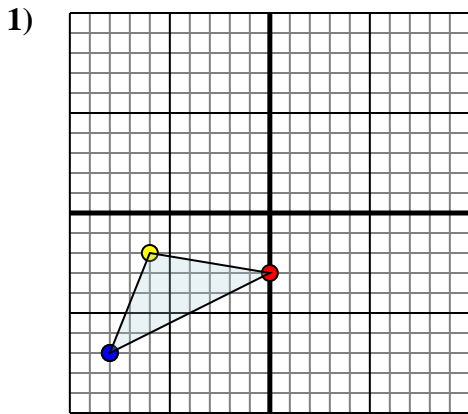




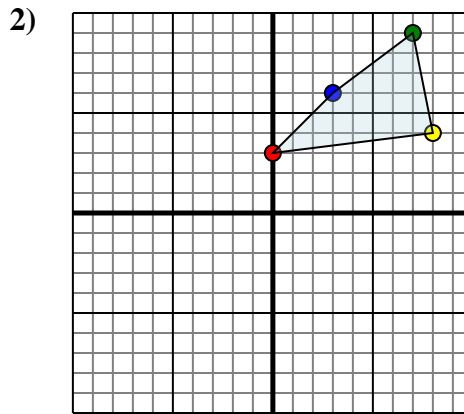
Reflect each shape as described.



The shape above has the following coordinates:

- A. (0,-3)
- B. (-6,-2)
- C. (-8,-7)

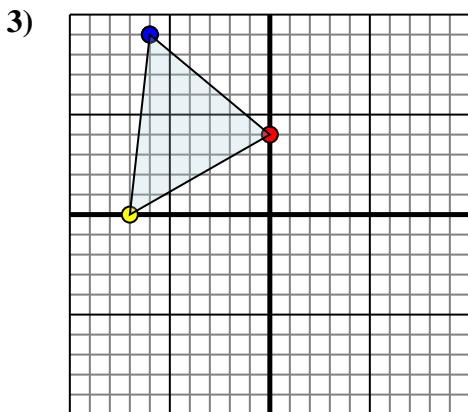
Reflect the shape over the X axis.



The shape above has the following coordinates:

- A. (0,3)
- B. (8,4)
- C. (7,9)
- D. (3,6)

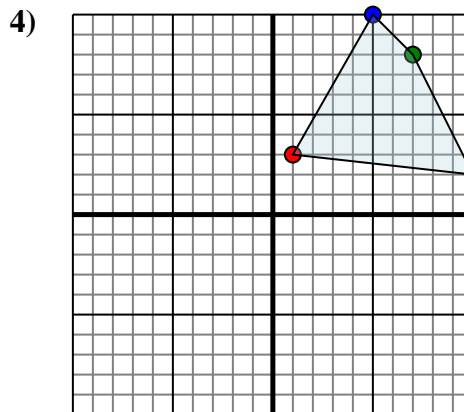
Reflect the shape over the Y axis.



The shape above has the following coordinates:

- A. (0,4)
- B. (-7,0)
- C. (-6,9)

Reflect the shape over the Y axis.



The shape above has the following coordinates:

- A. (1,3)
- B. (10,2)
- C. (7,8)
- D. (5,10)

Reflect the shape over the Y axis.

Answers

1a. _____

1b. _____

1c. _____

1. **Graph**

2a. _____

2b. _____

2c. _____

2d. _____

2. **Graph**

3a. _____

3b. _____

3c. _____

3. **Graph**

4a. _____

4b. _____

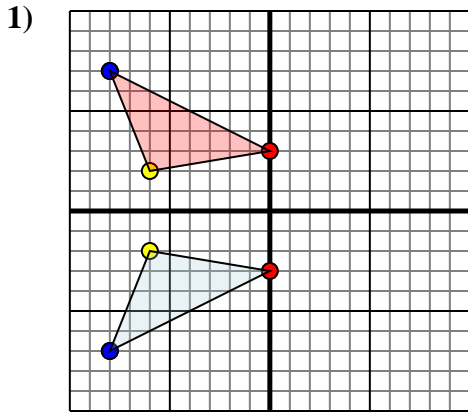
4c. _____

4d. _____

4. **Graph**



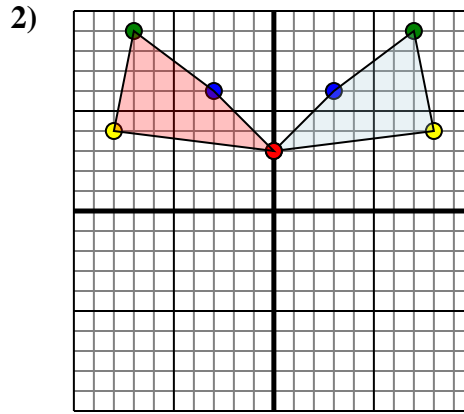
Reflect each shape as described.



The shape above has the following coordinates:

- A. (0,-3)
- B. (-6,-2)
- C. (-8,-7)

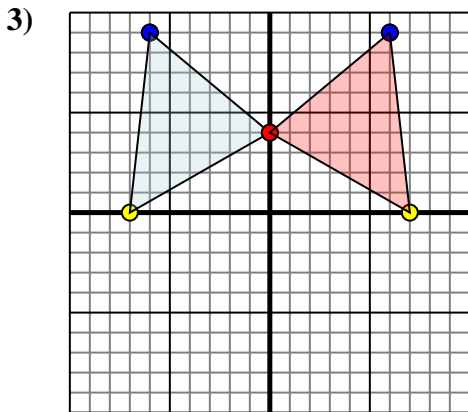
Reflect the shape over the X axis.



The shape above has the following coordinates:

- A. (0,3)
- B. (8,4)
- C. (7,9)
- D. (3,6)

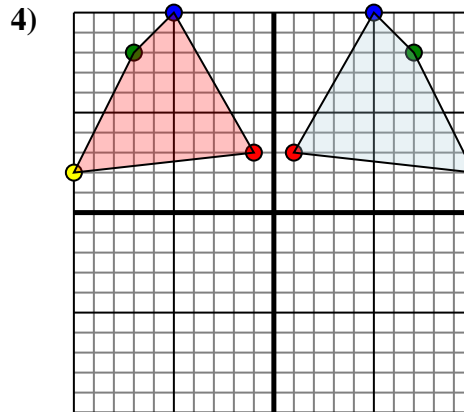
Reflect the shape over the Y axis.



The shape above has the following coordinates:

- A. (0,4)
- B. (-7,0)
- C. (-6,9)

Reflect the shape over the Y axis.



The shape above has the following coordinates:

- A. (1,3)
- B. (10,2)
- C. (7,8)
- D. (5,10)

Reflect the shape over the Y axis.

Answers

1a. (0,3)

1b. (-6,2)

1c. (-8,7)

1. Graph

2a. (0,3)

2b. (-8,4)

2c. (-7,9)

2d. (-3,6)

2. Graph

3a. (0,4)

3b. (7,0)

3c. (6,9)

3. Graph

4a. (-1,3)

4b. (-10,2)

4c. (-7,8)

4d. (-5,10)

4. Graph