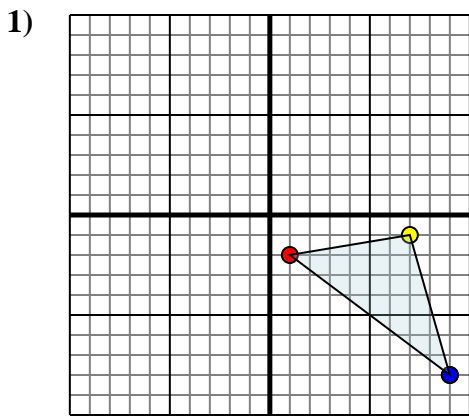




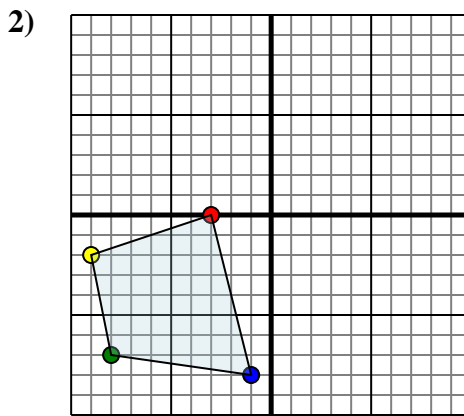
Reflect each shape as described.



The shape above has the following coordinates:

- A. (1,-2)
- B. (7,-1)
- C. (9,-8)

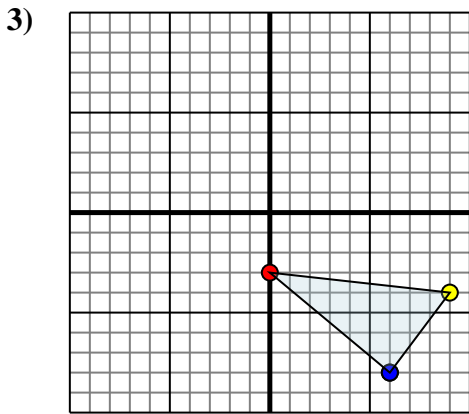
Reflect the shape over the Y axis.



The shape above has the following coordinates:

- A. (-3,0)
- B. (-9,-2)
- C. (-8,-7)
- D. (-1,-8)

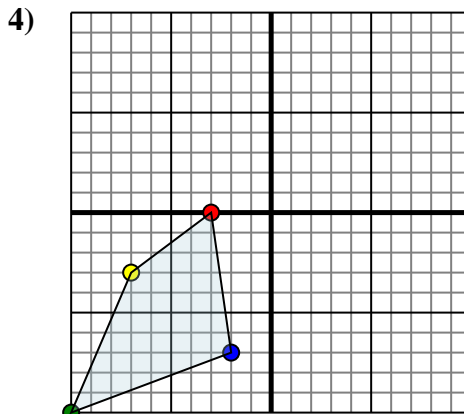
Reflect the shape over the Y axis.



The shape above has the following coordinates:

- A. (0,-3)
- B. (9,-4)
- C. (6,-8)

Reflect the shape over the Y axis.



The shape above has the following coordinates:

- A. (-3,0)
- B. (-7,-3)
- C. (-10,-10)
- D. (-2,-7)

Reflect the shape over the Y axis.

Answers

1a. _____

1b. _____

1c. _____

1. **Graph**

2a. _____

2b. _____

2c. _____

2d. _____

2. **Graph**

3a. _____

3b. _____

3c. _____

3. **Graph**

4a. _____

4b. _____

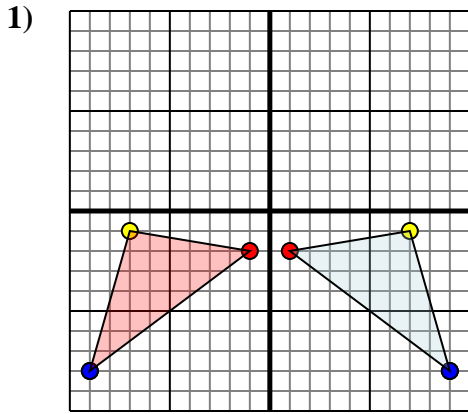
4c. _____

4d. _____

4. **Graph**



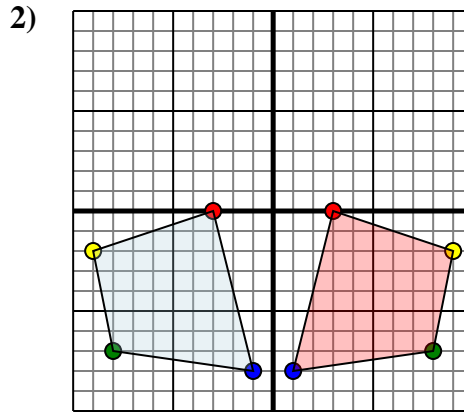
Reflect each shape as described.



The shape above has the following coordinates:

- A. (1,-2)
- B. (7,-1)
- C. (9,-8)

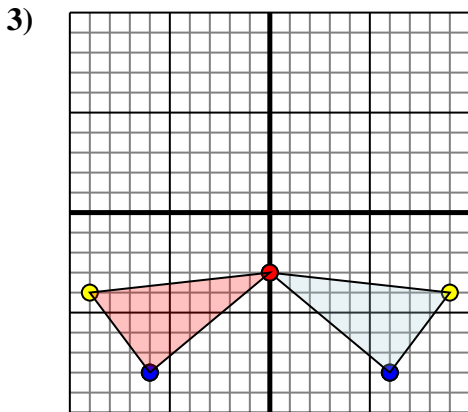
Reflect the shape over the Y axis.



The shape above has the following coordinates:

- A. (-3,0)
- B. (-9,-2)
- C. (-8,-7)
- D. (-1,-8)

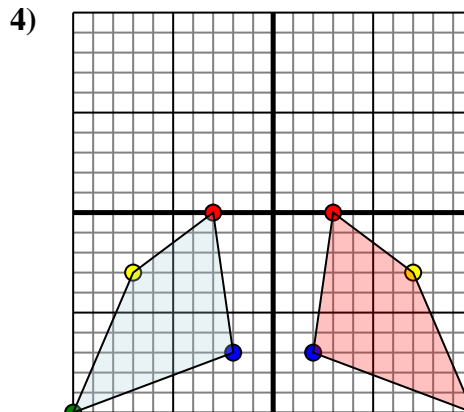
Reflect the shape over the Y axis.



The shape above has the following coordinates:

- A. (0,-3)
- B. (9,-4)
- C. (6,-8)

Reflect the shape over the Y axis.



The shape above has the following coordinates:

- A. (-3,0)
- B. (-7,-3)
- C. (-10,-10)
- D. (-2,-7)

Reflect the shape over the Y axis.

Answers

1a. **(-1,-2)**

1b. **(-7,-1)**

1c. **(-9,-8)**

1. **Graph**

2a. **(3,0)**

2b. **(9,-2)**

2c. **(8,-7)**

2d. **(1,-8)**

2. **Graph**

3a. **(0,-3)**

3b. **(-9,-4)**

3c. **(-6,-8)**

3. **Graph**

4a. **(3,0)**

4b. **(7,-3)**

4c. **(10,-10)**

4d. **(2,-7)**

4. **Graph**