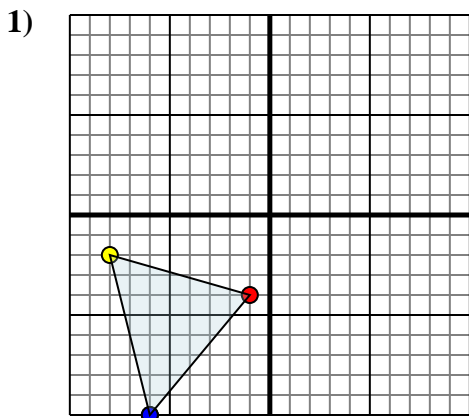




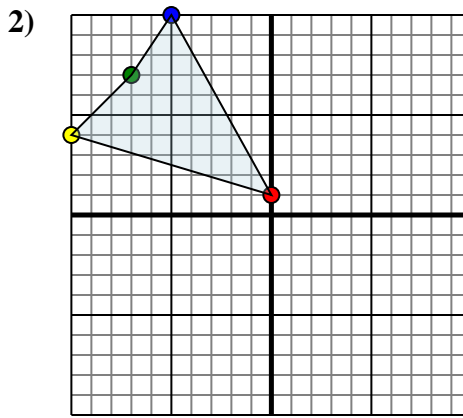
Reflect each shape as described.



The shape above has the following coordinates:

- A. (-1,-4)
- B. (-8,-2)
- C. (-6,-10)

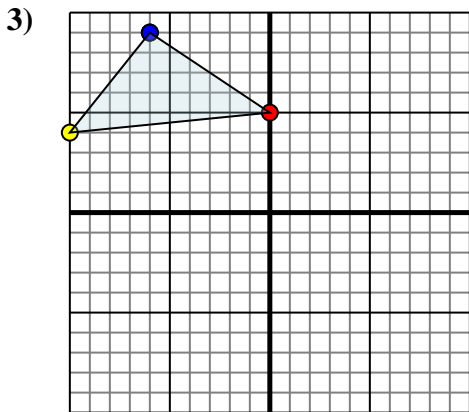
Reflect the shape over the Y axis.



The shape above has the following coordinates:

- A. (0,1)
- B. (-10,4)
- C. (-7,7)
- D. (-5,10)

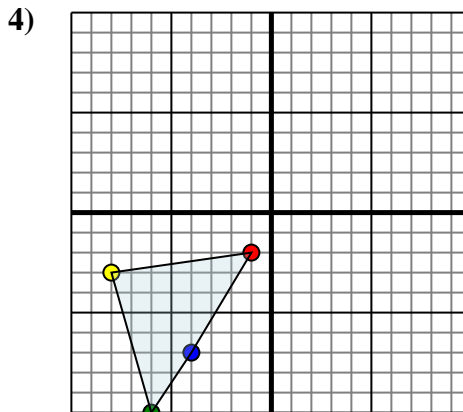
Reflect the shape over the Y axis.



The shape above has the following coordinates:

- A. (0,5)
- B. (-10,4)
- C. (-6,9)

Reflect the shape over the X axis.



The shape above has the following coordinates:

- A. (-1,-2)
- B. (-8,-3)
- C. (-6,-10)
- D. (-4,-7)

Reflect the shape over the X axis.

Answers

1a. _____

1b. _____

1c. _____

1. **Graph**

2a. _____

2b. _____

2c. _____

2d. _____

2. **Graph**

3a. _____

3b. _____

3c. _____

3. **Graph**

4a. _____

4b. _____

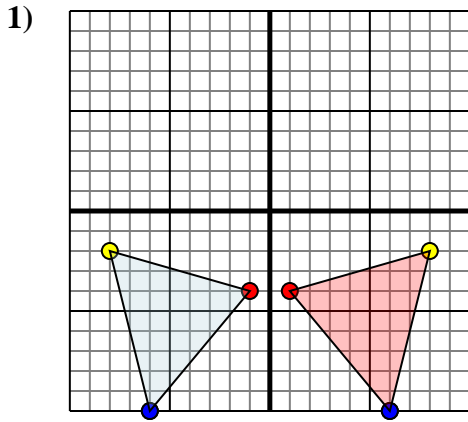
4c. _____

4d. _____

4. **Graph**



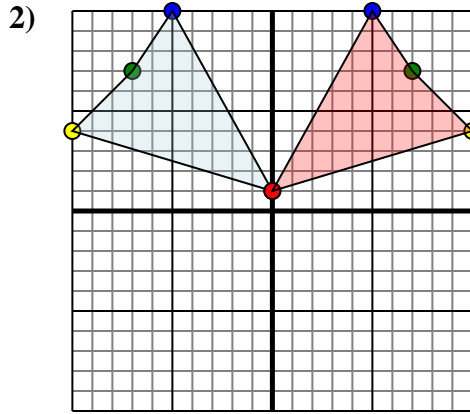
Reflect each shape as described.



The shape above has the following coordinates:

- A. (-1,-4)
- B. (-8,-2)
- C. (-6,-10)

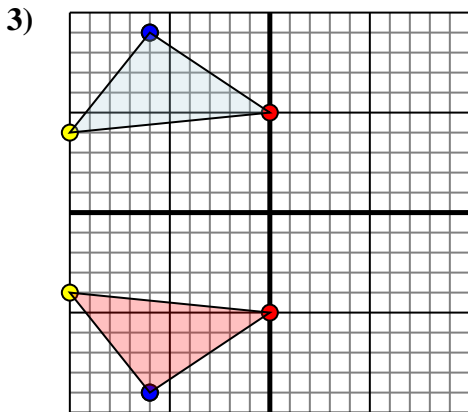
Reflect the shape over the Y axis.



The shape above has the following coordinates:

- A. (0,1)
- B. (-10,4)
- C. (-7,7)
- D. (-5,10)

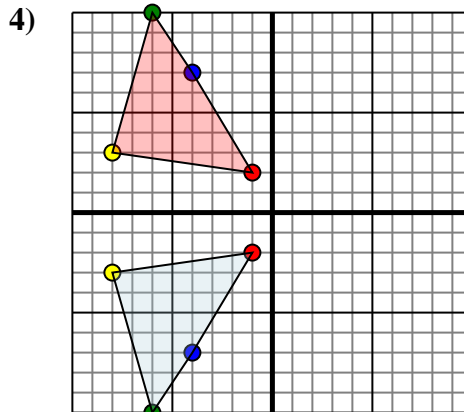
Reflect the shape over the Y axis.



The shape above has the following coordinates:

- A. (0,5)
- B. (-10,4)
- C. (-6,9)

Reflect the shape over the X axis.



The shape above has the following coordinates:

- A. (-1,-2)
- B. (-8,-3)
- C. (-6,-10)
- D. (-4,-7)

Reflect the shape over the X axis.

Answers

1a. **(1,-4)**

1b. **(8,-2)**

1c. **(6,-10)**

1. **Graph**

2a. **(0,1)**

2b. **(10,4)**

2c. **(7,7)**

2d. **(5,10)**

2. **Graph**

3a. **(0,-5)**

3b. **(-10,-4)**

3c. **(-6,-9)**

3. **Graph**

4a. **(-1,2)**

4b. **(-8,3)**

4c. **(-6,10)**

4d. **(-4,7)**

4. **Graph**