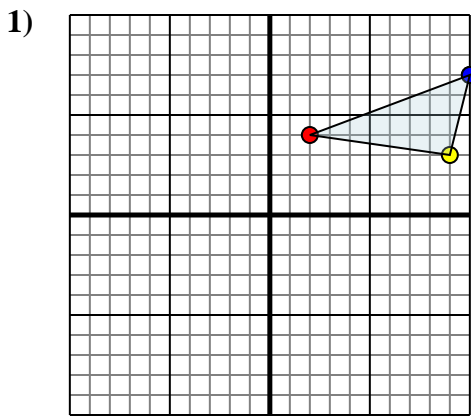




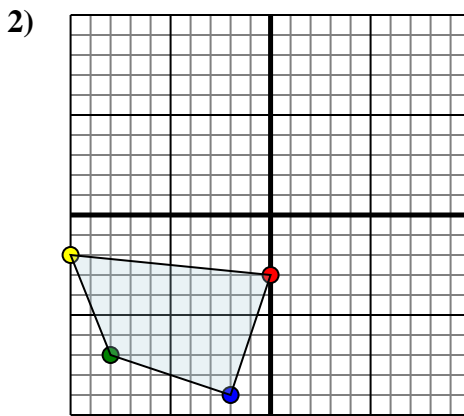
Reflect each shape as described.



The shape above has the following coordinates:

- A. (2,4)
- B. (9,3)
- C. (10,7)

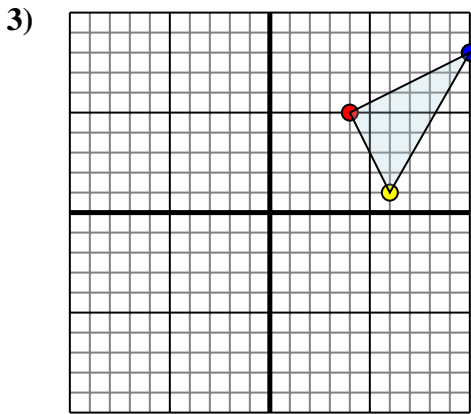
Reflect the shape over the Y axis.



The shape above has the following coordinates:

- A. (0,-3)
- B. (-10,-2)
- C. (-8,-7)
- D. (-2,-9)

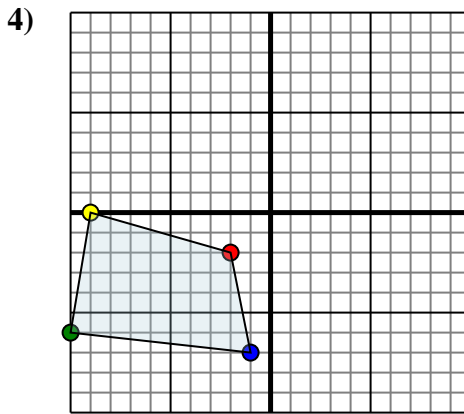
Reflect the shape over the X axis.



The shape above has the following coordinates:

- A. (4,5)
- B. (6,1)
- C. (10,8)

Reflect the shape over the X axis.



The shape above has the following coordinates:

- A. (-2,-2)
- B. (-9,0)
- C. (-10,-6)
- D. (-1,-7)

Reflect the shape over the X axis.

Answers

1a. _____

1b. _____

1c. _____

1. **Graph**

2a. _____

2b. _____

2c. _____

2d. _____

2. **Graph**

3a. _____

3b. _____

3c. _____

3. **Graph**

4a. _____

4b. _____

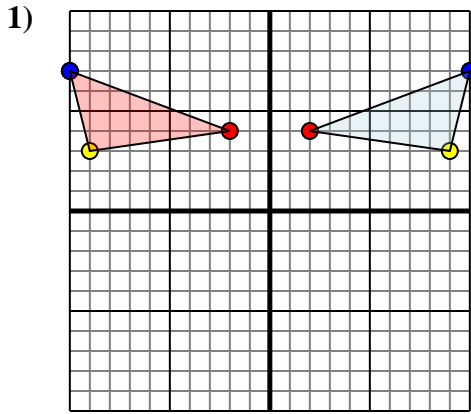
4c. _____

4d. _____

4. **Graph**



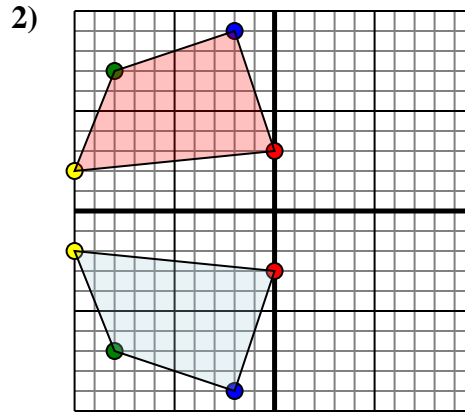
Reflect each shape as described.



The shape above has the following coordinates:

- A. (2,4)
- B. (9,3)
- C. (10,7)

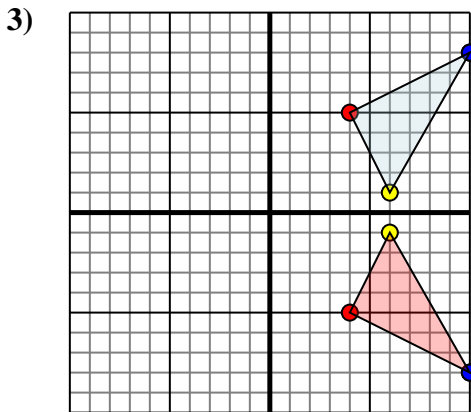
Reflect the shape over the Y axis.



The shape above has the following coordinates:

- A. (0,-3)
- B. (-10,-2)
- C. (-8,-7)
- D. (-2,-9)

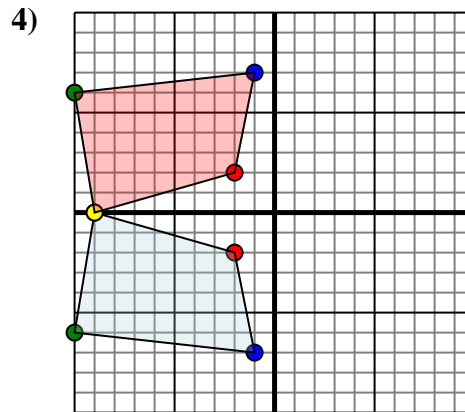
Reflect the shape over the X axis.



The shape above has the following coordinates:

- A. (4,5)
- B. (6,1)
- C. (10,8)

Reflect the shape over the X axis.



The shape above has the following coordinates:

- A. (-2,-2)
- B. (-9,0)
- C. (-10,-6)
- D. (-1,-7)

Reflect the shape over the X axis.

Answers

1a. **(-2,4)**

1b. **(-9,3)**

1c. **(-10,7)**

1. **Graph**

2a. **(0,3)**

2b. **(-10,2)**

2c. **(-8,7)**

2d. **(-2,9)**

2. **Graph**

3a. **(4,-5)**

3b. **(6,-1)**

3c. **(10,-8)**

3. **Graph**

4a. **(-2,2)**

4b. **(-9,0)**

4c. **(-10,6)**

4d. **(-1,7)**

4. **Graph**