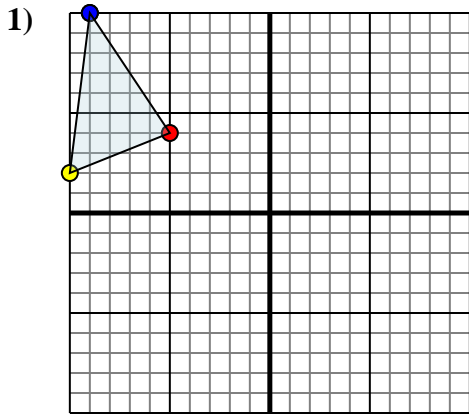




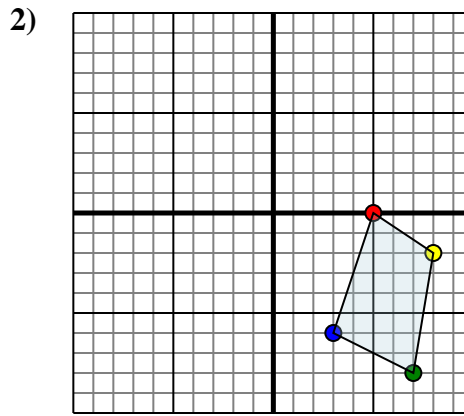
Reflect each shape as described.



The shape above has the following coordinates:

- A. (-5,4)
- B. (-10,2)
- C. (-9,10)

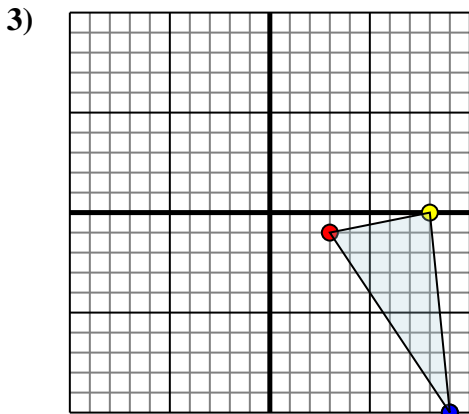
Reflect the shape over the X axis.



The shape above has the following coordinates:

- A. (5,0)
- B. (8,-2)
- C. (7,-8)
- D. (3,-6)

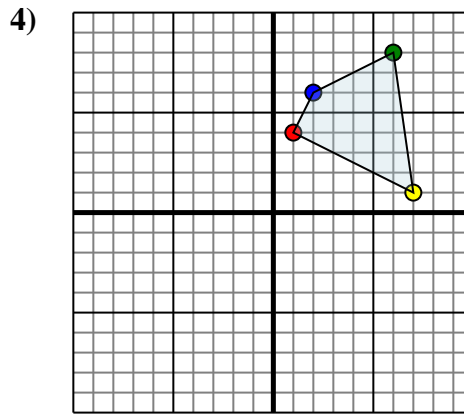
Reflect the shape over the Y axis.



The shape above has the following coordinates:

- A. (3,-1)
- B. (8,0)
- C. (9,-10)

Reflect the shape over the X axis.



The shape above has the following coordinates:

- A. (1,4)
- B. (7,1)
- C. (6,8)
- D. (2,6)

Reflect the shape over the X axis.

Answers

1a. \_\_\_\_\_

1b. \_\_\_\_\_

1c. \_\_\_\_\_

1. Graph

2a. \_\_\_\_\_

2b. \_\_\_\_\_

2c. \_\_\_\_\_

2d. \_\_\_\_\_

2. Graph

3a. \_\_\_\_\_

3b. \_\_\_\_\_

3c. \_\_\_\_\_

3. Graph

4a. \_\_\_\_\_

4b. \_\_\_\_\_

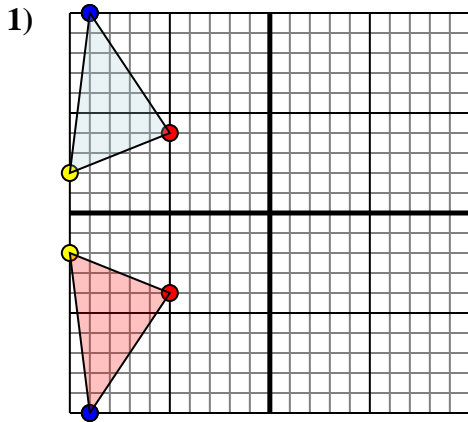
4c. \_\_\_\_\_

4d. \_\_\_\_\_

4. Graph



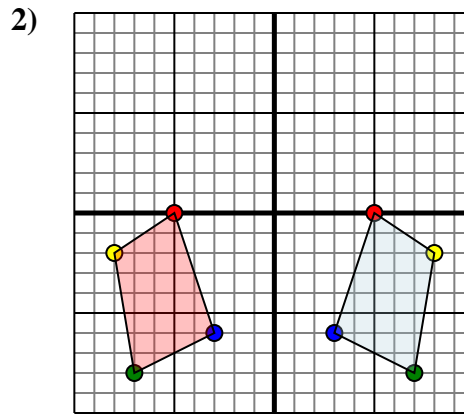
Reflect each shape as described.



The shape above has the following coordinates:

- A. (-5,4)
- B. (-10,2)
- C. (-9,10)

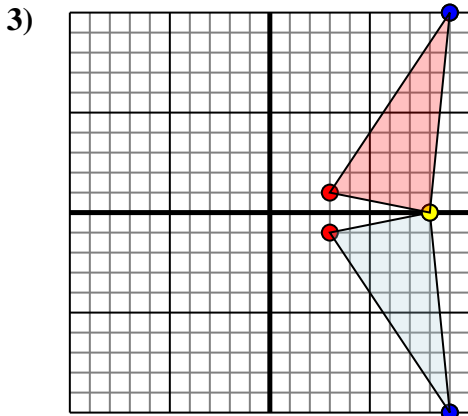
Reflect the shape over the X axis.



The shape above has the following coordinates:

- A. (5,0)
- B. (8,-2)
- C. (7,-8)
- D. (3,-6)

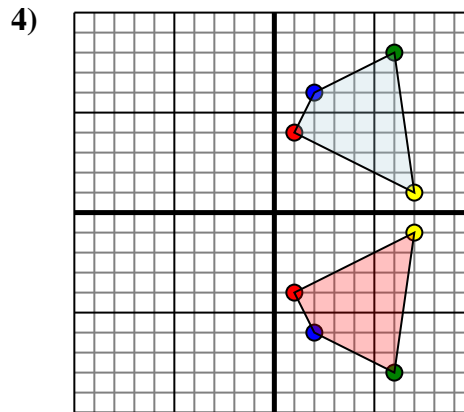
Reflect the shape over the Y axis.



The shape above has the following coordinates:

- A. (3,-1)
- B. (8,0)
- C. (9,-10)

Reflect the shape over the X axis.



The shape above has the following coordinates:

- A. (1,4)
- B. (7,1)
- C. (6,8)
- D. (2,6)

Reflect the shape over the X axis.

Answers

1a. **(-5,-4)**

1b. **(-10,-2)**

1c. **(-9,-10)**

1. **Graph**

2a. **(-5,0)**

2b. **(-8,-2)**

2c. **(-7,-8)**

2d. **(-3,-6)**

2. **Graph**

3a. **(3,1)**

3b. **(8,0)**

3c. **(9,10)**

3. **Graph**

4a. **(1,-4)**

4b. **(7,-1)**

4c. **(6,-8)**

4d. **(2,-6)**

4. **Graph**