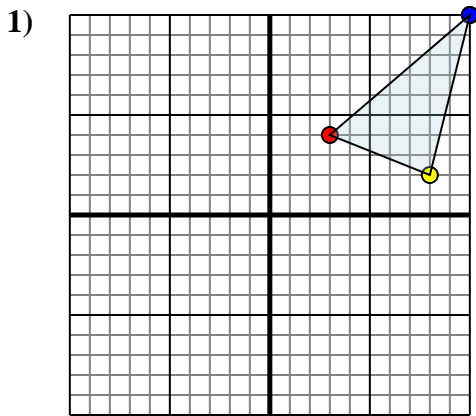




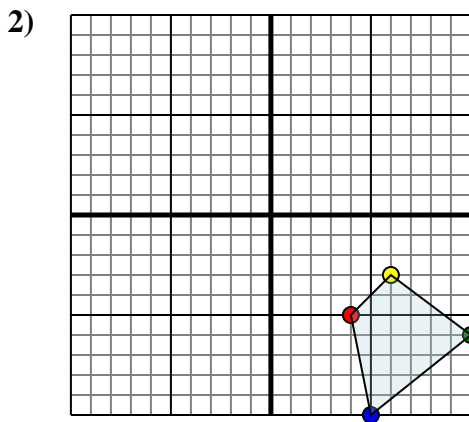
Reflect each shape as described.



The shape above has the following coordinates:

- A. (3,4)
- B. (8,2)
- C. (10,10)

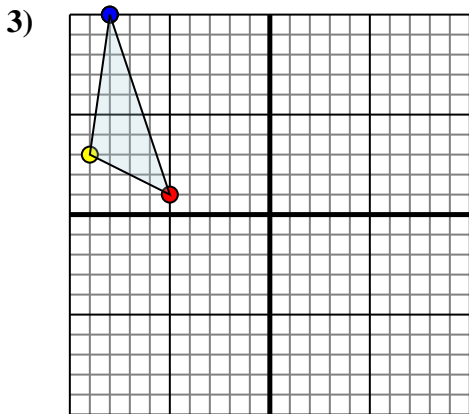
Reflect the shape over the X axis.



The shape above has the following coordinates:

- A. (4,-5)
- B. (6,-3)
- C. (10,-6)
- D. (5,-10)

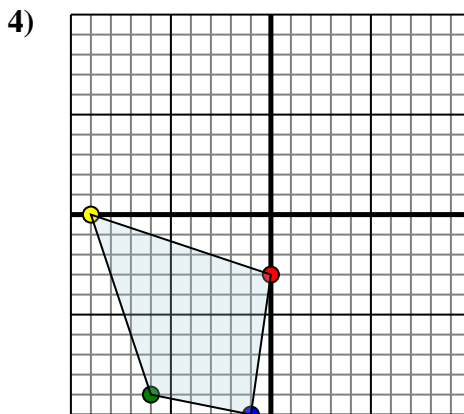
Reflect the shape over the Y axis.



The shape above has the following coordinates:

- A. (-5,1)
- B. (-9,3)
- C. (-8,10)

Reflect the shape over the X axis.



The shape above has the following coordinates:

- A. (0,-3)
- B. (-9,0)
- C. (-6,-9)
- D. (-1,-10)

Reflect the shape over the X axis.

Answers

1a. _____

1b. _____

1c. _____

1. Graph

2a. _____

2b. _____

2c. _____

2d. _____

2. Graph

3a. _____

3b. _____

3c. _____

3. Graph

4a. _____

4b. _____

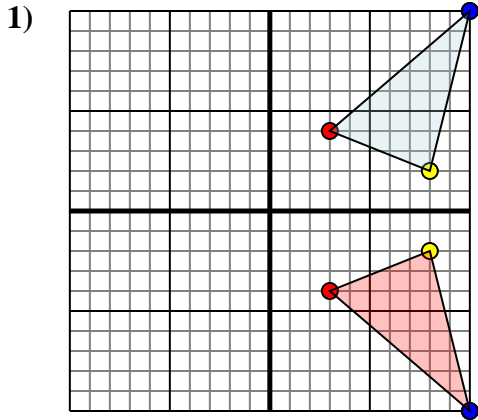
4c. _____

4d. _____

4. Graph



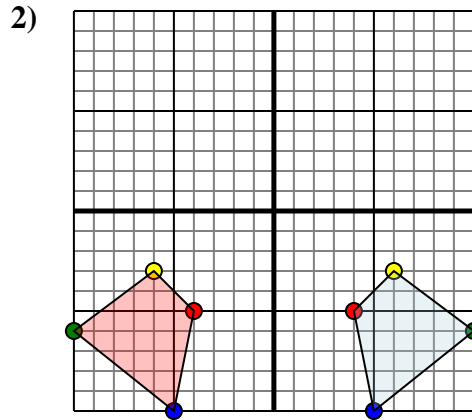
Reflect each shape as described.



The shape above has the following coordinates:

- A. (3,4)
- B. (8,2)
- C. (10,10)

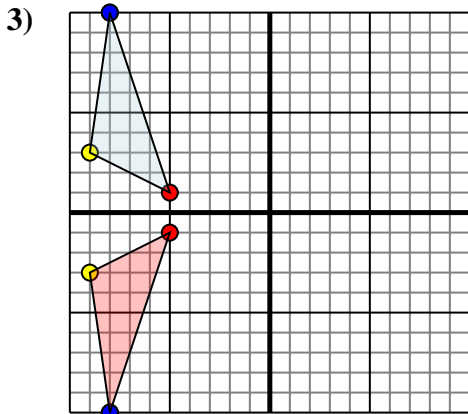
Reflect the shape over the X axis.



The shape above has the following coordinates:

- A. (4,-5)
- B. (6,-3)
- C. (10,-6)
- D. (5,-10)

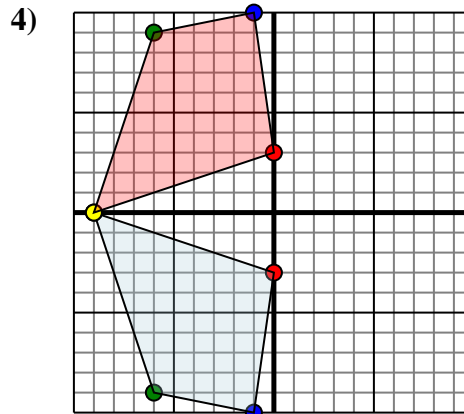
Reflect the shape over the Y axis.



The shape above has the following coordinates:

- A. (-5,1)
- B. (-9,3)
- C. (-8,10)

Reflect the shape over the X axis.



The shape above has the following coordinates:

- A. (0,-3)
- B. (-9,0)
- C. (-6,-9)
- D. (-1,-10)

Reflect the shape over the X axis.

Answers

1a. **(3,-4)**

1b. **(8,-2)**

1c. **(10,-10)**

1. **Graph**

2a. **(-4,-5)**

2b. **(-6,-3)**

2c. **(-10,-6)**

2d. **(-5,-10)**

2. **Graph**

3a. **(-5,-1)**

3b. **(-9,-3)**

3c. **(-8,-10)**

3. **Graph**

4a. **(0,3)**

4b. **(-9,0)**

4c. **(-6,9)**

4d. **(-1,10)**

4. **Graph**