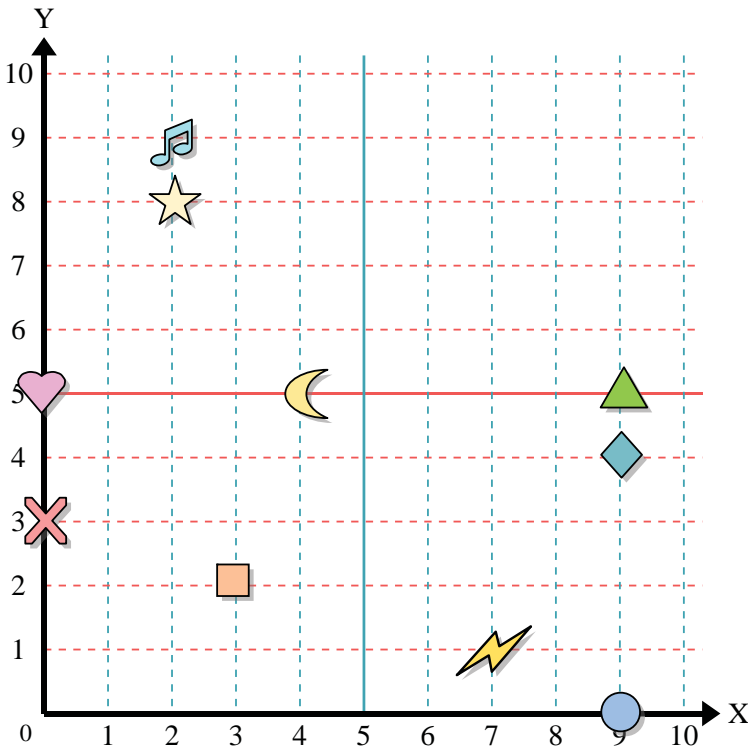




Use the grid below to determine the coordinates where each figure is located.



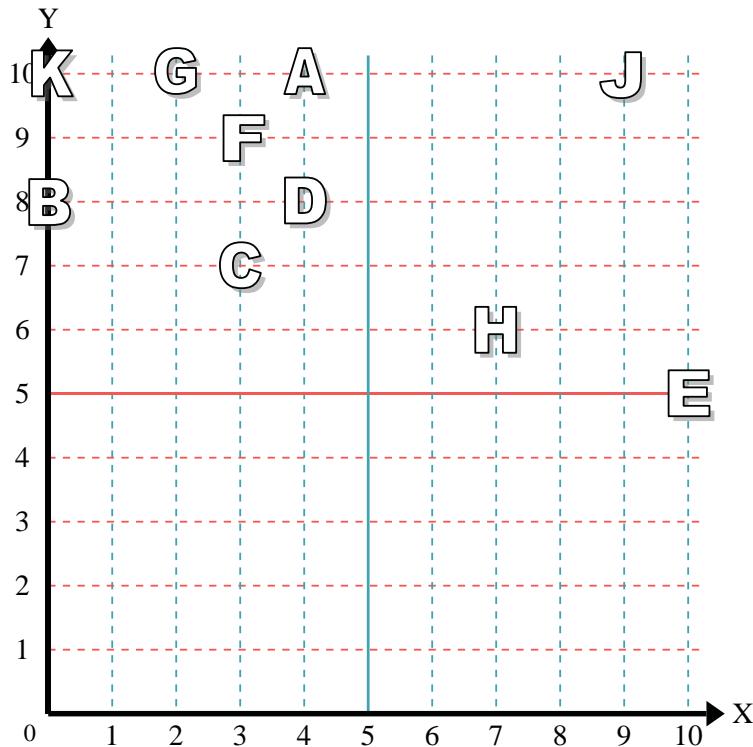
- 1) Star _____
- 2) Lightning _____
- 3) Circle _____
- 4) Heart _____
- 5) Cross _____
- 6) Triangle _____
- 7) Moon _____
- 8) Square _____
- 9) Diamond _____
- 10) Music Note _____

Answers

- 1. _____
- 2. _____
- 3. _____
- 4. _____
- 5. _____
- 6. _____
- 7. _____
- 8. _____
- 9. _____
- 10. _____
- 11. _____
- 12. _____
- 13. _____
- 14. _____
- 15. _____
- 16. _____
- 17. _____
- 18. _____
- 19. _____
- 20. _____

Determine which letter is at each coordinate using the grid below.

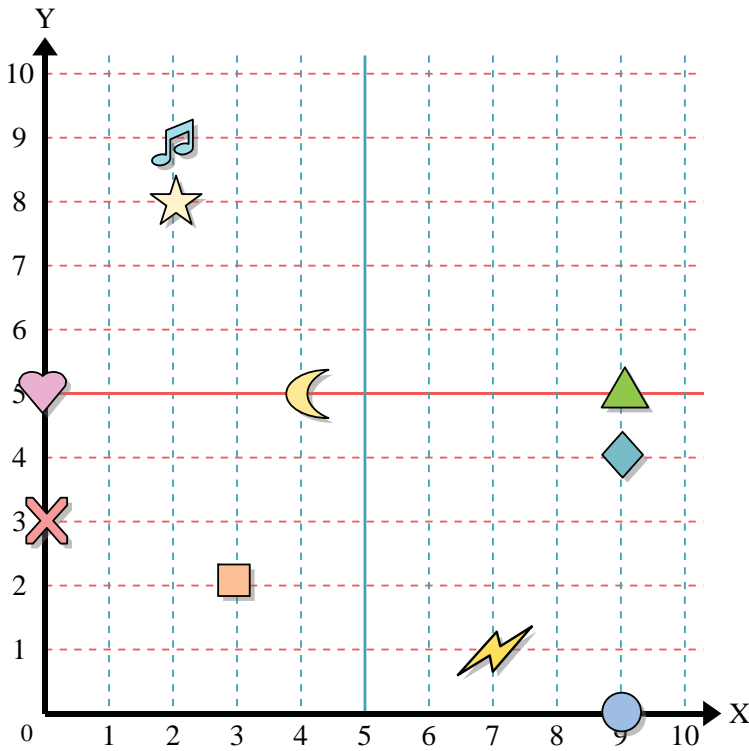
- 11) (4 , 10) _____
- 12) (0 , 10) _____
- 13) (3 , 7) _____
- 14) (3 , 9) _____
- 15) (4 , 8) _____
- 16) (2 , 10) _____
- 17) (0 , 8) _____
- 18) (10 , 5) _____
- 19) (9 , 10) _____
- 20) (7 , 6) _____



- 20. _____



Use the grid below to determine the coordinates where each figure is located.



- 1) Star (2, 8)
- 2) Lightning (7, 1)
- 3) Circle (9, 0)
- 4) Heart (0, 5)
- 5) Cross (0, 3)
- 6) Triangle (9, 5)
- 7) Moon (4, 5)
- 8) Square (3, 2)
- 9) Diamond (9, 4)
- 10) Music Note (2, 9)

Answers

- 1. (2, 8)
- 2. (7, 1)
- 3. (9, 0)
- 4. (0, 5)
- 5. (0, 3)
- 6. (9, 5)
- 7. (4, 5)
- 8. (3, 2)
- 9. (9, 4)
- 10. (2, 9)
- 11. A
- 12. K
- 13. C
- 14. F
- 15. D
- 16. G
- 17. B
- 18. E
- 19. J
- 20. H

Determine which letter is at each coordinate using the grid below.

- 11) (4, 10) A
- 12) (0, 10) K
- 13) (3, 7) C
- 14) (3, 9) F
- 15) (4, 8) D
- 16) (2, 10) G
- 17) (0, 8) B
- 18) (10, 5) E
- 19) (9, 10) J
- 20) (7, 6) H

