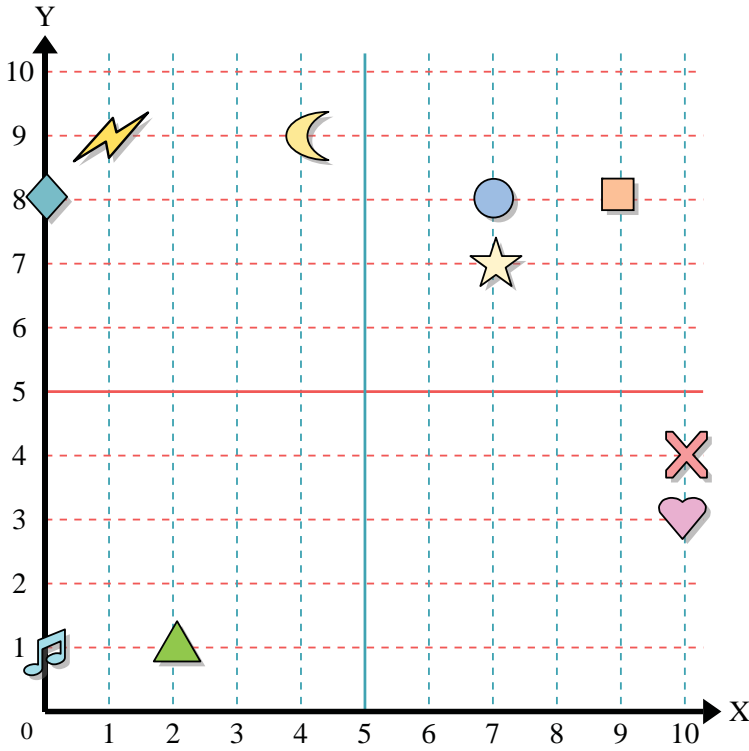




Use the grid below to determine the coordinates where each figure is located.



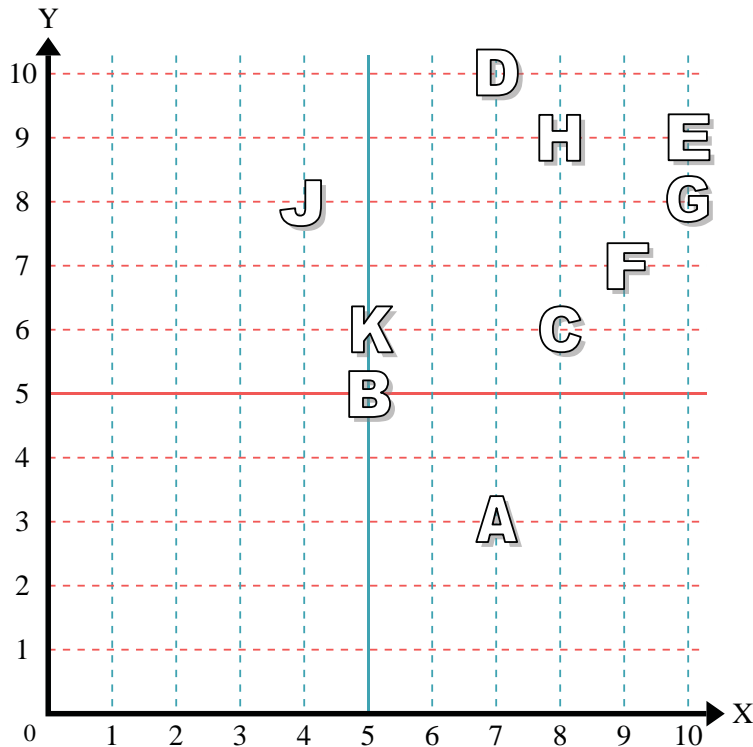
- 1) Star \_\_\_\_\_
- 2) Lightning \_\_\_\_\_
- 3) Circle \_\_\_\_\_
- 4) Heart \_\_\_\_\_
- 5) Cross \_\_\_\_\_
- 6) Triangle \_\_\_\_\_
- 7) Moon \_\_\_\_\_
- 8) Square \_\_\_\_\_
- 9) Diamond \_\_\_\_\_
- 10) Music Note \_\_\_\_\_

Answers

- 1. \_\_\_\_\_
- 2. \_\_\_\_\_
- 3. \_\_\_\_\_
- 4. \_\_\_\_\_
- 5. \_\_\_\_\_
- 6. \_\_\_\_\_
- 7. \_\_\_\_\_
- 8. \_\_\_\_\_
- 9. \_\_\_\_\_
- 10. \_\_\_\_\_
- 11. \_\_\_\_\_
- 12. \_\_\_\_\_
- 13. \_\_\_\_\_
- 14. \_\_\_\_\_
- 15. \_\_\_\_\_
- 16. \_\_\_\_\_
- 17. \_\_\_\_\_
- 18. \_\_\_\_\_
- 19. \_\_\_\_\_
- 20. \_\_\_\_\_

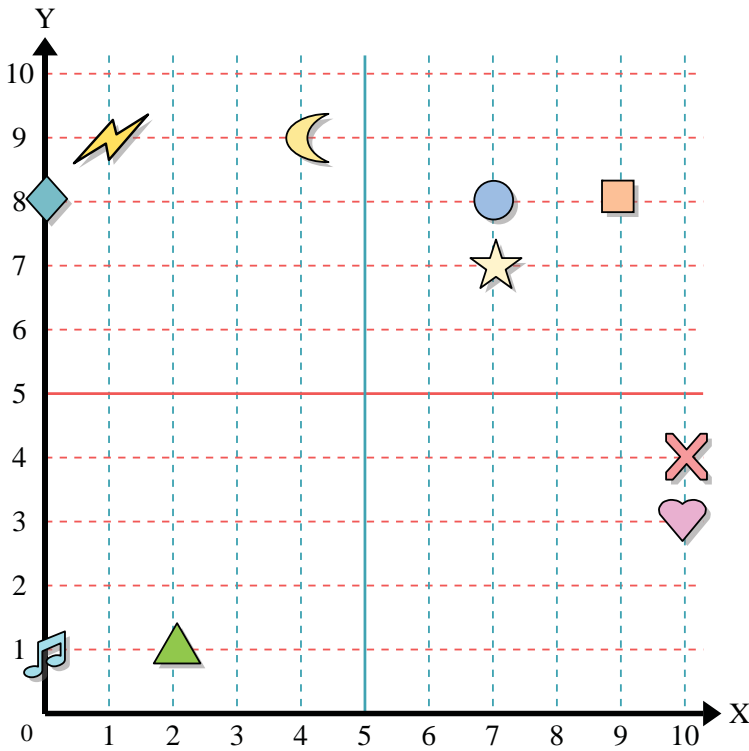
Determine which letter is at each coordinate using the grid below.

- 11) (8, 6) \_\_\_\_\_
- 12) (7, 3) \_\_\_\_\_
- 13) (7, 10) \_\_\_\_\_
- 14) (10, 8) \_\_\_\_\_
- 15) (5, 5) \_\_\_\_\_
- 16) (4, 8) \_\_\_\_\_
- 17) (10, 9) \_\_\_\_\_
- 18) (5, 6) \_\_\_\_\_
- 19) (8, 9) \_\_\_\_\_
- 20) (9, 7) \_\_\_\_\_





Use the grid below to determine the coordinates where each figure is located.



- 1) Star (7, 7)
- 2) Lightning (1, 9)
- 3) Circle (7, 8)
- 4) Heart (10, 3)
- 5) Cross (10, 4)
- 6) Triangle (2, 1)
- 7) Moon (4, 9)
- 8) Square (9, 8)
- 9) Diamond (0, 8)
- 10) Music Note (0, 1)

Answers

- 1. (7, 7)
- 2. (1, 9)
- 3. (7, 8)
- 4. (10, 3)
- 5. (10, 4)
- 6. (2, 1)
- 7. (4, 9)
- 8. (9, 8)
- 9. (0, 8)
- 10. (0, 1)
- 11. C
- 12. A
- 13. D
- 14. G
- 15. B
- 16. J
- 17. E
- 18. K
- 19. H
- 20. F

Determine which letter is at each coordinate using the grid below.

- 11) (8, 6) C
- 12) (7, 3) A
- 13) (7, 10) D
- 14) (10, 8) G
- 15) (5, 5) B
- 16) (4, 8) J
- 17) (10, 9) E
- 18) (5, 6) K
- 19) (8, 9) H
- 20) (9, 7) F

