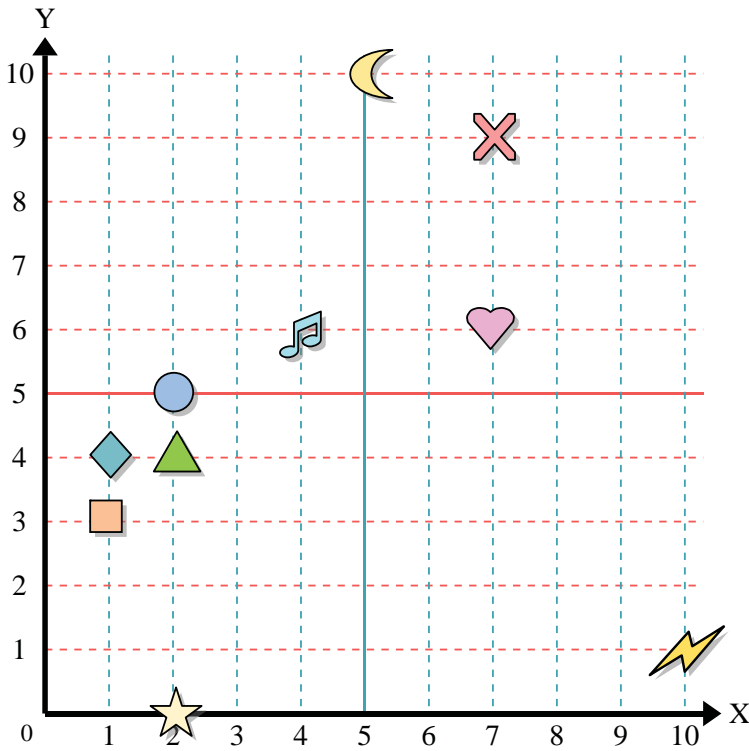




Use the grid below to determine the coordinates where each figure is located.



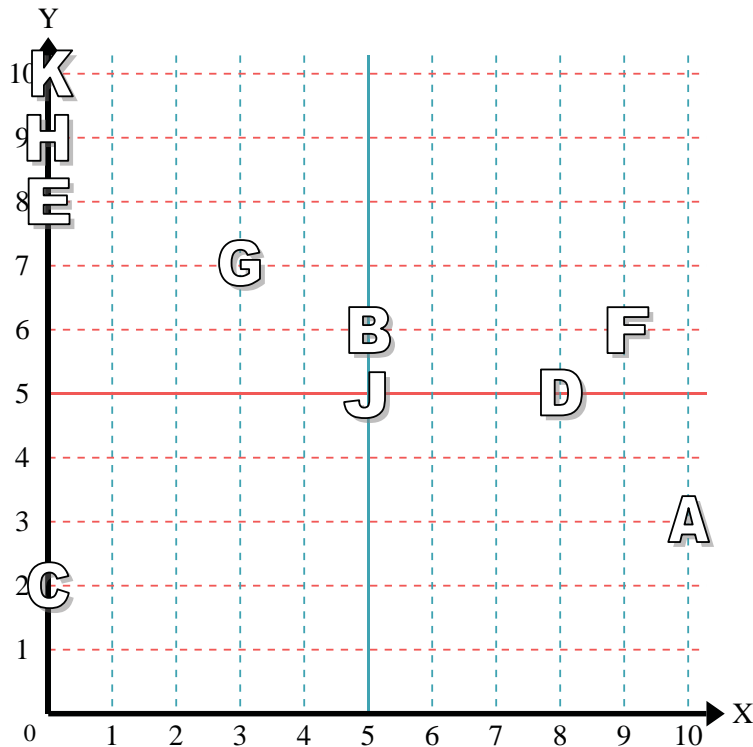
- 1) Star \_\_\_\_\_
- 2) Lightning \_\_\_\_\_
- 3) Circle \_\_\_\_\_
- 4) Heart \_\_\_\_\_
- 5) Cross \_\_\_\_\_
- 6) Triangle \_\_\_\_\_
- 7) Moon \_\_\_\_\_
- 8) Square \_\_\_\_\_
- 9) Diamond \_\_\_\_\_
- 10) Music Note \_\_\_\_\_

Answers

- 1. \_\_\_\_\_
- 2. \_\_\_\_\_
- 3. \_\_\_\_\_
- 4. \_\_\_\_\_
- 5. \_\_\_\_\_
- 6. \_\_\_\_\_
- 7. \_\_\_\_\_
- 8. \_\_\_\_\_
- 9. \_\_\_\_\_
- 10. \_\_\_\_\_
- 11. \_\_\_\_\_
- 12. \_\_\_\_\_
- 13. \_\_\_\_\_
- 14. \_\_\_\_\_
- 15. \_\_\_\_\_
- 16. \_\_\_\_\_
- 17. \_\_\_\_\_
- 18. \_\_\_\_\_
- 19. \_\_\_\_\_
- 20. \_\_\_\_\_

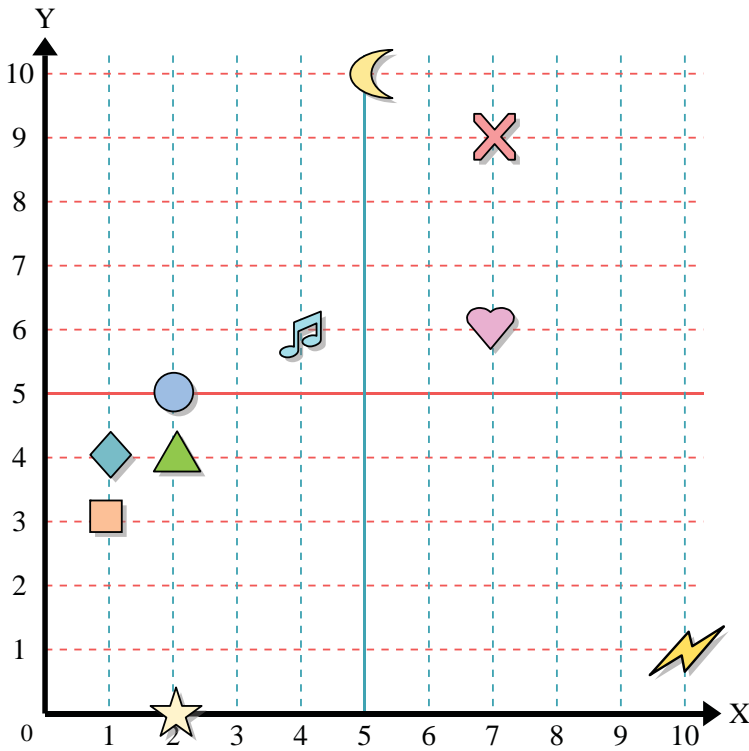
Determine which letter is at each coordinate using the grid below.

- 11) (5, 5) \_\_\_\_\_
- 12) (0, 8) \_\_\_\_\_
- 13) (8, 5) \_\_\_\_\_
- 14) (9, 6) \_\_\_\_\_
- 15) (0, 10) \_\_\_\_\_
- 16) (5, 6) \_\_\_\_\_
- 17) (0, 9) \_\_\_\_\_
- 18) (3, 7) \_\_\_\_\_
- 19) (10, 3) \_\_\_\_\_
- 20) (0, 2) \_\_\_\_\_





Use the grid below to determine the coordinates where each figure is located.



- 1) Star (2, 0)
- 2) Lightning (10, 1)
- 3) Circle (2, 5)
- 4) Heart (7, 6)
- 5) Cross (7, 9)
- 6) Triangle (2, 4)
- 7) Moon (5, 10)
- 8) Square (1, 3)
- 9) Diamond (1, 4)
- 10) Music Note (4, 6)

Answers

- 1. (2, 0)
- 2. (10, 1)
- 3. (2, 5)
- 4. (7, 6)
- 5. (7, 9)
- 6. (2, 4)
- 7. (5, 10)
- 8. (1, 3)
- 9. (1, 4)
- 10. (4, 6)
- 11. J
- 12. E
- 13. D
- 14. F
- 15. K
- 16. B
- 17. H
- 18. G
- 19. A
- 20. C

Determine which letter is at each coordinate using the grid below.

- 11) (5, 5) J
- 12) (0, 8) E
- 13) (8, 5) D
- 14) (9, 6) F
- 15) (0, 10) K
- 16) (5, 6) B
- 17) (0, 9) H
- 18) (3, 7) G
- 19) (10, 3) A
- 20) (0, 2) C

