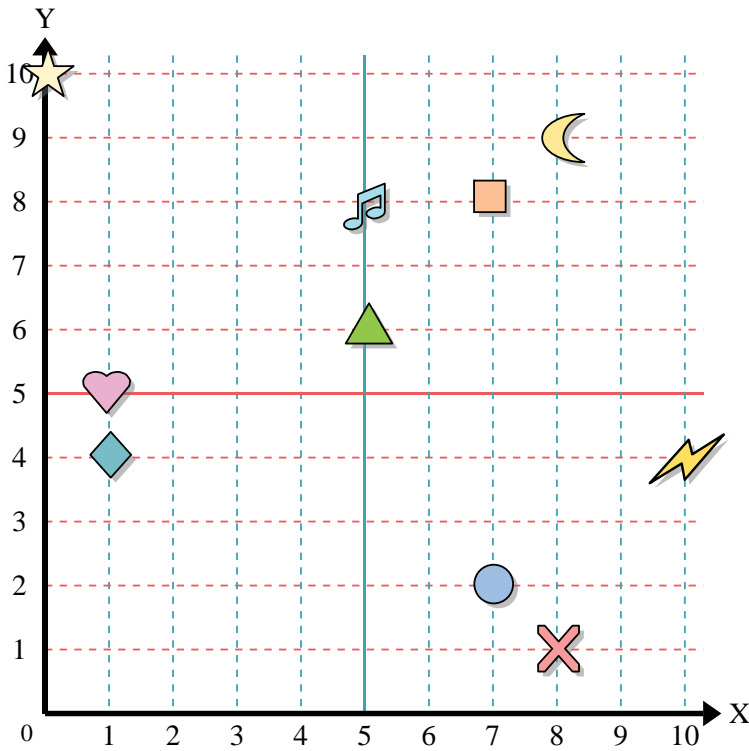




Use the grid below to determine the coordinates where each figure is located.



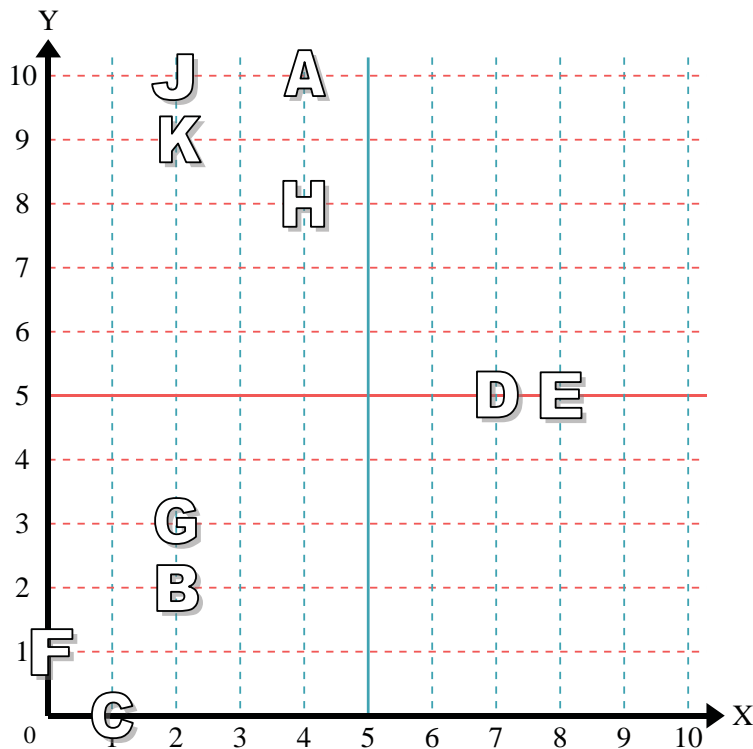
- 1) Star _____
- 2) Lightning _____
- 3) Circle _____
- 4) Heart _____
- 5) Cross _____
- 6) Triangle _____
- 7) Moon _____
- 8) Square _____
- 9) Diamond _____
- 10) Music Note _____

Answers

- 1. _____
- 2. _____
- 3. _____
- 4. _____
- 5. _____
- 6. _____
- 7. _____
- 8. _____
- 9. _____
- 10. _____
- 11. _____
- 12. _____
- 13. _____
- 14. _____
- 15. _____
- 16. _____
- 17. _____
- 18. _____
- 19. _____
- 20. _____

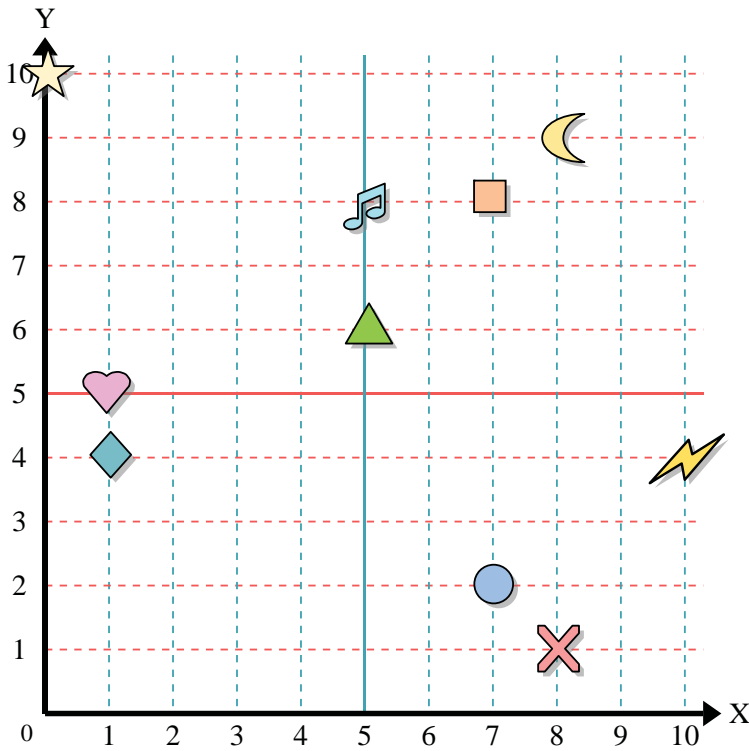
Determine which letter is at each coordinate using the grid below.

- 11) (2, 2) _____
- 12) (4, 10) _____
- 13) (2, 3) _____
- 14) (2, 9) _____
- 15) (1, 0) _____
- 16) (0, 1) _____
- 17) (4, 8) _____
- 18) (7, 5) _____
- 19) (2, 10) _____
- 20) (8, 5) _____





Use the grid below to determine the coordinates where each figure is located.



- 1) Star (0 , 10)
- 2) Lightning (10 , 4)
- 3) Circle (7 , 2)
- 4) Heart (1 , 5)
- 5) Cross (8 , 1)
- 6) Triangle (5 , 6)
- 7) Moon (8 , 9)
- 8) Square (7 , 8)
- 9) Diamond (1 , 4)
- 10) Music Note (5 , 8)

Answers

- 1. (0 , 10)
- 2. (10 , 4)
- 3. (7 , 2)
- 4. (1 , 5)
- 5. (8 , 1)
- 6. (5 , 6)
- 7. (8 , 9)
- 8. (7 , 8)
- 9. (1 , 4)
- 10. (5 , 8)
- 11. B
- 12. A
- 13. G
- 14. K
- 15. C
- 16. F
- 17. H
- 18. D
- 19. J
- 20. E

Determine which letter is at each coordinate using the grid below.

- 11) (2 , 2) B
- 12) (4 , 10) A
- 13) (2 , 3) G
- 14) (2 , 9) K
- 15) (1 , 0) C
- 16) (0 , 1) F
- 17) (4 , 8) H
- 18) (7 , 5) D
- 19) (2 , 10) J
- 20) (8 , 5) E

