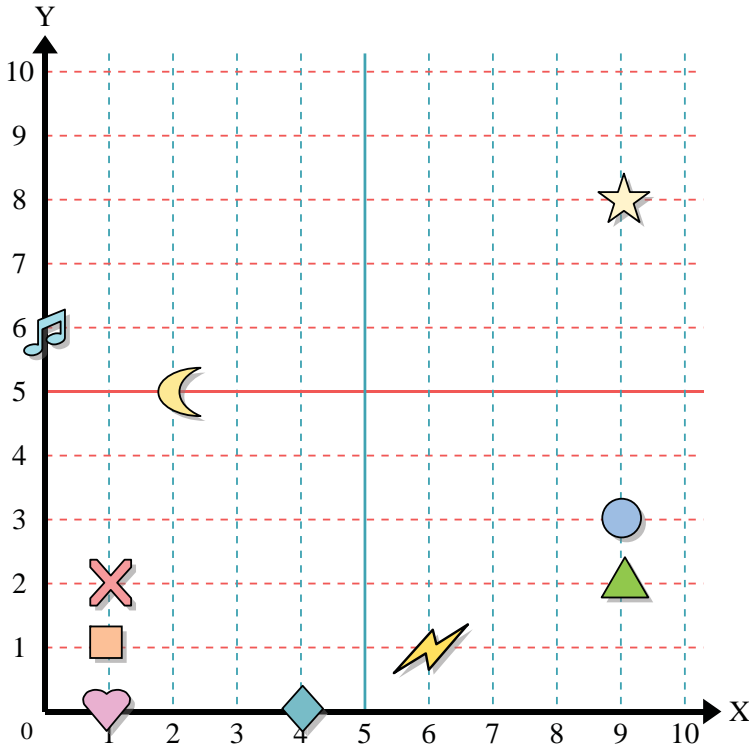




Use the grid below to determine the coordinates where each figure is located.



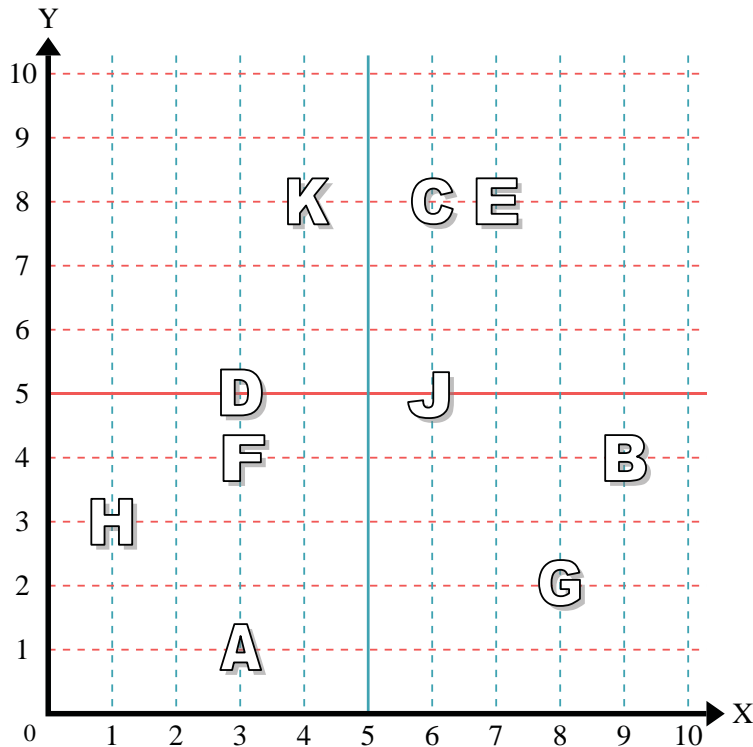
- 1) Star _____
- 2) Lightning _____
- 3) Circle _____
- 4) Heart _____
- 5) Cross _____
- 6) Triangle _____
- 7) Moon _____
- 8) Square _____
- 9) Diamond _____
- 10) Music Note _____

Answers

- 1. _____
- 2. _____
- 3. _____
- 4. _____
- 5. _____
- 6. _____
- 7. _____
- 8. _____
- 9. _____
- 10. _____
- 11. _____
- 12. _____
- 13. _____
- 14. _____
- 15. _____
- 16. _____
- 17. _____
- 18. _____
- 19. _____
- 20. _____

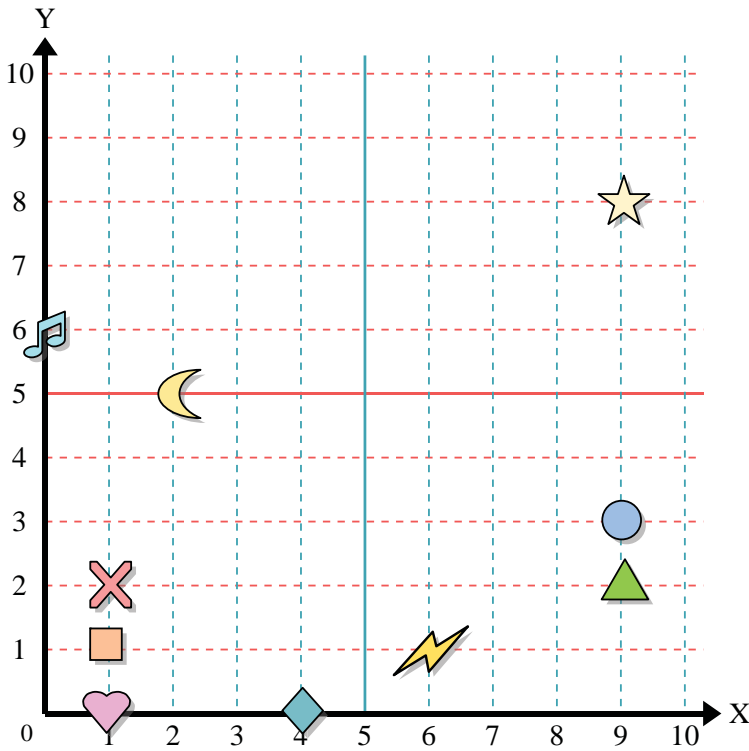
Determine which letter is at each coordinate using the grid below.

- 11) (8, 2) _____
- 12) (4, 8) _____
- 13) (6, 5) _____
- 14) (3, 5) _____
- 15) (1, 3) _____
- 16) (3, 4) _____
- 17) (9, 4) _____
- 18) (3, 1) _____
- 19) (7, 8) _____
- 20) (6, 8) _____





Use the grid below to determine the coordinates where each figure is located.



- 1) Star (9, 8)
- 2) Lightning (6, 1)
- 3) Circle (9, 3)
- 4) Heart (1, 0)
- 5) Cross (1, 2)
- 6) Triangle (9, 2)
- 7) Moon (2, 5)
- 8) Square (1, 1)
- 9) Diamond (4, 0)
- 10) Music Note (0, 6)

Answers

- 1. (9, 8)
- 2. (6, 1)
- 3. (9, 3)
- 4. (1, 0)
- 5. (1, 2)
- 6. (9, 2)
- 7. (2, 5)
- 8. (1, 1)
- 9. (4, 0)
- 10. (0, 6)
- 11. G
- 12. K
- 13. J
- 14. D
- 15. H
- 16. F
- 17. B
- 18. A
- 19. E
- 20. C

Determine which letter is at each coordinate using the grid below.

- 11) (8, 2) G
- 12) (4, 8) K
- 13) (6, 5) J
- 14) (3, 5) D
- 15) (1, 3) H
- 16) (3, 4) F
- 17) (9, 4) B
- 18) (3, 1) A
- 19) (7, 8) E
- 20) (6, 8) C

