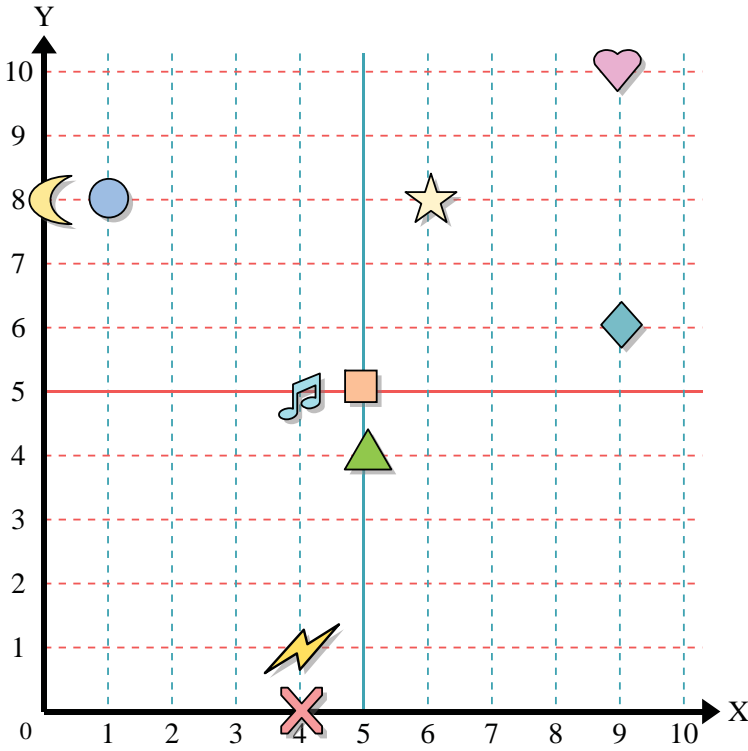




Use the grid below to determine the coordinates where each figure is located.



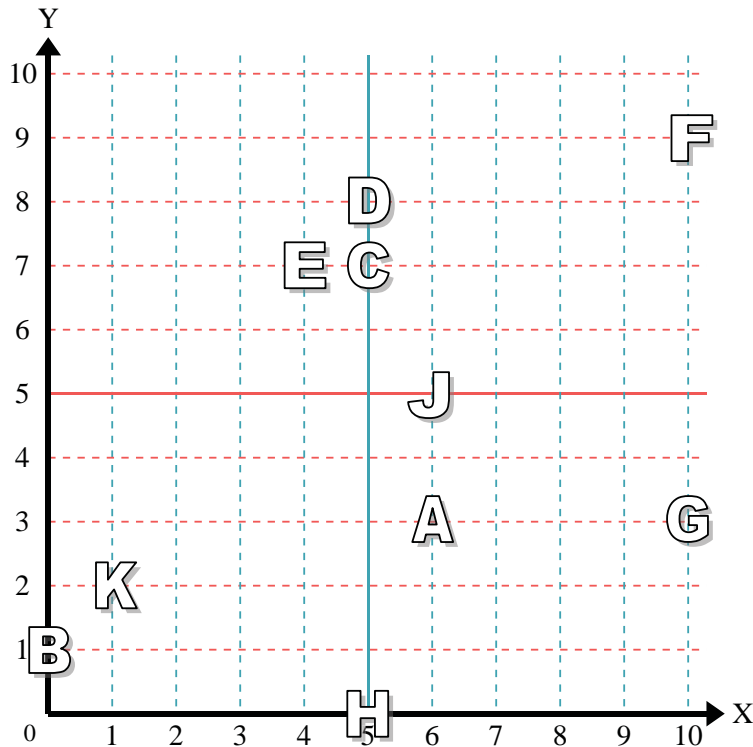
- 1) Star _____
- 2) Lightning _____
- 3) Circle _____
- 4) Heart _____
- 5) Cross _____
- 6) Triangle _____
- 7) Moon _____
- 8) Square _____
- 9) Diamond _____
- 10) Music Note _____

Answers

- 1. _____
- 2. _____
- 3. _____
- 4. _____
- 5. _____
- 6. _____
- 7. _____
- 8. _____
- 9. _____
- 10. _____
- 11. _____
- 12. _____
- 13. _____
- 14. _____
- 15. _____
- 16. _____
- 17. _____
- 18. _____
- 19. _____
- 20. _____

Determine which letter is at each coordinate using the grid below.

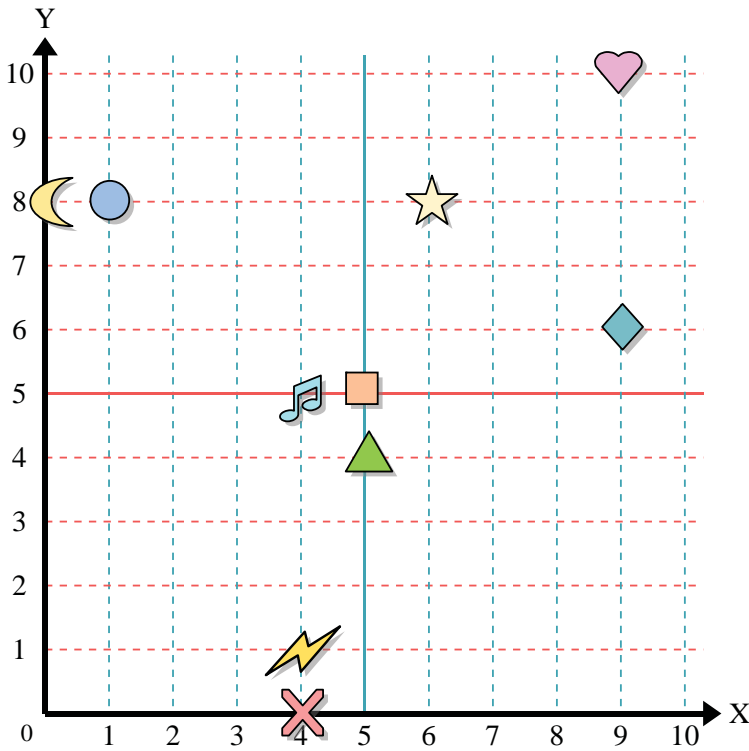
- 11) (5, 7) _____
- 12) (5, 8) _____
- 13) (10, 3) _____
- 14) (6, 5) _____
- 15) (4, 7) _____
- 16) (1, 2) _____
- 17) (0, 1) _____
- 18) (10, 9) _____
- 19) (6, 3) _____
- 20) (5, 0) _____



- 20. _____



Use the grid below to determine the coordinates where each figure is located.



- 1) Star (6 , 8)
- 2) Lightning (4 , 1)
- 3) Circle (1 , 8)
- 4) Heart (9 , 10)
- 5) Cross (4 , 0)
- 6) Triangle (5 , 4)
- 7) Moon (0 , 8)
- 8) Square (5 , 5)
- 9) Diamond (9 , 6)
- 10) Music Note (4 , 5)

Answers

- 1. (6 , 8)
- 2. (4 , 1)
- 3. (1 , 8)
- 4. (9 , 10)
- 5. (4 , 0)
- 6. (5 , 4)
- 7. (0 , 8)
- 8. (5 , 5)
- 9. (9 , 6)
- 10. (4 , 5)
- 11. C
- 12. D
- 13. G
- 14. J
- 15. E
- 16. K
- 17. B
- 18. F
- 19. A
- 20. H

Determine which letter is at each coordinate using the grid below.

- 11) (5 , 7) C
- 12) (5 , 8) D
- 13) (10 , 3) G
- 14) (6 , 5) J
- 15) (4 , 7) E
- 16) (1 , 2) K
- 17) (0 , 1) B
- 18) (10 , 9) F
- 19) (6 , 3) A
- 20) (5 , 0) H

