



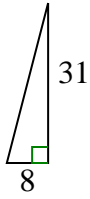
Determine which choice has the same slope as the one shown.

**Answers**

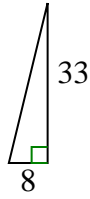
1)



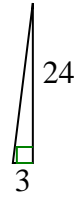
A.



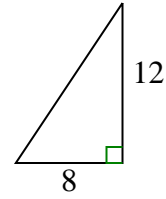
B.



C.



D.



1. \_\_\_\_\_

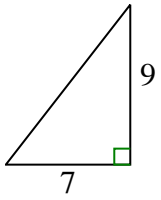
2. \_\_\_\_\_

3. \_\_\_\_\_

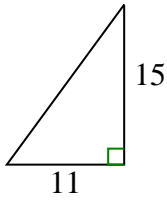
4. \_\_\_\_\_

5. \_\_\_\_\_

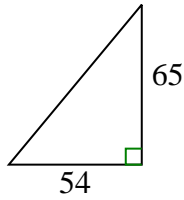
2)



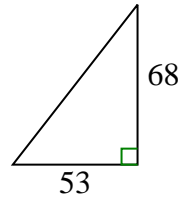
A.



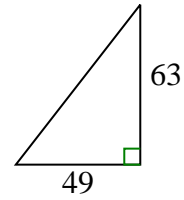
B.



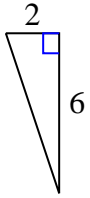
C.



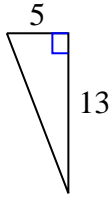
D.



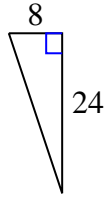
3)



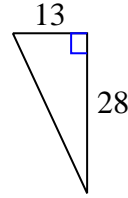
A.



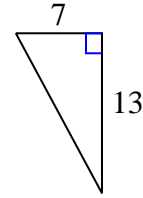
B.



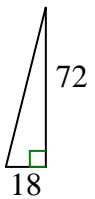
C.



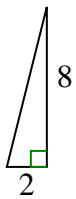
D.



4)



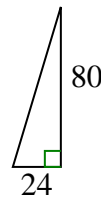
A.



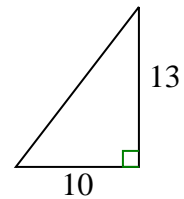
B.



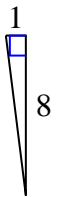
C.



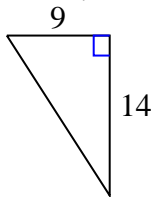
D.



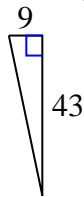
5)



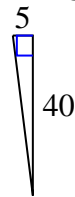
A.



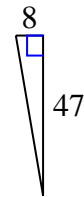
B.



C.



D.





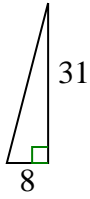
Determine which choice has the same slope as the one shown.

**Answers**

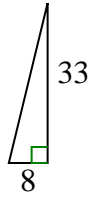
1)



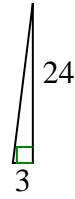
A.



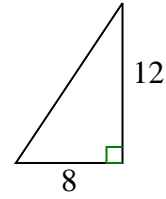
B.



C.

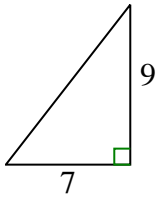


D.

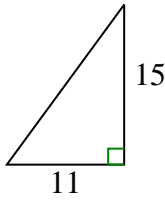


1.     **C**    

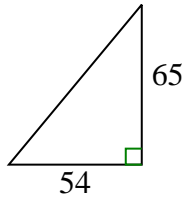
2)



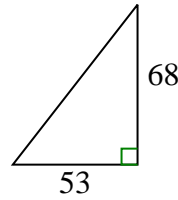
A.



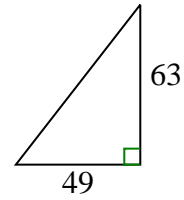
B.



C.

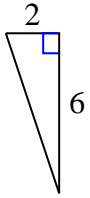


D.

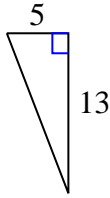


2.     **D**    

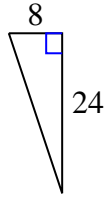
3)



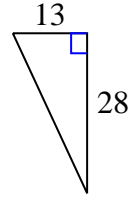
A.



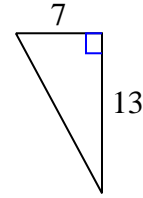
B.



C.

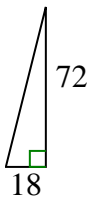


D.

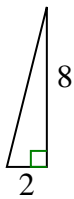


3.     **B**    

4)



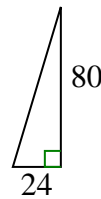
A.



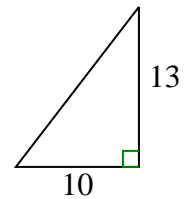
B.



C.

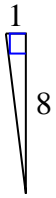


D.

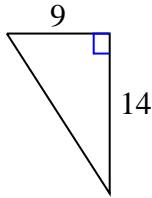


4.     **A**    

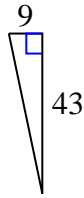
5)



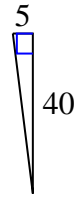
A.



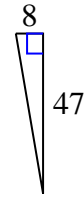
B.



C.



D.



5.     **C**