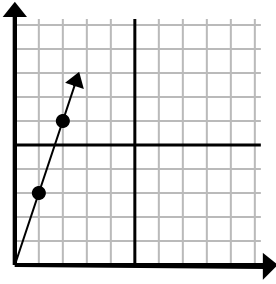




Determine which choice represents a point on the line if it were to continue.

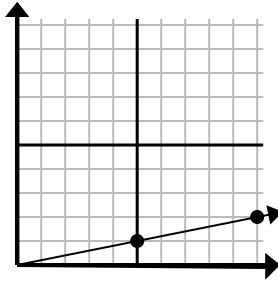
Answers

1)



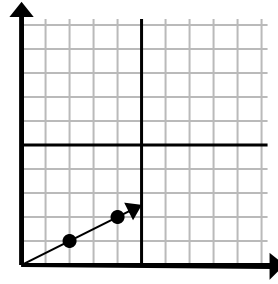
- A. (3, 5)
- B. (5, 6)
- C. (3, 9)
- D. (6, 4)

2)



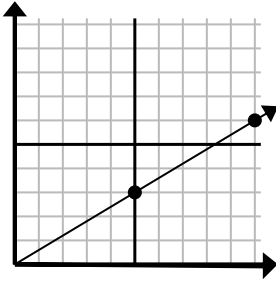
- A. (15, 3)
- B. (12, 3)
- C. (14, 5)
- D. (13, 5)

3)



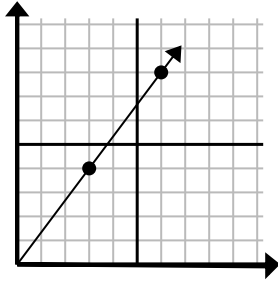
- A. (6, 3)
- B. (5, 5)
- C. (8, 2)
- D. (7, 4)

4)



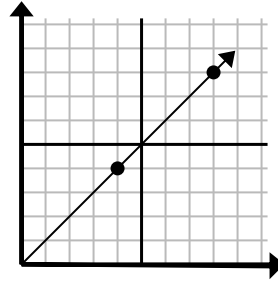
- A. (14, 8)
- B. (15, 9)
- C. (15, 8)
- D. (15, 5)

5)



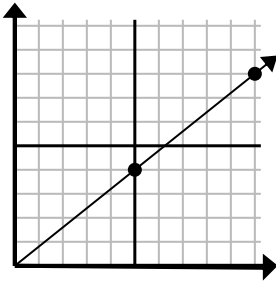
- A. (11, 5)
- B. (9, 8)
- C. (10, 5)
- D. (9, 12)

6)



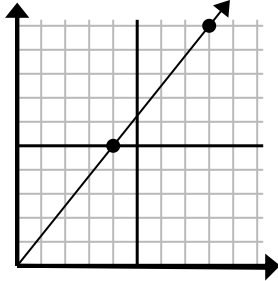
- A. (12, 12)
- B. (11, 6)
- C. (13, 6)
- D. (11, 8)

7)



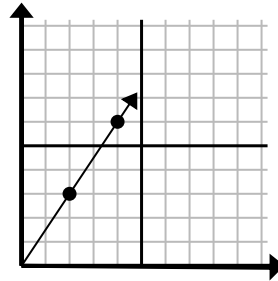
- A. (14, 6)
- B. (13, 6)
- C. (15, 12)
- D. (13, 9)

8)



- A. (11, 6)
- B. (12, 15)
- C. (10, 8)
- D. (9, 7)

9)



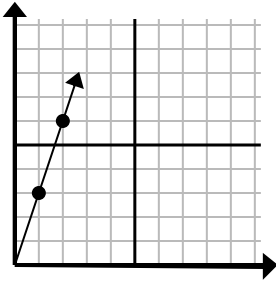
- A. (8, 6)
- B. (6, 4)
- C. (6, 9)
- D. (5, 8)

1. _____
2. _____
3. _____
4. _____
5. _____
6. _____
7. _____
8. _____
9. _____



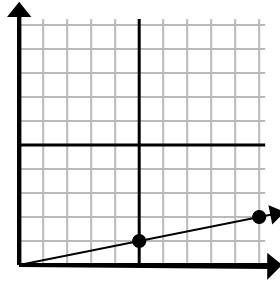
Determine which choice represents a point on the line if it were to continue.

1)



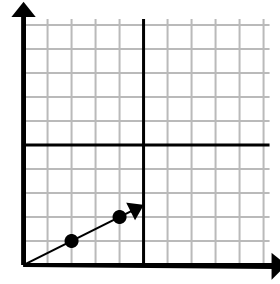
- A. (3, 5)
- B. (5, 6)
- C. (3, 9)
- D. (6, 4)

2)



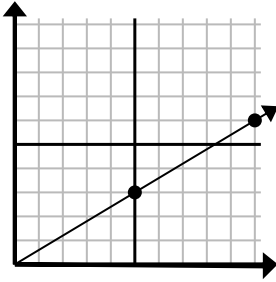
- A. (15, 3)
- B. (12, 3)
- C. (14, 5)
- D. (13, 5)

3)



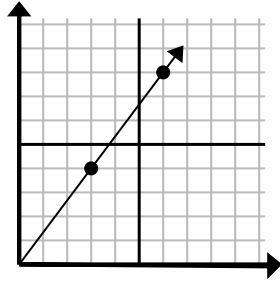
- A. (6, 3)
- B. (5, 5)
- C. (8, 2)
- D. (7, 4)

4)



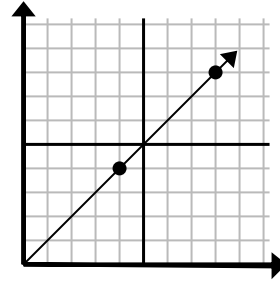
- A. (14, 8)
- B. (15, 9)
- C. (15, 8)
- D. (15, 5)

5)



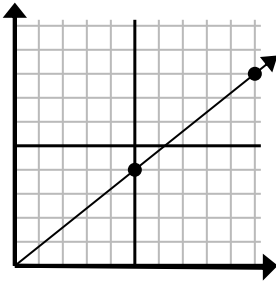
- A. (11, 5)
- B. (9, 8)
- C. (10, 5)
- D. (9, 12)

6)



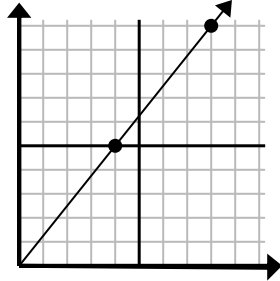
- A. (12, 12)
- B. (11, 6)
- C. (13, 6)
- D. (11, 8)

7)



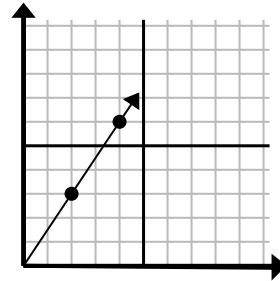
- A. (14, 6)
- B. (13, 6)
- C. (15, 12)
- D. (13, 9)

8)



- A. (11, 6)
- B. (12, 15)
- C. (10, 8)
- D. (9, 7)

9)



- A. (8, 6)
- B. (6, 4)
- C. (6, 9)
- D. (5, 8)

Answers

- 1. **C**
- 2. **A**
- 3. **A**
- 4. **B**
- 5. **D**
- 6. **A**
- 7. **C**
- 8. **B**
- 9. **C**