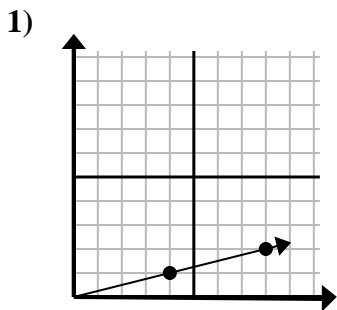


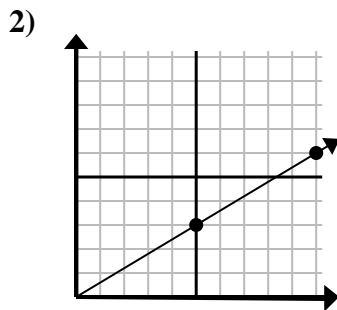


Determine which choice represents a point on the line if it were to continue.

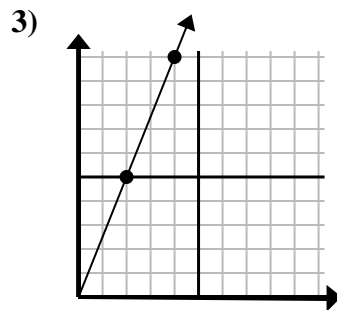
Answers



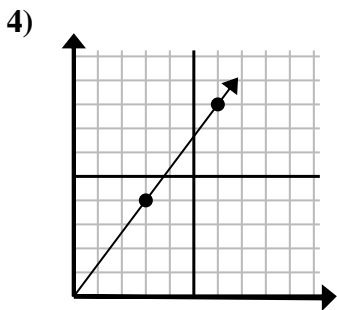
- A. (12, 3)
- B. (13, 6)
- C. (9, 2)
- D. (10, 5)



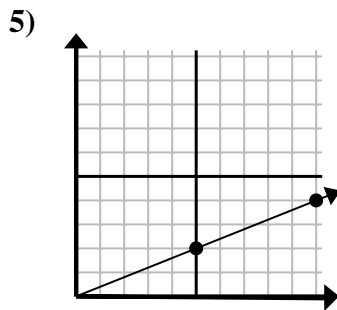
- A. (15, 9)
- B. (13, 8)
- C. (15, 4)
- D. (14, 6)



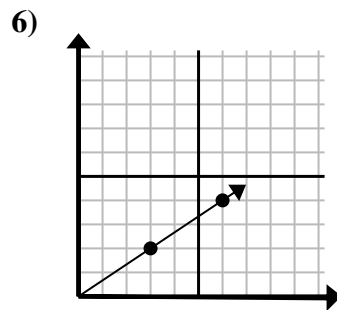
- A. (7, 7)
- B. (6, 15)
- C. (8, 10)
- D. (6, 8)



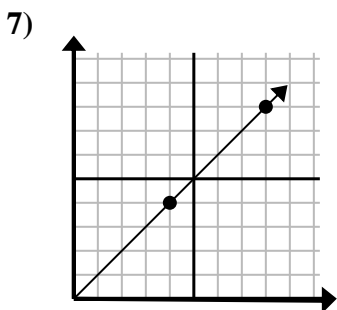
- A. (8, 8)
- B. (7, 6)
- C. (10, 6)
- D. (9, 12)



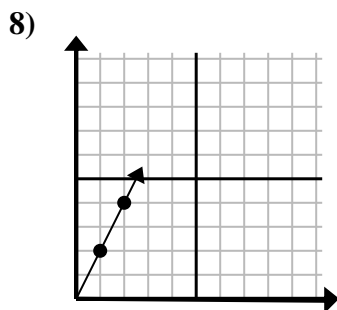
- A. (15, 6)
- B. (15, 4)
- C. (15, 3)
- D. (12, 7)



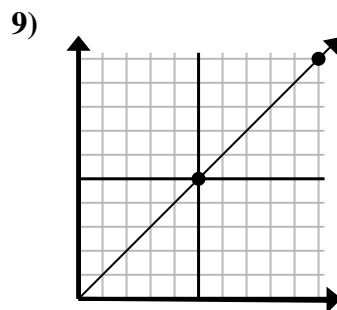
- A. (9, 6)
- B. (9, 4)
- C. (11, 5)
- D. (8, 4)



- A. (12, 12)
- B. (10, 7)
- C. (12, 8)
- D. (13, 6)



- A. (6, 4)
- B. (3, 6)
- C. (6, 5)
- D. (5, 5)



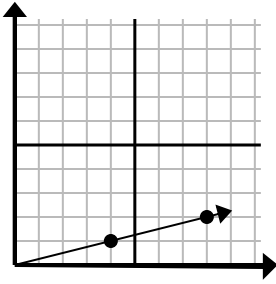
- A. (15, 15)
- B. (12, 7)
- C. (15, 7)
- D. (13, 7)

- 1. \_\_\_\_\_
- 2. \_\_\_\_\_
- 3. \_\_\_\_\_
- 4. \_\_\_\_\_
- 5. \_\_\_\_\_
- 6. \_\_\_\_\_
- 7. \_\_\_\_\_
- 8. \_\_\_\_\_
- 9. \_\_\_\_\_



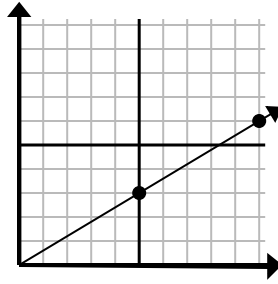
Determine which choice represents a point on the line if it were to continue.

1)



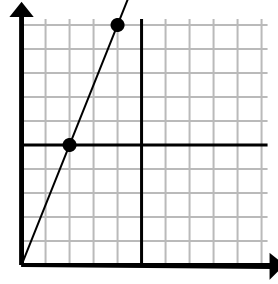
- A. (12, 3)
- B. (13, 6)
- C. (9, 2)
- D. (10, 5)

2)



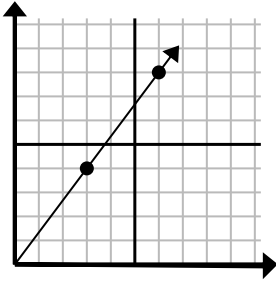
- A. (15, 9)
- B. (13, 8)
- C. (15, 4)
- D. (14, 6)

3)



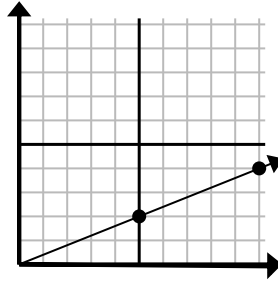
- A. (7, 7)
- B. (6, 15)
- C. (8, 10)
- D. (6, 8)

4)



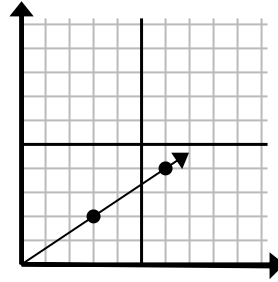
- A. (8, 8)
- B. (7, 6)
- C. (10, 6)
- D. (9, 12)

5)



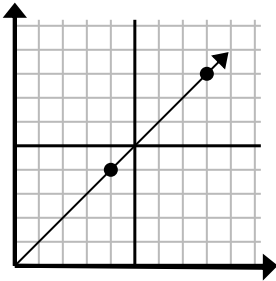
- A. (15, 6)
- B. (15, 4)
- C. (15, 3)
- D. (12, 7)

6)



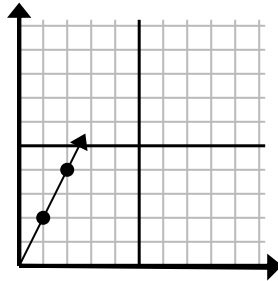
- A. (9, 6)
- B. (9, 4)
- C. (11, 5)
- D. (8, 4)

7)



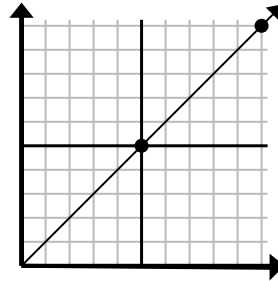
- A. (12, 12)
- B. (10, 7)
- C. (12, 8)
- D. (13, 6)

8)



- A. (6, 4)
- B. (3, 6)
- C. (6, 5)
- D. (5, 5)

9)



- A. (15, 15)
- B. (12, 7)
- C. (15, 7)
- D. (13, 7)

Answers

- 1.     **A**
- 2.     **A**
- 3.     **B**
- 4.     **D**
- 5.     **A**
- 6.     **A**
- 7.     **A**
- 8.     **B**
- 9.     **A**