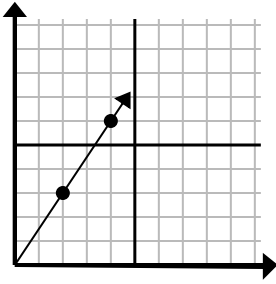




Determine which choice represents a point on the line if it were to continue.

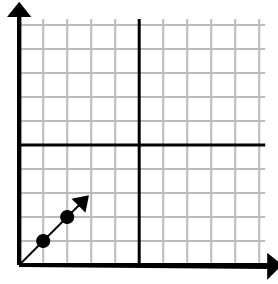
Answers

1)



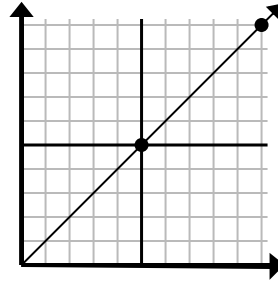
- A. (9, 5)
- B. (6, 4)
- C. (8, 5)
- D. (6, 9)

2)



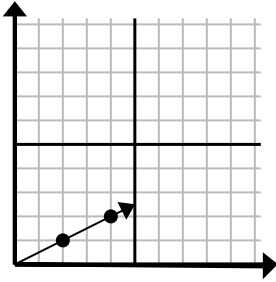
- A. (3, 3)
- B. (3, 5)
- C. (7, 4)
- D. (5, 3)

3)



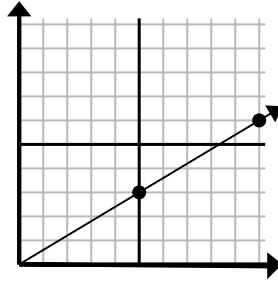
- A. (12, 10)
- B. (14, 9)
- C. (13, 7)
- D. (15, 15)

4)



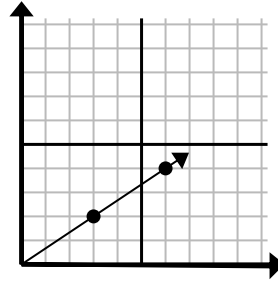
- A. (9, 2)
- B. (8, 3)
- C. (5, 2)
- D. (6, 3)

5)



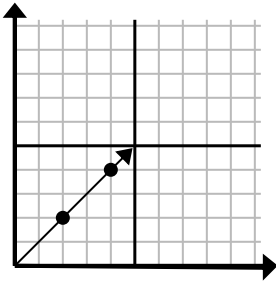
- A. (15, 9)
- B. (12, 4)
- C. (11, 5)
- D. (13, 8)

6)



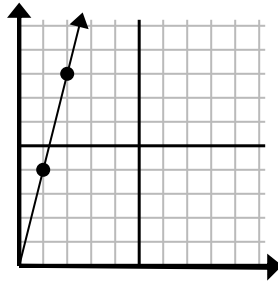
- A. (9, 4)
- B. (10, 4)
- C. (11, 3)
- D. (9, 6)

7)



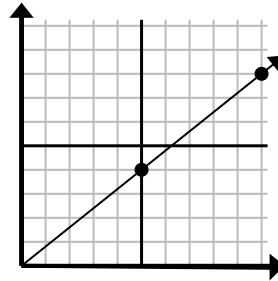
- A. (9, 6)
- B. (6, 6)
- C. (7, 7)
- D. (6, 4)

8)



- A. (3, 6)
- B. (3, 12)
- C. (6, 5)
- D. (7, 5)

9)



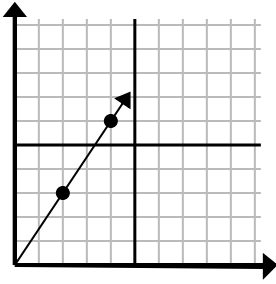
- A. (13, 8)
- B. (15, 8)
- C. (15, 12)
- D. (15, 5)

1. _____
2. _____
3. _____
4. _____
5. _____
6. _____
7. _____
8. _____
9. _____



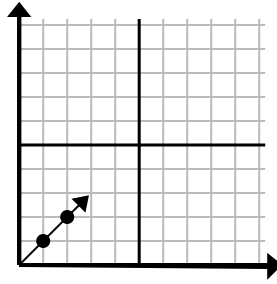
Determine which choice represents a point on the line if it were to continue.

1)



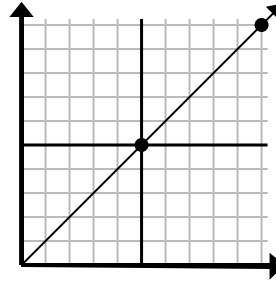
- A. (9, 5)
- B. (6, 4)
- C. (8, 5)
- D. (6, 9)

2)



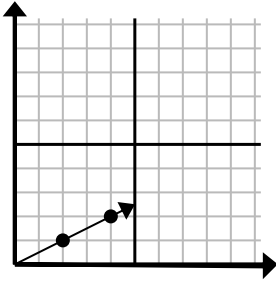
- A. (3, 3)
- B. (3, 5)
- C. (7, 4)
- D. (5, 3)

3)



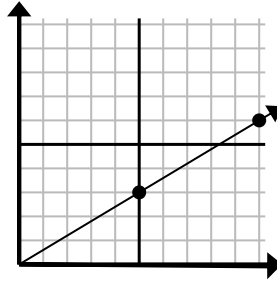
- A. (12, 10)
- B. (14, 9)
- C. (13, 7)
- D. (15, 15)

4)



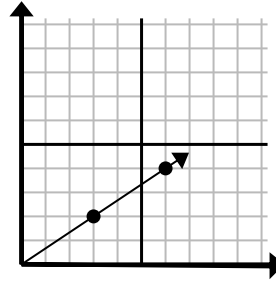
- A. (9, 2)
- B. (8, 3)
- C. (5, 2)
- D. (6, 3)

5)



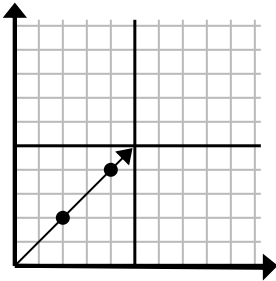
- A. (15, 9)
- B. (12, 4)
- C. (11, 5)
- D. (13, 8)

6)



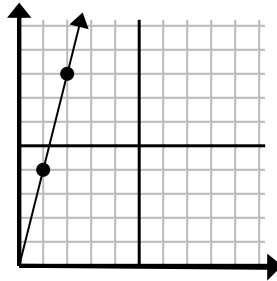
- A. (9, 4)
- B. (10, 4)
- C. (11, 3)
- D. (9, 6)

7)



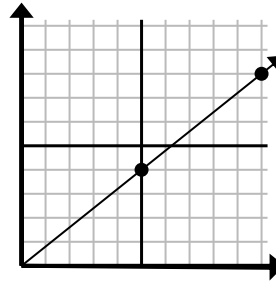
- A. (9, 6)
- B. (6, 6)
- C. (7, 7)
- D. (6, 4)

8)



- A. (3, 6)
- B. (3, 12)
- C. (6, 5)
- D. (7, 5)

9)



- A. (13, 8)
- B. (15, 8)
- C. (15, 12)
- D. (15, 5)

Answers

- 1. **D**
- 2. **A**
- 3. **D**
- 4. **D**
- 5. **A**
- 6. **D**
- 7. **B**
- 8. **B**
- 9. **C**