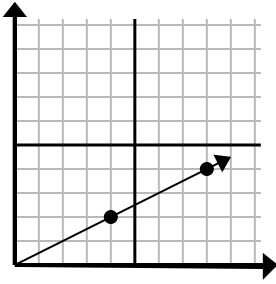




Determine which choice represents a point on the line if it were to continue.

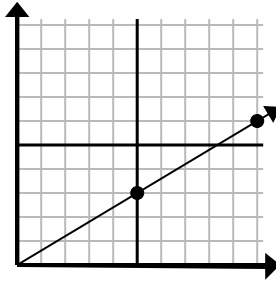
Answers

1)



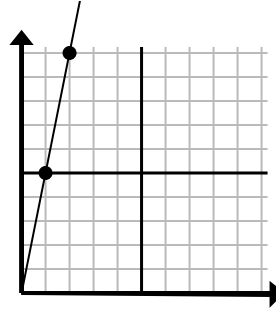
- A. (12, 6)
- B. (13, 5)
- C. (9, 6)
- D. (11, 5)

2)



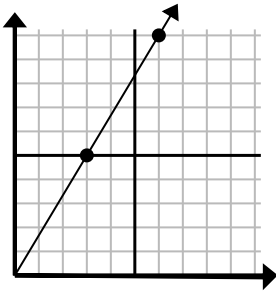
- A. (15, 9)
- B. (15, 5)
- C. (13, 4)
- D. (13, 8)

3)



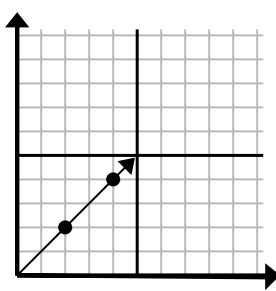
- A. (5, 8)
- B. (7, 10)
- C. (3, 15)
- D. (6, 8)

4)



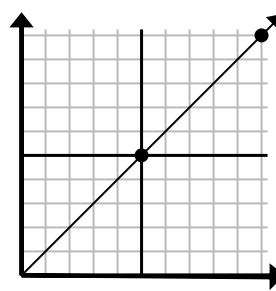
- A. (9, 15)
- B. (9, 7)
- C. (8, 9)
- D. (8, 10)

5)



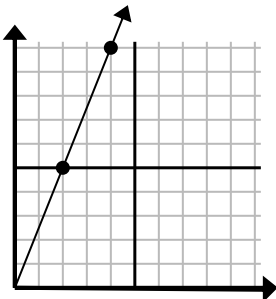
- A. (6, 7)
- B. (9, 3)
- C. (6, 6)
- D. (9, 4)

6)



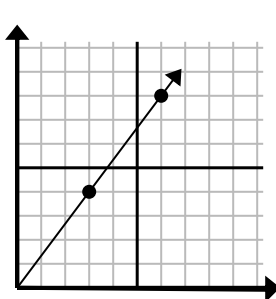
- A. (15, 7)
- B. (15, 15)
- C. (13, 9)
- D. (14, 7)

7)



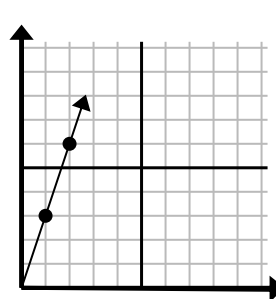
- A. (9, 9)
- B. (8, 10)
- C. (6, 15)
- D. (6, 9)

8)



- A. (9, 12)
- B. (11, 8)
- C. (8, 8)
- D. (10, 6)

9)

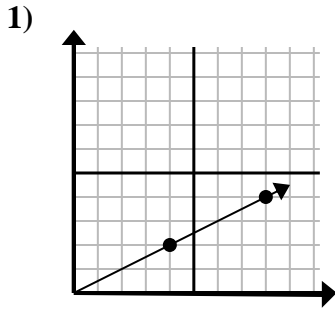


- A. (3, 9)
- B. (3, 6)
- C. (6, 4)
- D. (6, 6)

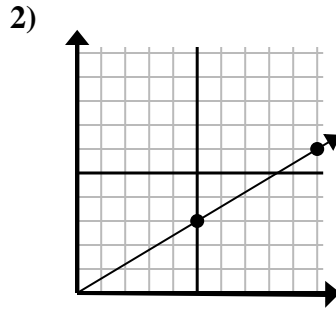
1. _____
2. _____
3. _____
4. _____
5. _____
6. _____
7. _____
8. _____
9. _____



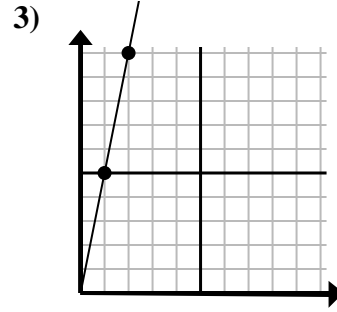
Determine which choice represents a point on the line if it were to continue.



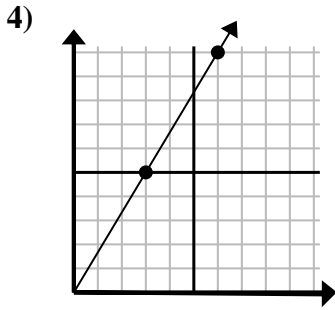
- A. (12 , 6)
- B. (13 , 5)
- C. (9 , 6)
- D. (11 , 5)



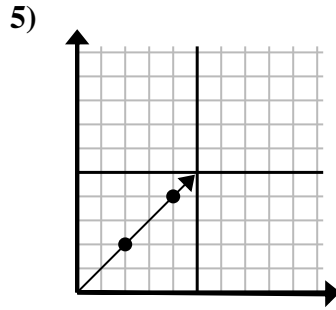
- A. (15 , 9)
- B. (15 , 5)
- C. (13 , 4)
- D. (13 , 8)



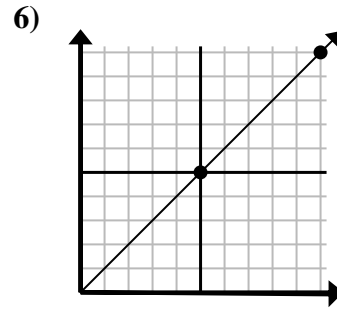
- A. (5 , 8)
- B. (7 , 10)
- C. (3 , 15)
- D. (6 , 8)



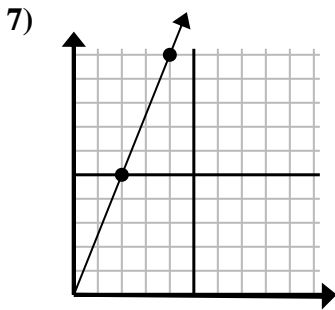
- A. (9 , 15)
- B. (9 , 7)
- C. (8 , 9)
- D. (8 , 10)



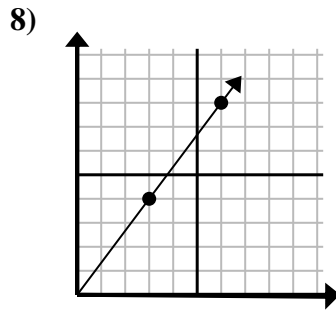
- A. (6 , 7)
- B. (9 , 3)
- C. (6 , 6)
- D. (9 , 4)



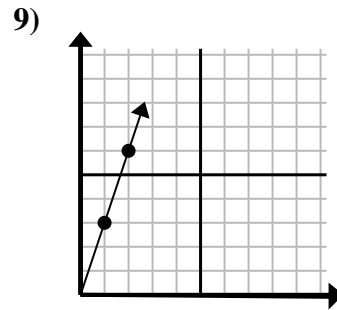
- A. (15 , 7)
- B. (15 , 15)
- C. (13 , 9)
- D. (14 , 7)



- A. (9 , 9)
- B. (8 , 10)
- C. (6 , 15)
- D. (6 , 9)



- A. (9 , 12)
- B. (11 , 8)
- C. (8 , 8)
- D. (10 , 6)



- A. (3 , 9)
- B. (3 , 6)
- C. (6 , 4)
- D. (6 , 6)

Answers

- 1. **A**
- 2. **A**
- 3. **C**
- 4. **A**
- 5. **C**
- 6. **B**
- 7. **C**
- 8. **A**
- 9. **A**