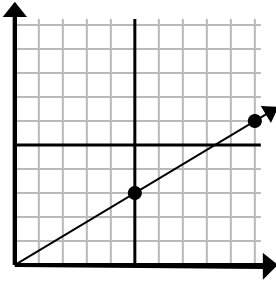




Determine which choice represents a point on the line if it were to continue.

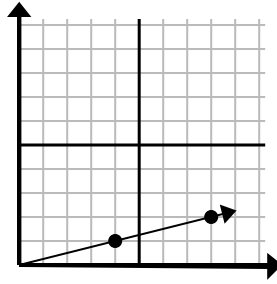
Answers

1)



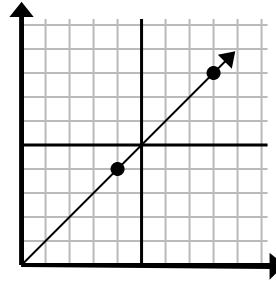
- A. (15, 8)
- B. (12, 7)
- C. (12, 4)
- D. (15, 9)

2)



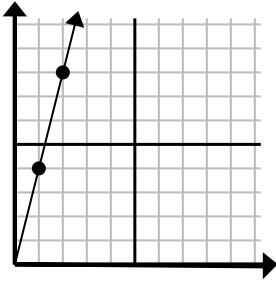
- A. (10, 5)
- B. (12, 3)
- C. (11, 3)
- D. (13, 3)

3)



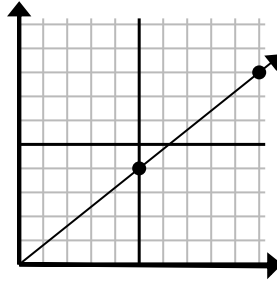
- A. (12, 12)
- B. (11, 9)
- C. (10, 9)
- D. (9, 7)

4)



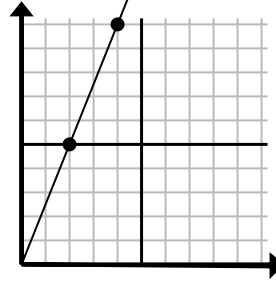
- A. (6, 9)
- B. (3, 12)
- C. (4, 8)
- D. (7, 8)

5)



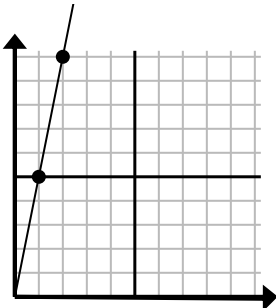
- A. (12, 8)
- B. (15, 12)
- C. (14, 8)
- D. (12, 6)

6)



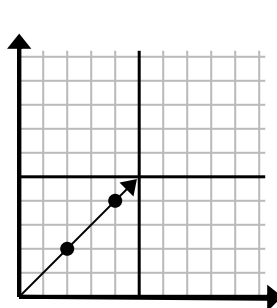
- A. (8, 6)
- B. (7, 7)
- C. (6, 15)
- D. (7, 10)

7)



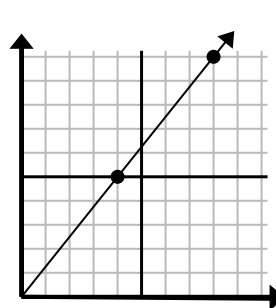
- A. (5, 8)
- B. (4, 8)
- C. (3, 15)
- D. (3, 10)

8)



- A. (5, 4)
- B. (8, 4)
- C. (6, 6)
- D. (8, 7)

9)



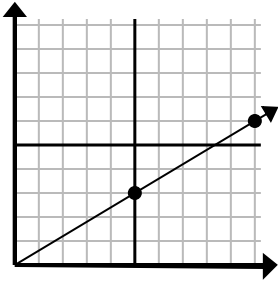
- A. (13, 6)
- B. (13, 9)
- C. (12, 15)
- D. (9, 10)

1. _____
2. _____
3. _____
4. _____
5. _____
6. _____
7. _____
8. _____
9. _____



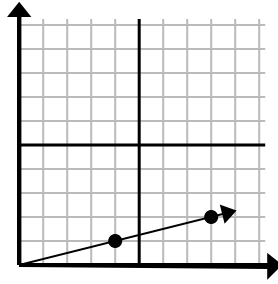
Determine which choice represents a point on the line if it were to continue.

1)



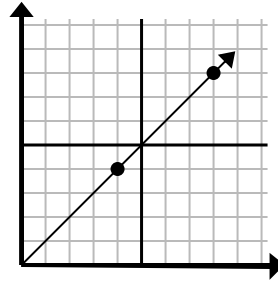
- A. (15, 8)
- B. (12, 7)
- C. (12, 4)
- D. (15, 9)

2)



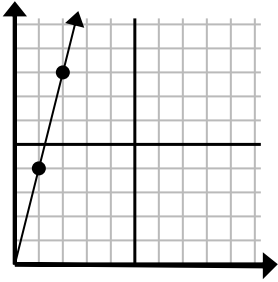
- A. (10, 5)
- B. (12, 3)
- C. (11, 3)
- D. (13, 3)

3)



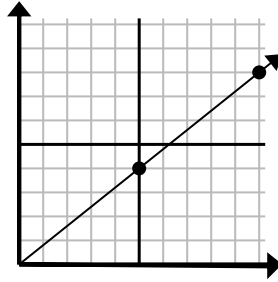
- A. (12, 12)
- B. (11, 9)
- C. (10, 9)
- D. (9, 7)

4)



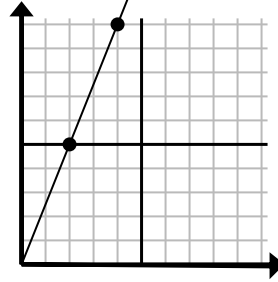
- A. (6, 9)
- B. (3, 12)
- C. (4, 8)
- D. (7, 8)

5)



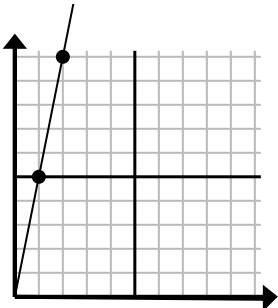
- A. (12, 8)
- B. (15, 12)
- C. (14, 8)
- D. (12, 6)

6)



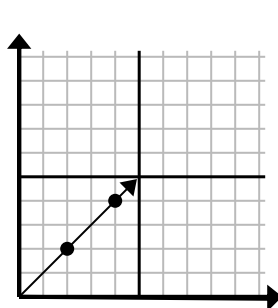
- A. (8, 6)
- B. (7, 7)
- C. (6, 15)
- D. (7, 10)

7)



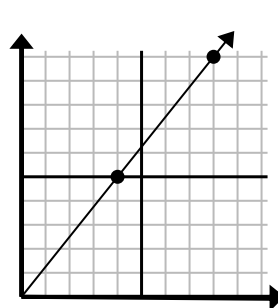
- A. (5, 8)
- B. (4, 8)
- C. (3, 15)
- D. (3, 10)

8)



- A. (5, 4)
- B. (8, 4)
- C. (6, 6)
- D. (8, 7)

9)



- A. (13, 6)
- B. (13, 9)
- C. (12, 15)
- D. (9, 10)

Answers

- 1. **D**
- 2. **B**
- 3. **A**
- 4. **B**
- 5. **B**
- 6. **C**
- 7. **C**
- 8. **C**
- 9. **C**