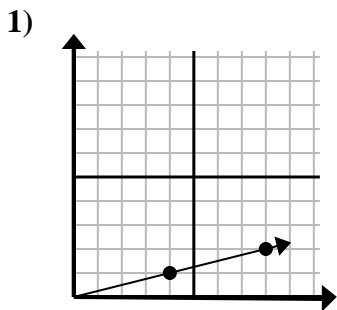


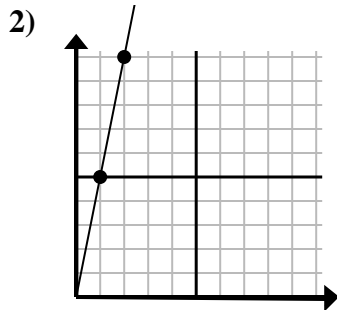


Determine which choice represents a point on the line if it were to continue.

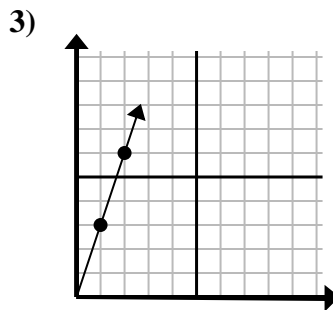
Answers



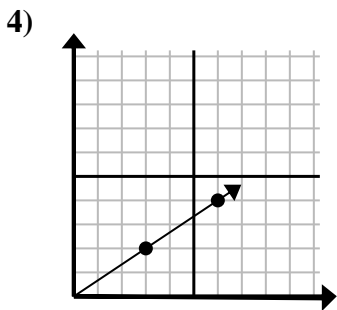
- A. (11, 2)
- B. (9, 4)
- C. (12, 3)
- D. (13, 3)



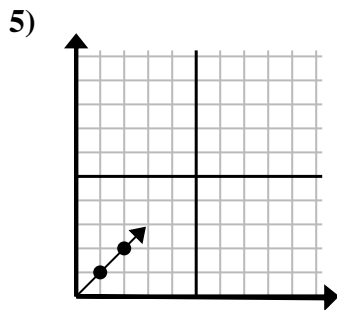
- A. (4, 7)
- B. (3, 15)
- C. (7, 8)
- D. (5, 8)



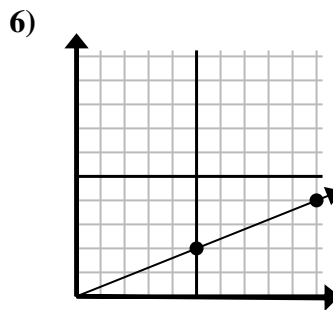
- A. (7, 5)
- B. (3, 9)
- C. (6, 7)
- D. (7, 6)



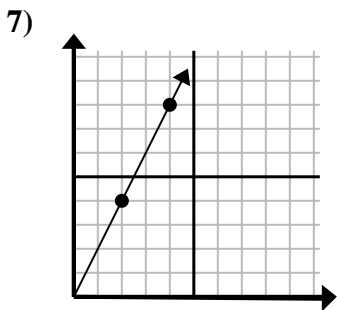
- A. (9, 6)
- B. (10, 6)
- C. (7, 7)
- D. (7, 5)



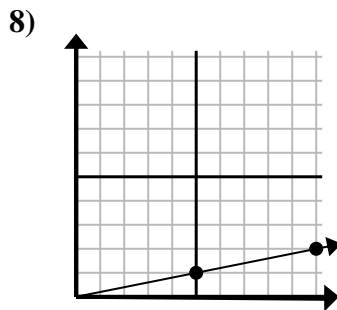
- A. (3, 3)
- B. (3, 5)
- C. (7, 3)
- D. (5, 2)



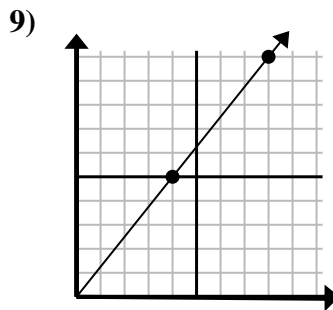
- A. (14, 6)
- B. (14, 4)
- C. (15, 6)
- D. (15, 3)



- A. (7, 8)
- B. (6, 5)
- C. (5, 6)
- D. (6, 12)



- A. (11, 6)
- B. (14, 3)
- C. (13, 3)
- D. (15, 3)

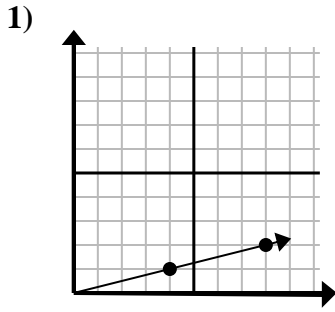


- A. (12, 15)
- B. (11, 8)
- C. (10, 10)
- D. (11, 10)

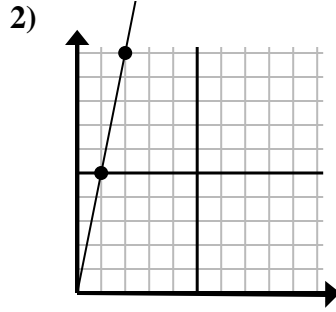
- 1. _____
- 2. _____
- 3. _____
- 4. _____
- 5. _____
- 6. _____
- 7. _____
- 8. _____
- 9. _____



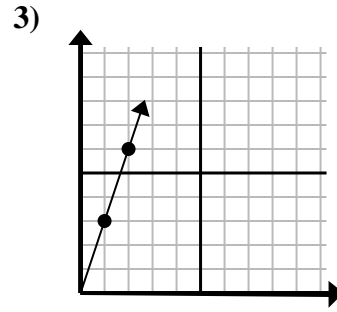
Determine which choice represents a point on the line if it were to continue.



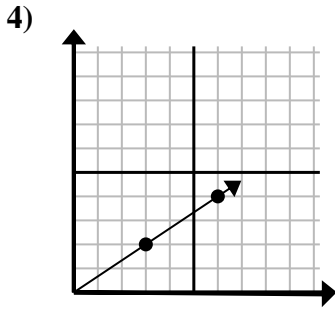
- A. (11, 2)
- B. (9, 4)
- C. (12, 3)
- D. (13, 3)



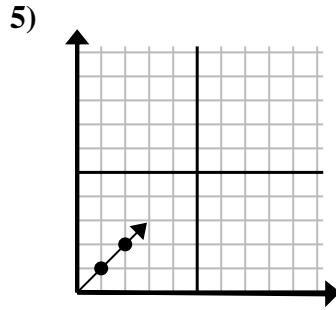
- A. (4, 7)
- B. (3, 15)
- C. (7, 8)
- D. (5, 8)



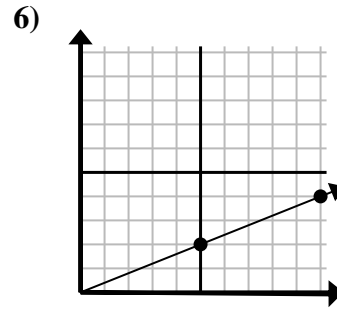
- A. (7, 5)
- B. (3, 9)
- C. (6, 7)
- D. (7, 6)



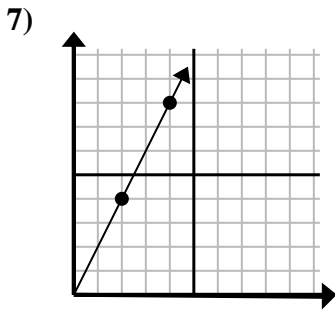
- A. (9, 6)
- B. (10, 6)
- C. (7, 7)
- D. (7, 5)



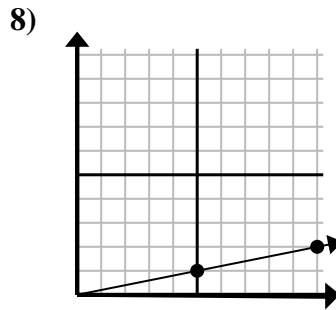
- A. (3, 3)
- B. (3, 5)
- C. (7, 3)
- D. (5, 2)



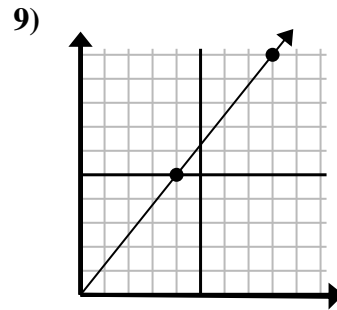
- A. (14, 6)
- B. (14, 4)
- C. (15, 6)
- D. (15, 3)



- A. (7, 8)
- B. (6, 5)
- C. (5, 6)
- D. (6, 12)



- A. (11, 6)
- B. (14, 3)
- C. (13, 3)
- D. (15, 3)



- A. (12, 15)
- B. (11, 8)
- C. (10, 10)
- D. (11, 10)

Answers

- 1. C
- 2. B
- 3. B
- 4. A
- 5. A
- 6. C
- 7. D
- 8. D
- 9. A