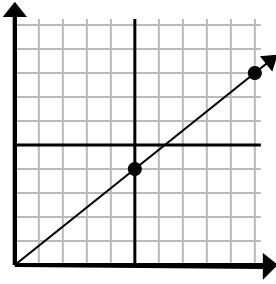




Determine which choice represents a point on the line if it were to continue.

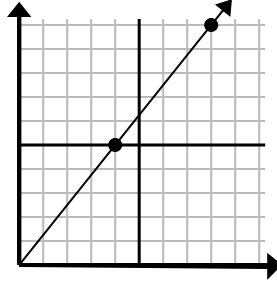
Answers

1)



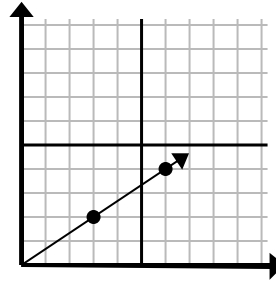
- A. (14, 9)
- B. (15, 12)
- C. (12, 9)
- D. (11, 7)

2)



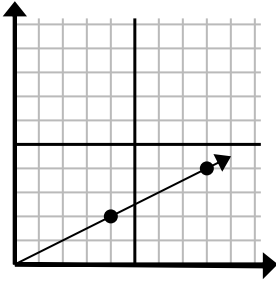
- A. (9, 8)
- B. (12, 15)
- C. (9, 7)
- D. (13, 6)

3)



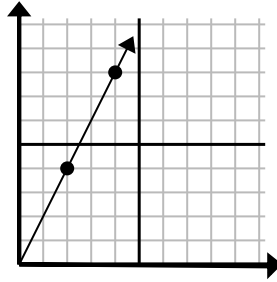
- A. (7, 7)
- B. (10, 4)
- C. (11, 6)
- D. (9, 6)

4)



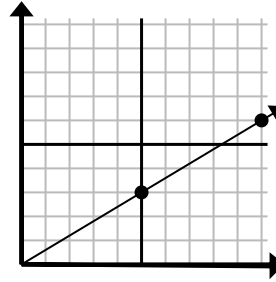
- A. (9, 6)
- B. (10, 4)
- C. (13, 6)
- D. (12, 6)

5)



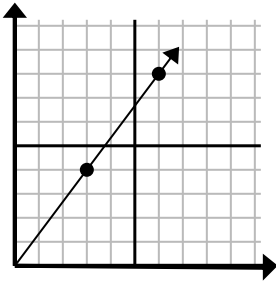
- A. (5, 5)
- B. (7, 9)
- C. (8, 5)
- D. (6, 12)

6)



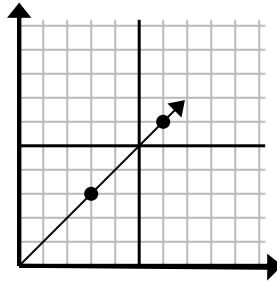
- A. (15, 9)
- B. (12, 5)
- C. (13, 8)
- D. (14, 5)

7)



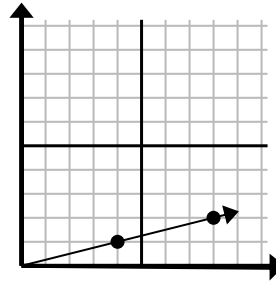
- A. (10, 9)
- B. (9, 12)
- C. (7, 6)
- D. (7, 5)

8)



- A. (11, 7)
- B. (7, 7)
- C. (9, 9)
- D. (11, 8)

9)



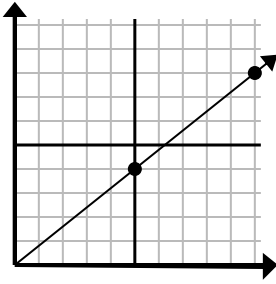
- A. (11, 2)
- B. (13, 4)
- C. (10, 3)
- D. (12, 3)

1. \_\_\_\_\_
2. \_\_\_\_\_
3. \_\_\_\_\_
4. \_\_\_\_\_
5. \_\_\_\_\_
6. \_\_\_\_\_
7. \_\_\_\_\_
8. \_\_\_\_\_
9. \_\_\_\_\_



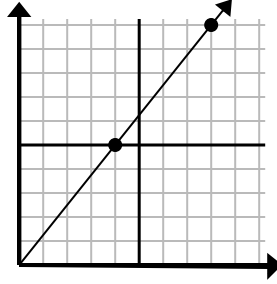
Determine which choice represents a point on the line if it were to continue.

1)



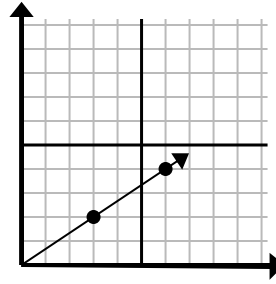
- A. (14, 9)
- B. (15, 12)
- C. (12, 9)
- D. (11, 7)

2)



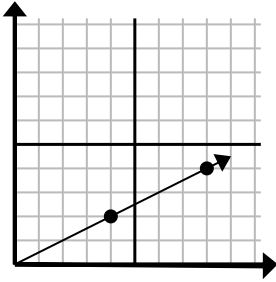
- A. (9, 8)
- B. (12, 15)
- C. (9, 7)
- D. (13, 6)

3)



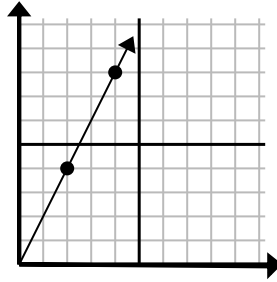
- A. (7, 7)
- B. (10, 4)
- C. (11, 6)
- D. (9, 6)

4)



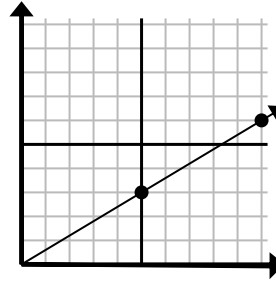
- A. (9, 6)
- B. (10, 4)
- C. (13, 6)
- D. (12, 6)

5)



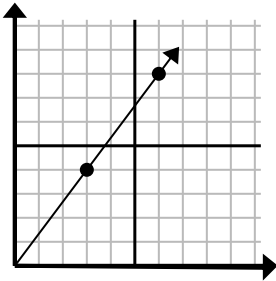
- A. (5, 5)
- B. (7, 9)
- C. (8, 5)
- D. (6, 12)

6)



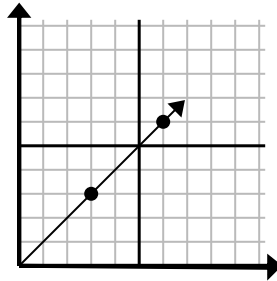
- A. (15, 9)
- B. (12, 5)
- C. (13, 8)
- D. (14, 5)

7)



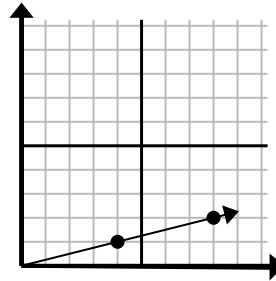
- A. (10, 9)
- B. (9, 12)
- C. (7, 6)
- D. (7, 5)

8)



- A. (11, 7)
- B. (7, 7)
- C. (9, 9)
- D. (11, 8)

9)



- A. (11, 2)
- B. (13, 4)
- C. (10, 3)
- D. (12, 3)

Answers

- 1. **B**
- 2. **B**
- 3. **D**
- 4. **D**
- 5. **D**
- 6. **A**
- 7. **B**
- 8. **C**
- 9. **D**