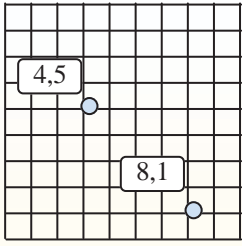




Find the midpoint of each set of coordinates.



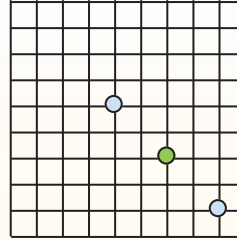
Midpoint Formula

$$\left(\frac{x_1 + x_2}{2}, \frac{y_1 + y_2}{2} \right)$$

To find the midpoint of the coordinates (4,5) and (8,1), plug the values into the midpoint formula.

$$\left(\frac{4 + 8}{2}, \frac{5 + 1}{2} \right)$$

The midpoint is at
(6, 3)



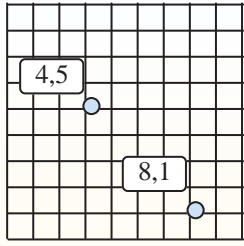
Answers

1. _____
2. _____
3. _____
4. _____
5. _____
6. _____
7. _____
8. _____
9. _____
10. _____
11. _____
12. _____

- 1) (9, 10) & (9, 10)
- 2) (2, 1) & (0, 5)
- 3) (6, 6) & (2, 4)
- 4) (3, 5) & (4, 5)
- 5) (4, 6) & (3, 1)
- 6) (4, 0) & (10, 1)
- 7) (1, 6) & (10, 8)
- 8) (1, 5) & (4, 0)
- 9) (5, 4) & (9, 1)
- 10) (5, 6) & (5, 0)
- 11) (1, 8) & (9, 10)
- 12) (0, 1) & (0, 9)



Find the midpoint of each set of coordinates.



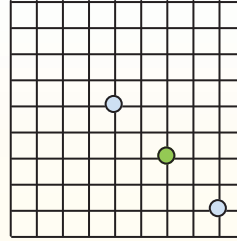
Midpoint Formula

$$\left(\frac{x_1 + x_2}{2}, \frac{y_1 + y_2}{2} \right)$$

To find the midpoint of the coordinates (4,5) and (8,1), plug the values into the midpoint formula.

$$\left(\frac{4 + 8}{2}, \frac{5 + 1}{2} \right)$$

The midpoint is at
(6, 3)



Answers

1. (9, 10)

2. (1, 3)

3. (4, 5)

4. (3.5, 5)

5. (3.5, 3.5)

6. (7, 0.5)

7. (5.5, 7)

8. (2.5, 2.5)

9. (7, 2.5)

10. (5, 3)

11. (5, 9)

12. (0, 5)

1) $(9, 10) \& (9, 10) \quad \left(\frac{9+9}{2}, \frac{10+10}{2} \right) = (9, 10)$

2) $(2, 1) \& (0, 5) \quad \left(\frac{2+0}{2}, \frac{1+5}{2} \right) = (1, 3)$

3) $(6, 6) \& (2, 4) \quad \left(\frac{6+2}{2}, \frac{6+4}{2} \right) = (4, 5)$

4) $(3, 5) \& (4, 5) \quad \left(\frac{3+4}{2}, \frac{5+5}{2} \right) = (3.5, 5)$

5) $(4, 6) \& (3, 1) \quad \left(\frac{4+3}{2}, \frac{6+1}{2} \right) = (3.5, 3.5)$

6) $(4, 0) \& (10, 1) \quad \left(\frac{4+10}{2}, \frac{0+1}{2} \right) = (7, 0.5)$

7) $(1, 6) \& (10, 8) \quad \left(\frac{1+10}{2}, \frac{6+8}{2} \right) = (5.5, 7)$

8) $(1, 5) \& (4, 0) \quad \left(\frac{1+4}{2}, \frac{5+0}{2} \right) = (2.5, 2.5)$

9) $(5, 4) \& (9, 1) \quad \left(\frac{5+9}{2}, \frac{4+1}{2} \right) = (7, 2.5)$

10) $(5, 6) \& (5, 0) \quad \left(\frac{5+5}{2}, \frac{6+0}{2} \right) = (5, 3)$

11) $(1, 8) \& (9, 10) \quad \left(\frac{1+9}{2}, \frac{8+10}{2} \right) = (5, 9)$

12) $(0, 1) \& (0, 9) \quad \left(\frac{0+0}{2}, \frac{1+9}{2} \right) = (0, 5)$