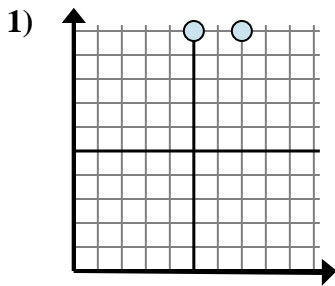


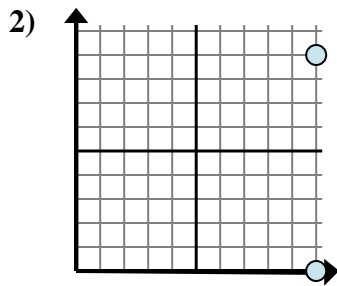


Determine which expression best shows the distance between the two points.

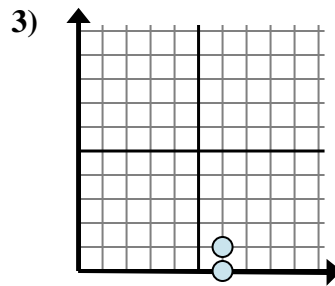
Answers



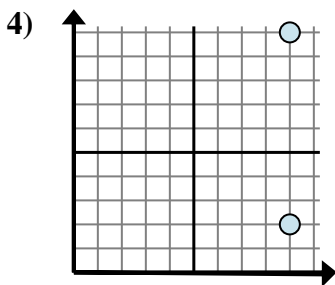
- A. $5 - 10$
- B. $10 - 7$
- C. $7 - 5$
- D. $10 - 10$



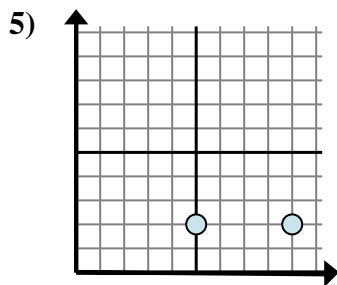
- A. $10 - 10$
- B. $9 - 0$
- C. $9 - 10$
- D. $0 - 9$



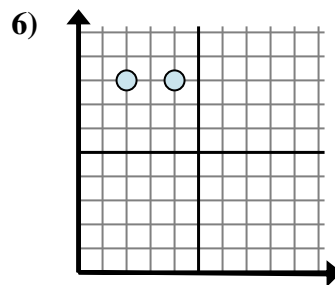
- A. $6 - 1$
- B. $1 - 0$
- C. $6 - 6$
- D. $0 - 1$



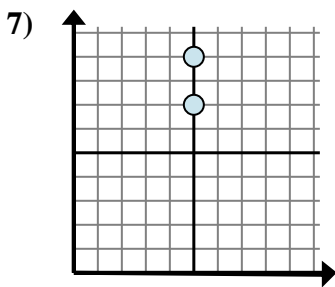
- A. $10 - 2$
- B. $9 - 9$
- C. $10 - 9$
- D. $9 - 10$



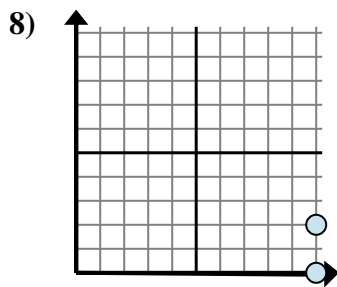
- A. $2 - 2$
- B. $5 - 9$
- C. $9 - 2$
- D. $9 - 5$



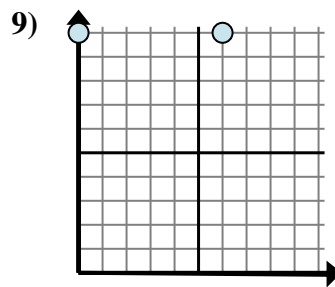
- A. $4 - 8$
- B. $8 - 8$
- C. $4 - 2$
- D. $2 - 4$



- A. $5 - 7$
- B. $9 - 7$
- C. $9 - 5$
- D. $7 - 5$



- A. $0 - 10$
- B. $0 - 2$
- C. $2 - 0$
- D. $10 - 2$

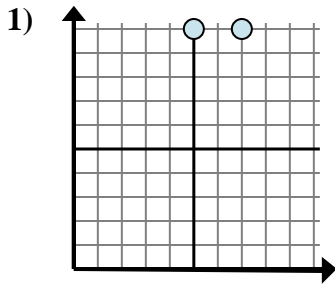


- A. $0 - 10$
- B. $6 - 0$
- C. $10 - 10$
- D. $0 - 6$

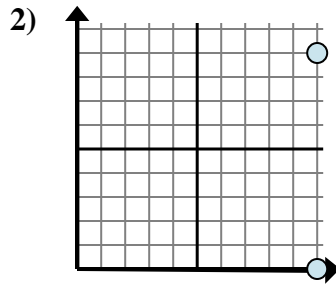
1. _____
2. _____
3. _____
4. _____
5. _____
6. _____
7. _____
8. _____
9. _____



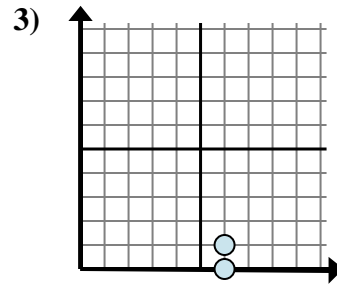
Determine which expression best shows the distance between the two points.



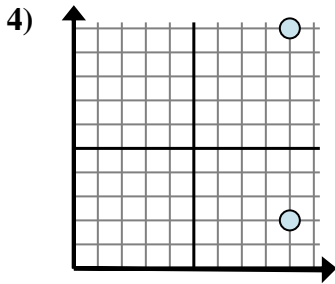
- A. $5 - 10$
- B. $10 - 7$
- C. $7 - 5$
- D. $10 - 10$



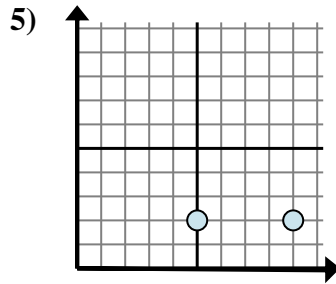
- A. $10 - 10$
- B. $9 - 0$
- C. $9 - 10$
- D. $0 - 9$



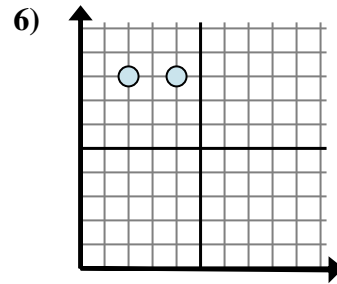
- A. $6 - 1$
- B. $1 - 0$
- C. $6 - 6$
- D. $0 - 1$



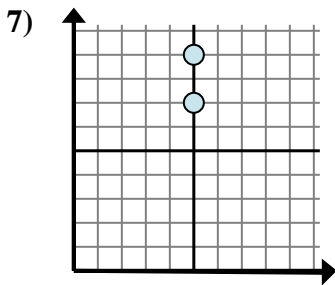
- A. $10 - 2$
- B. $9 - 9$
- C. $10 - 9$
- D. $9 - 10$



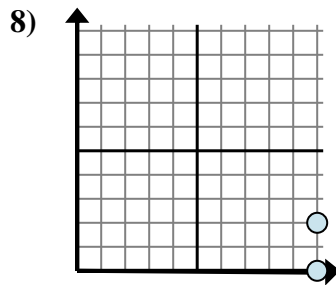
- A. $2 - 2$
- B. $5 - 9$
- C. $9 - 2$
- D. $9 - 5$



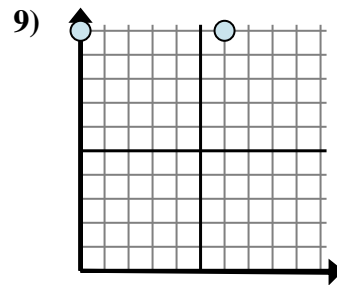
- A. $4 - 8$
- B. $8 - 8$
- C. $4 - 2$
- D. $2 - 4$



- A. $5 - 7$
- B. $9 - 7$
- C. $9 - 5$
- D. $7 - 5$



- A. $0 - 10$
- B. $0 - 2$
- C. $2 - 0$
- D. $10 - 2$



- A. $0 - 10$
- B. $6 - 0$
- C. $10 - 10$
- D. $0 - 6$

Answers

- 1. **C**
- 2. **B**
- 3. **B**
- 4. **A**
- 5. **D**
- 6. **C**
- 7. **B**
- 8. **C**
- 9. **B**