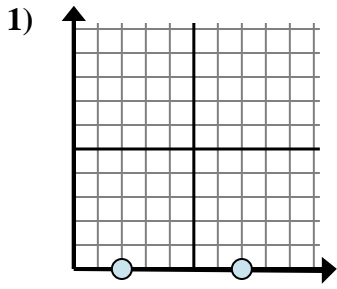


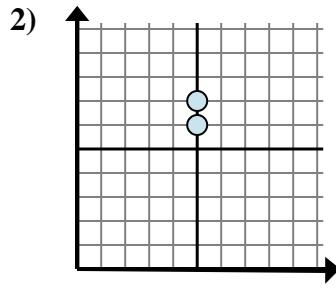


Determine which expression best shows the distance between the two points.

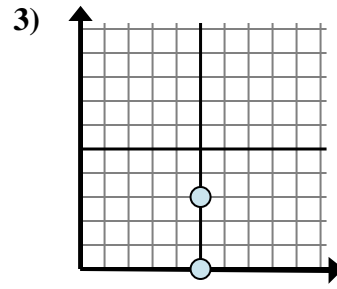
Answers



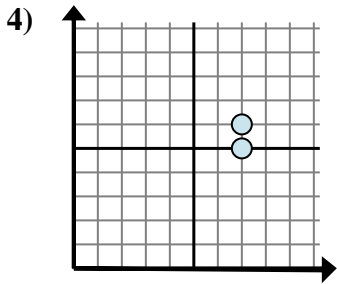
- A.  $0 - 7$
- B.  $7 - 2$
- C.  $7 - 0$
- D.  $0 - 0$



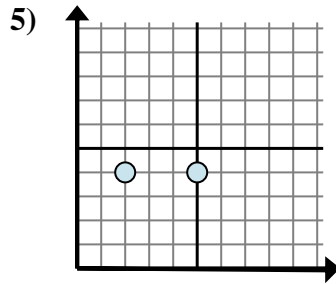
- A.  $7 - 6$
- B.  $7 - 5$
- C.  $5 - 5$
- D.  $5 - 6$



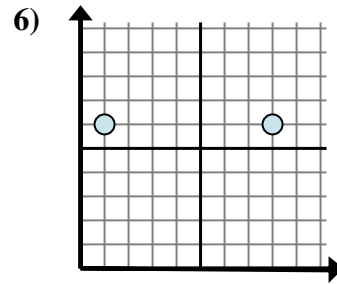
- A.  $5 - 0$
- B.  $0 - 3$
- C.  $3 - 0$
- D.  $5 - 5$



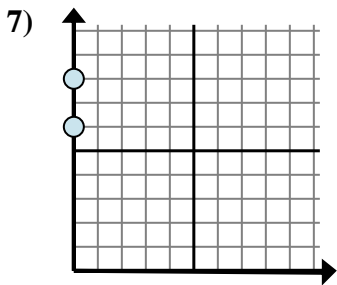
- A.  $5 - 7$
- B.  $7 - 5$
- C.  $5 - 6$
- D.  $6 - 5$



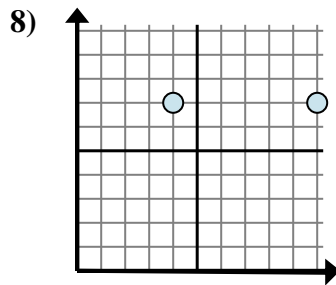
- A.  $5 - 4$
- B.  $5 - 2$
- C.  $2 - 4$
- D.  $4 - 4$



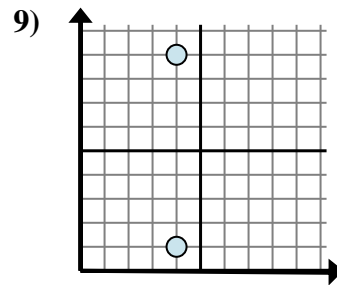
- A.  $6 - 6$
- B.  $1 - 6$
- C.  $6 - 1$
- D.  $8 - 1$



- A.  $0 - 6$
- B.  $0 - 0$
- C.  $6 - 8$
- D.  $8 - 6$



- A.  $10 - 4$
- B.  $7 - 10$
- C.  $7 - 7$
- D.  $10 - 7$

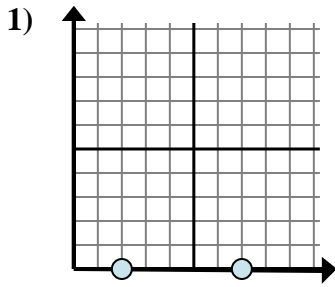


- A.  $1 - 4$
- B.  $4 - 4$
- C.  $4 - 9$
- D.  $9 - 1$

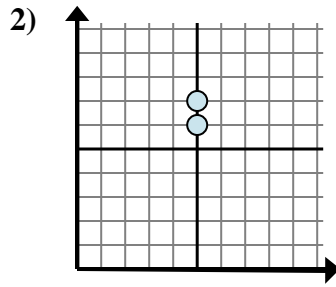
- 1. \_\_\_\_\_
- 2. \_\_\_\_\_
- 3. \_\_\_\_\_
- 4. \_\_\_\_\_
- 5. \_\_\_\_\_
- 6. \_\_\_\_\_
- 7. \_\_\_\_\_
- 8. \_\_\_\_\_
- 9. \_\_\_\_\_



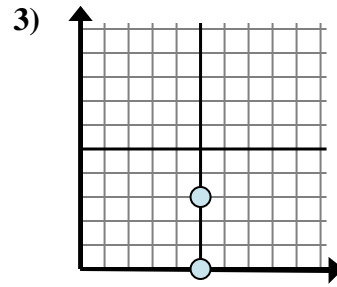
Determine which expression best shows the distance between the two points.



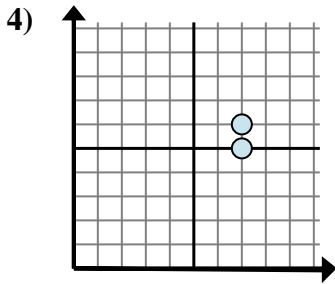
- A.  $0 - 7$
- B.  $7 - 2$
- C.  $7 - 0$
- D.  $0 - 0$



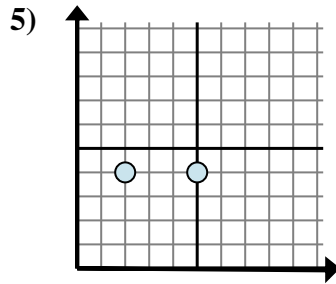
- A.  $7 - 6$
- B.  $7 - 5$
- C.  $5 - 5$
- D.  $5 - 6$



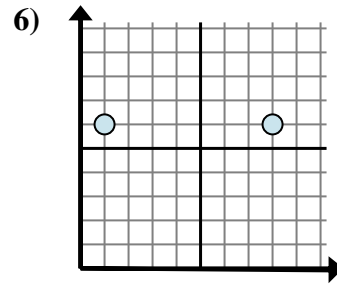
- A.  $5 - 0$
- B.  $0 - 3$
- C.  $3 - 0$
- D.  $5 - 5$



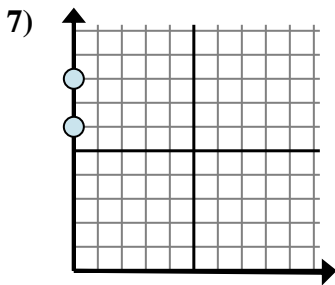
- A.  $5 - 7$
- B.  $7 - 5$
- C.  $5 - 6$
- D.  $6 - 5$



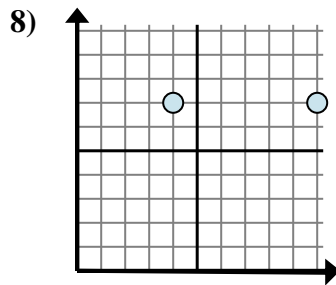
- A.  $5 - 4$
- B.  $5 - 2$
- C.  $2 - 4$
- D.  $4 - 4$



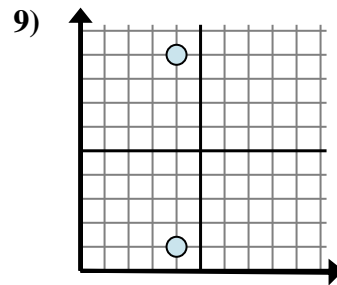
- A.  $6 - 6$
- B.  $1 - 6$
- C.  $6 - 1$
- D.  $8 - 1$



- A.  $0 - 6$
- B.  $0 - 0$
- C.  $6 - 8$
- D.  $8 - 6$



- A.  $10 - 4$
- B.  $7 - 10$
- C.  $7 - 7$
- D.  $10 - 7$



- A.  $1 - 4$
- B.  $4 - 4$
- C.  $4 - 9$
- D.  $9 - 1$

Answers

- 1.     **B**
- 2.     **A**
- 3.     **C**
- 4.     **D**
- 5.     **B**
- 6.     **D**
- 7.     **D**
- 8.     **A**
- 9.     **D**