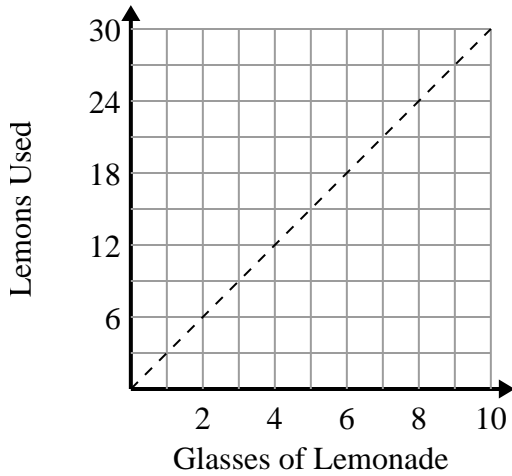




Determine which statements about the graph are true.

Answers

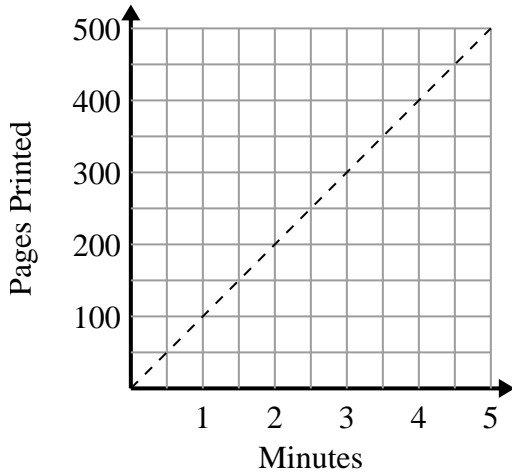
1)



- A. The point (27 , 9) shows that it will take 27 lemons to make 9 glasses of lemonade.
- B. The point (9 , 3) shows that making 3 glasses of lemonade will take 9 lemons.
- C. The point (7 , 21) shows that making 7 glasses of lemonade will take 21 lemons.
- D. The point (3 , 9) shows that making 3 glasses of lemonade will take 9 lemons.

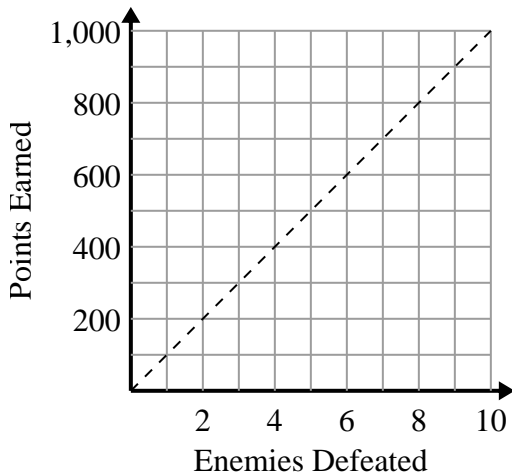
- 1. \_\_\_\_\_
- 2. \_\_\_\_\_
- 3. \_\_\_\_\_

2)



- A. The point (100 , 1) shows that it takes 1 minutes to print 100 pages.
- B. The point (4 , 400) shows that it takes 4 minutes to print 400 pages.
- C. The point (4.5 , 450) shows that printing 450 pages will take 4.5 minutes.
- D. The point (3 , 300) shows that it takes 3 minutes to print 300 pages.

3)

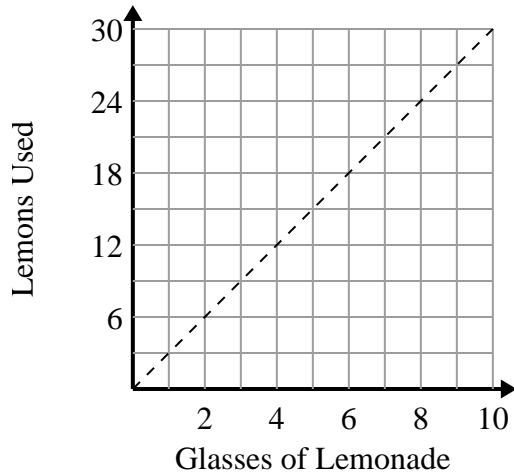


- A. The point (800 , 8) shows that you would earn 800 points for defeating 8 enemies.
- B. The point (700 , 7) shows that defeating 7 enemies will earn you 700 points.
- C. The point (6 , 600) shows that you would earn 600 points for defeating 6 enemies.
- D. The point (8 , 800) shows that defeating 8 enemies will earn you 800 points.



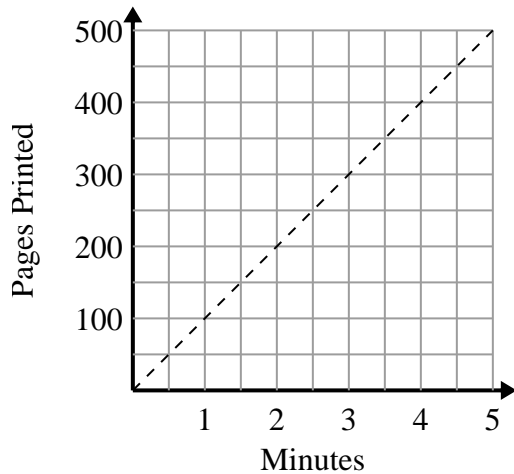
Determine which statements about the graph are true.

1)



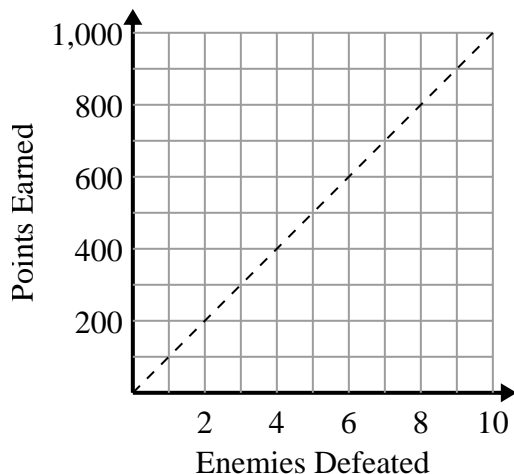
- A. The point (27 , 9) shows that it will take 27 lemons to make 9 glasses of lemonade.
- B. The point (9 , 3) shows that making 3 glasses of lemonade will take 9 lemons.
- C. The point (7 , 21) shows that making 7 glasses of lemonade will take 21 lemons.
- D. The point (3 , 9) shows that making 3 glasses of lemonade will take 9 lemons.

2)



- A. The point (100 , 1) shows that it takes 1 minutes to print 100 pages.
- B. The point (4 , 400) shows that it takes 4 minutes to print 400 pages.
- C. The point (4.5 , 450) shows that printing 450 pages will take 4.5 minutes.
- D. The point (3 , 300) shows that it takes 3 minutes to print 300 pages.

3)



- A. The point (800 , 8) shows that you would earn 800 points for defeating 8 enemies.
- B. The point (700 , 7) shows that defeating 7 enemies will earn you 700 points.
- C. The point (6 , 600) shows that you would earn 600 points for defeating 6 enemies.
- D. The point (8 , 800) shows that defeating 8 enemies will earn you 800 points.

Answers

1. C,D
2. B,C,D
3. C,D