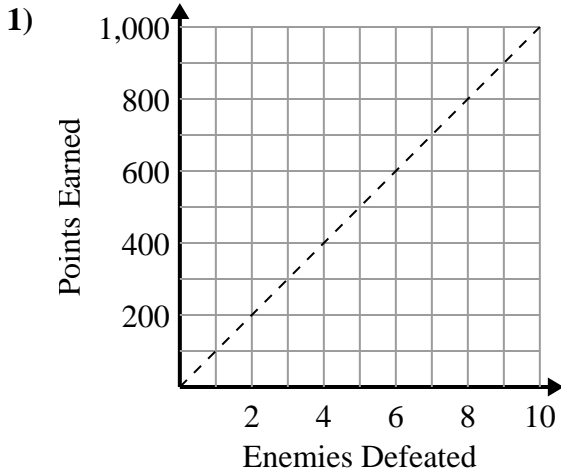




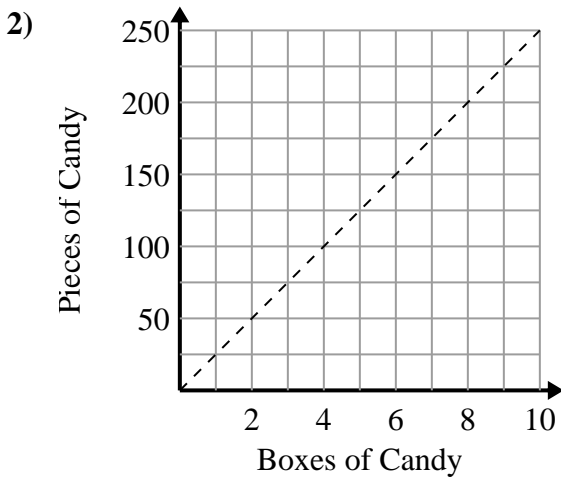
Determine which statements about the graph are true.

Answers

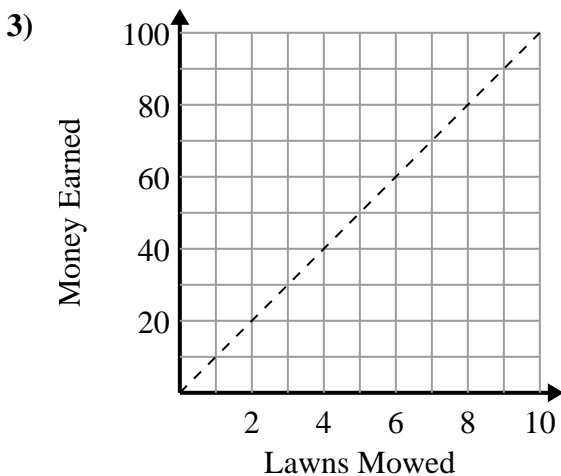


- A. The point (5 , 500) shows that defeating 5 enemies will earn you 500 points.
- B. The point (2 , 200) shows that you would earn 200 points for defeating 2 enemies.
- C. The point (700 , 7) shows that defeating 7 enemies will earn you 700 points.
- D. The point (900 , 9) shows that defeating 9 enemies will earn you 900 points.

1. _____
2. _____
3. _____



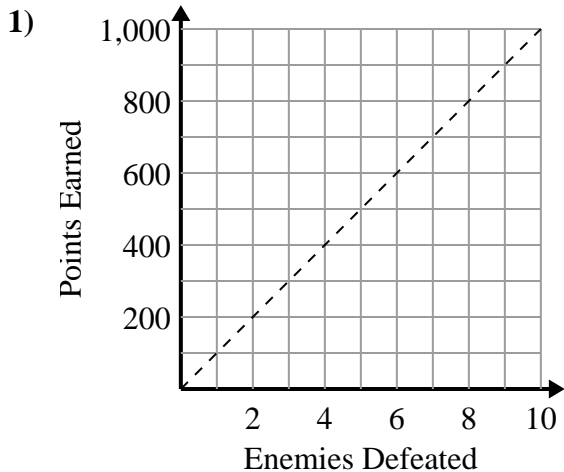
- A. The point (200 , 8) shows that you get 200 pieces of candy in 8 boxes.
- B. The point (225 , 9) shows that you get 225 pieces of candy in 9 boxes.
- C. The point (6 , 150) shows that 6 boxes of candy contain 150 pieces of candy.
- D. The point (3 , 75) shows that you get 75 pieces of candy in 3 boxes.



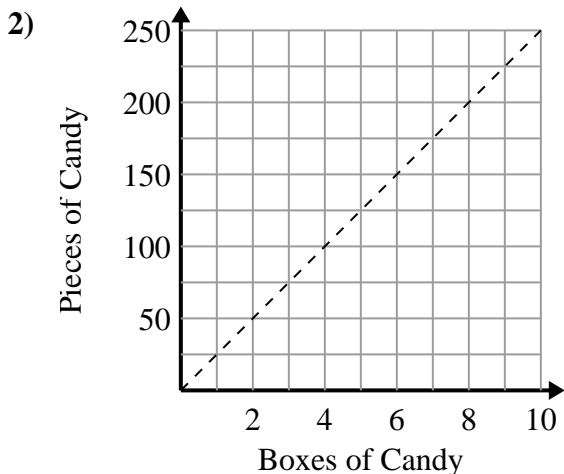
- A. The point (4 , 40) shows that you would earn \$40 for mowing 4 lawns.
- B. The point (2 , 20) shows that mowing 2 lawns will earn you \$20.
- C. The point (9 , 90) shows that mowing 9 lawns will earn you \$90.
- D. The point (40 , 4) shows that you would earn \$40 for mowing 4 lawns.



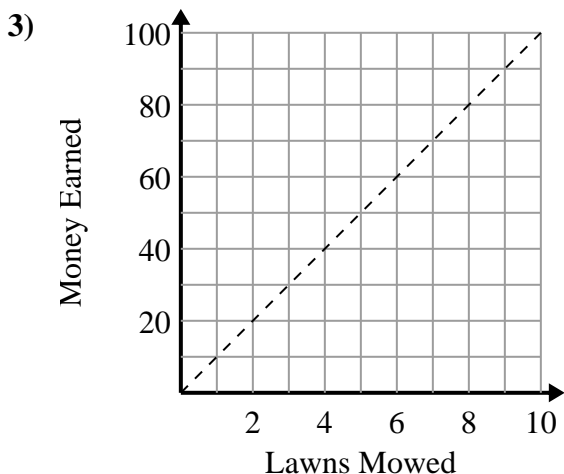
Determine which statements about the graph are true.



- A. The point (5 , 500) shows that defeating 5 enemies will earn you 500 points.
- B. The point (2 , 200) shows that you would earn 200 points for defeating 2 enemies.
- C. The point (700 , 7) shows that defeating 7 enemies will earn you 700 points.
- D. The point (900 , 9) shows that defeating 9 enemies will earn you 900 points.



- A. The point (200 , 8) shows that you get 200 pieces of candy in 8 boxes.
- B. The point (225 , 9) shows that you get 225 pieces of candy in 9 boxes.
- C. The point (6 , 150) shows that 6 boxes of candy contain 150 pieces of candy.
- D. The point (3 , 75) shows that you get 75 pieces of candy in 3 boxes.



- A. The point (4 , 40) shows that you would earn \$40 for mowing 4 lawns.
- B. The point (2 , 20) shows that mowing 2 lawns will earn you \$20.
- C. The point (9 , 90) shows that mowing 9 lawns will earn you \$90.
- D. The point (40 , 4) shows that you would earn \$40 for mowing 4 lawns.

Answers

- 1. A,B
- 2. C,D
- 3. A,B,C