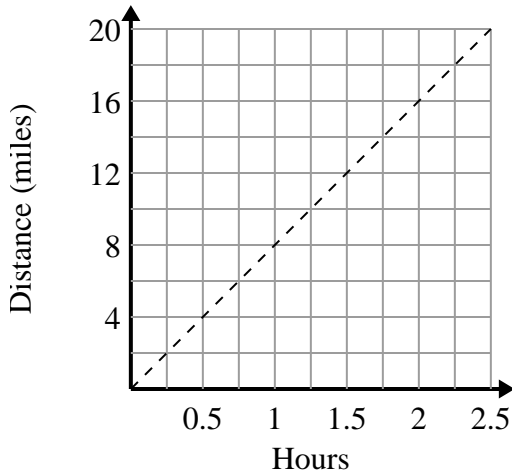




Determine which statements about the graph are true.

Answers

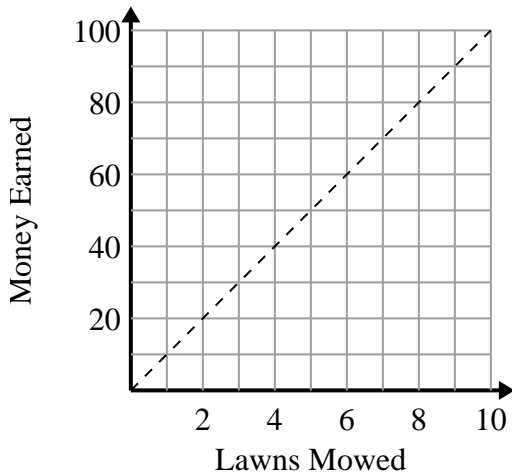
1)



- A. The point (0.5 , 4) shows that it takes 0.5 hours to travel 4 miles.
- B. The point (8 , 1) shows that it takes 1 hours to travel 8 miles.
- C. The point (4 , 0.5) shows that travelling 4 miles will take 0.5 hours.
- D. The point (1.25 , 10) shows that it takes 1.25 hours to travel 10 miles.

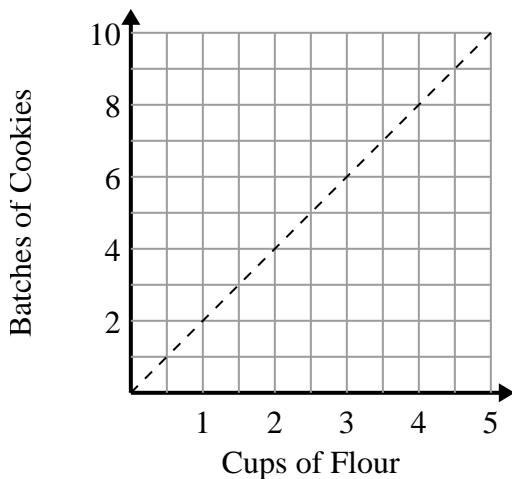
- 1. _____
- 2. _____
- 3. _____

2)

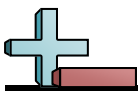


- A. The point (5 , 50) shows that mowing 5 lawns will earn you \$50.
- B. The point (9 , 90) shows that mowing 9 lawns will earn you \$90.
- C. The point (70 , 7) shows that mowing 7 lawns will earn you \$70.
- D. The point (3 , 30) shows that mowing 3 lawns will earn you \$30.

3)

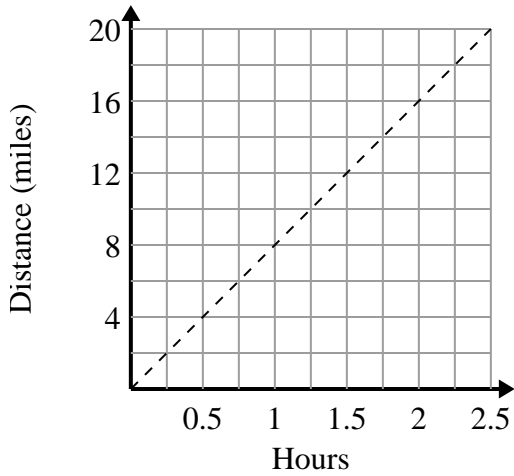


- A. The point (4 , 8) shows that 4 cups of flour will make 8 batches of cookies.
- B. The point (4 , 2) shows that 4 batches of cookies require 2 cups of flour.
- C. The point (0.5 , 1) shows that 1 batch of cookies require 0.5 cup of flour.
- D. The point (3 , 1.5) shows that 1.5 cups of flour will make 3 batches of cookies.



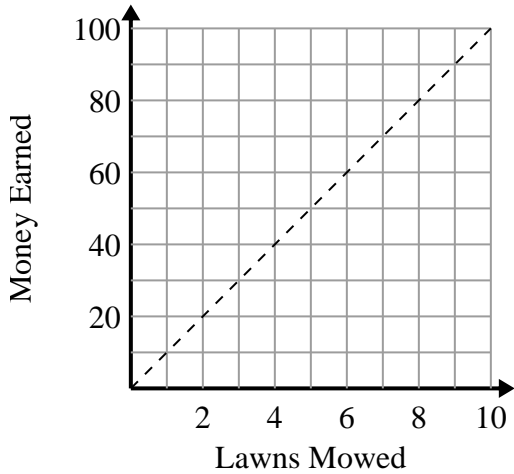
Determine which statements about the graph are true.

1)



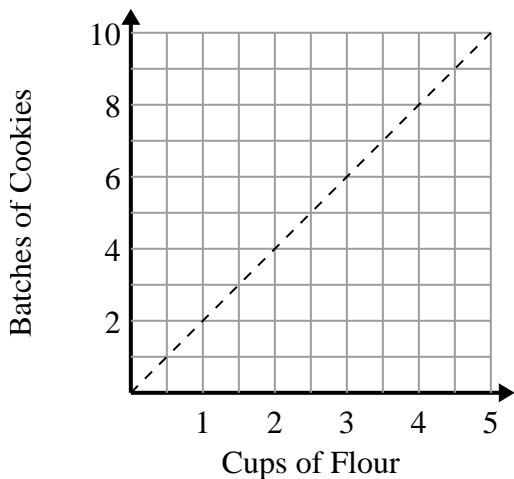
- A. The point (0.5 , 4) shows that it takes 0.5 hours to travel 4 miles.
- B. The point (8 , 1) shows that it takes 1 hours to travel 8 miles.
- C. The point (4 , 0.5) shows that travelling 4 miles will take 0.5 hours.
- D. The point (1.25 , 10) shows that it takes 1.25 hours to travel 10 miles.

2)



- A. The point (5 , 50) shows that mowing 5 lawns will earn you \$50.
- B. The point (9 , 90) shows that mowing 9 lawns will earn you \$90.
- C. The point (70 , 7) shows that mowing 7 lawns will earn you \$70.
- D. The point (3 , 30) shows that mowing 3 lawns will earn you \$30.

3)



- A. The point (4 , 8) shows that 4 cups of flour will make 8 batches of cookies.
- B. The point (4 , 2) shows that 4 batches of cookies require 2 cups of flour.
- C. The point (0.5 , 1) shows that 1 batch of cookies require 0.5 cup of flour.
- D. The point (3 , 1.5) shows that 1.5 cups of flour will make 3 batches of cookies.

Answers

- 1. A,D
- 2. A,B,D
- 3. A,C