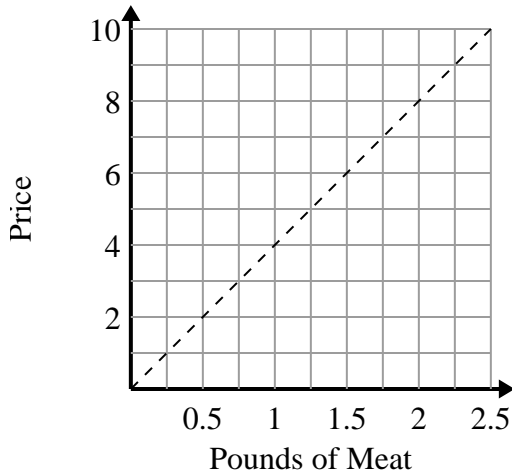




Determine which statements about the graph are true.

Answers

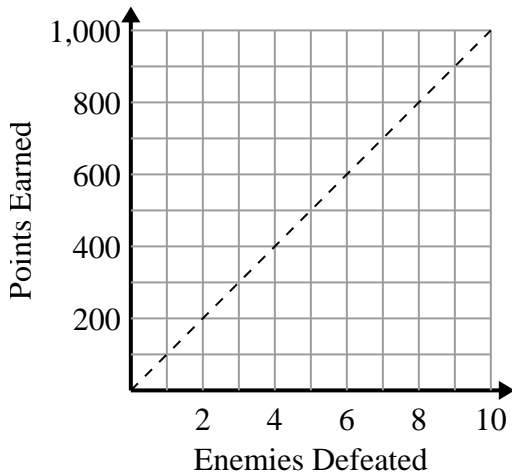
1)



- A. The point (2 , 0.5) shows that buying 0.5 pounds of meat will cost \$2.
- B. The point (1 , 0.25) shows that \$1 will buy you 0.25 pound of meat.
- C. The point (1.75 , 7) shows that buying 1.75 pounds of meat will cost \$7.
- D. The point (1.25 , 5) shows that \$5 will buy you 1.25 pounds of meat.

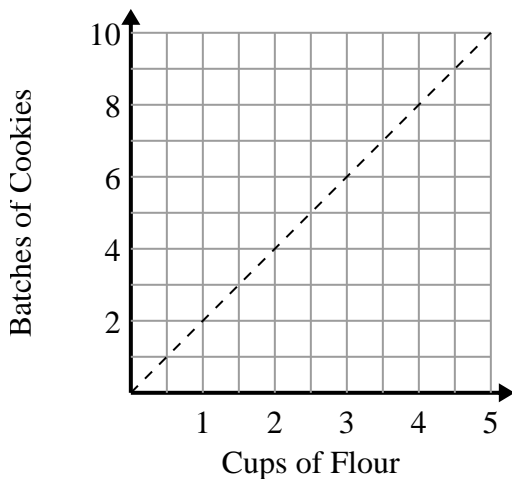
- 1. _____
- 2. _____
- 3. _____

2)



- A. The point (700 , 7) shows that defeating 7 enemies will earn you 700 points.
- B. The point (300 , 3) shows that you would earn 300 points for defeating 3 enemies.
- C. The point (3 , 300) shows that defeating 3 enemies will earn you 300 points.
- D. The point (4 , 400) shows that defeating 4 enemies will earn you 400 points.

3)

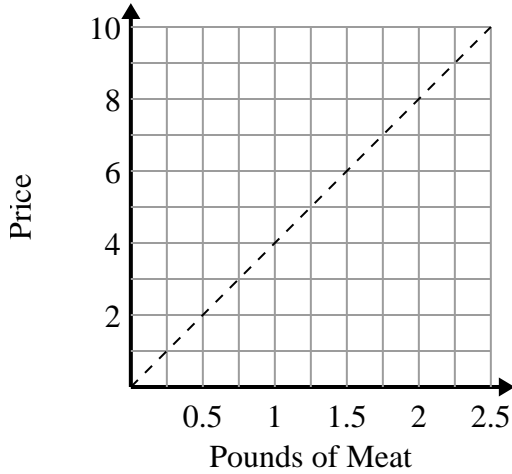


- A. The point (3 , 1.5) shows that 1.5 cups of flour will make 3 batches of cookies.
- B. The point (7 , 3.5) shows that 3.5 cups of flour will make 7 batches of cookies.
- C. The point (3 , 6) shows that 3 cups of flour will make 6 batches of cookies.
- D. The point (8 , 4) shows that 4 cups of flour will make 8 batches of cookies.



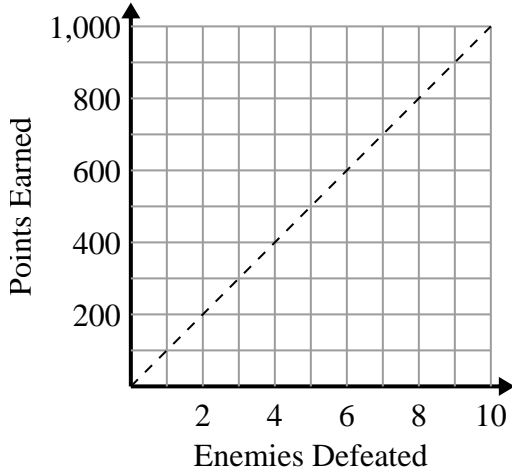
Determine which statements about the graph are true.

1)



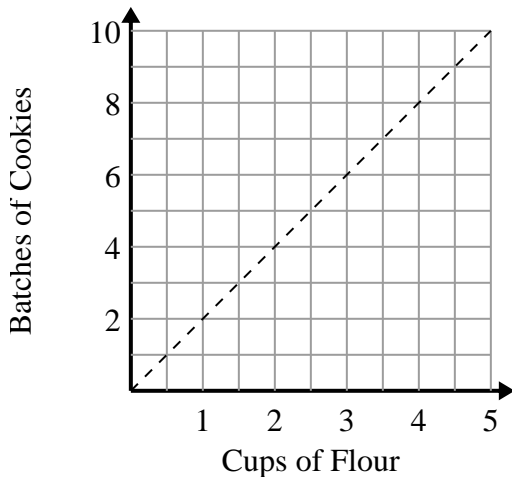
- A. The point (2 , 0.5) shows that buying 0.5 pounds of meat will cost \$2.
- B. The point (1 , 0.25) shows that \$1 will buy you 0.25 pound of meat.
- C. The point (1.75 , 7) shows that buying 1.75 pounds of meat will cost \$7.
- D. The point (1.25 , 5) shows that \$5 will buy you 1.25 pounds of meat.

2)



- A. The point (700 , 7) shows that defeating 7 enemies will earn you 700 points.
- B. The point (300 , 3) shows that you would earn 300 points for defeating 3 enemies.
- C. The point (3 , 300) shows that defeating 3 enemies will earn you 300 points.
- D. The point (4 , 400) shows that defeating 4 enemies will earn you 400 points.

3)



- A. The point (3 , 1.5) shows that 1.5 cups of flour will make 3 batches of cookies.
- B. The point (7 , 3.5) shows that 3.5 cups of flour will make 7 batches of cookies.
- C. The point (3 , 6) shows that 3 cups of flour will make 6 batches of cookies.
- D. The point (8 , 4) shows that 4 cups of flour will make 8 batches of cookies.

Answers

- 1. C,D
- 2. C,D
- 3. C