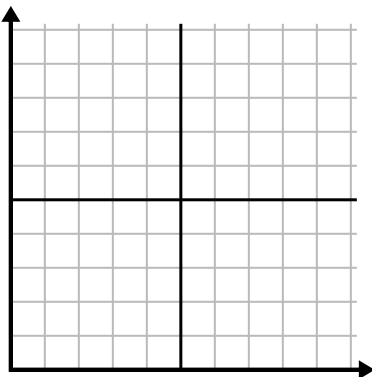




Fill in the grid using the chart.

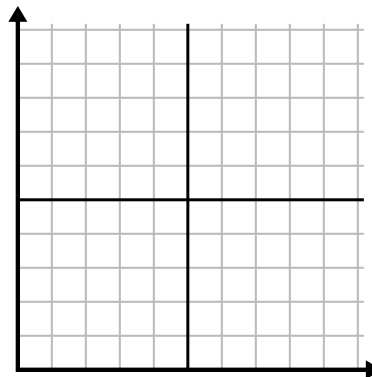
1)

Day	1	2	3	4	5	6	7
Money Spent	9	7	1	4	3	10	2



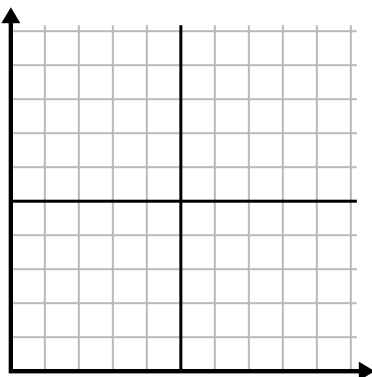
2)

Week	1	2	3	4	5
Water Used (gallons)	20	80	10	30	70



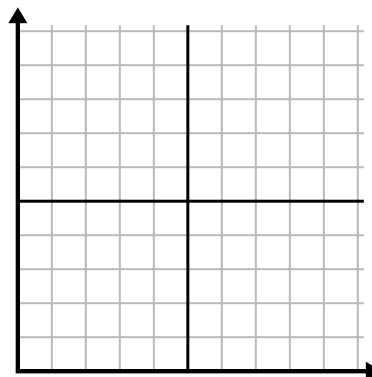
3)

Hour	1	2	3	4	5	6
Amount Sold	8	10	7	4	5	1



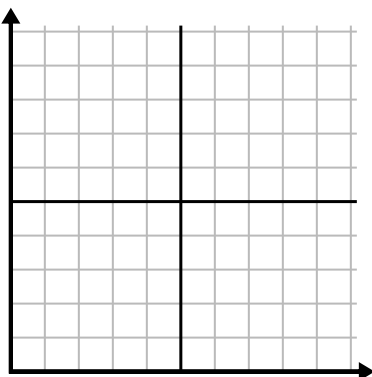
4)

Day	1	2	3	4	5	6	7
Youtube Videos Watched	90	150	270	60	240	210	30



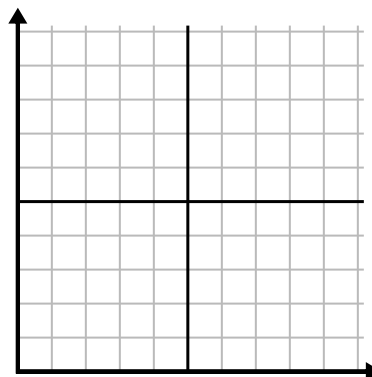
5)

Day	1	2	3	4	5	6	7
Texts Sent	40	5	25	30	45	35	10



6)

Year	1	2	3	4	5
Boxes of Pens Used	2	4	5	10	6

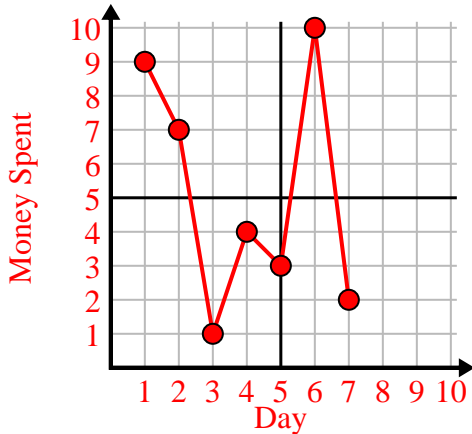




Fill in the grid using the chart.

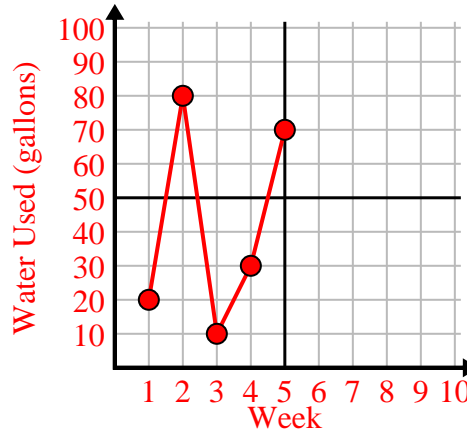
1)

Day	1	2	3	4	5	6	7
Money Spent	9	7	1	4	3	10	2



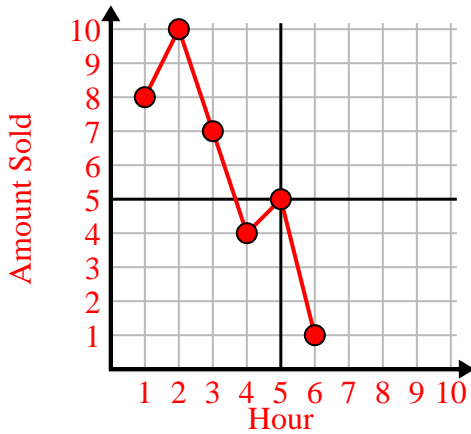
2)

Week	1	2	3	4	5
Water Used (gallons)	20	80	10	30	70



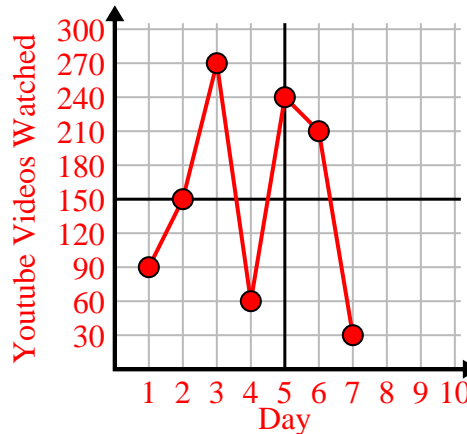
3)

Hour	1	2	3	4	5	6
Amount Sold	8	10	7	4	5	1



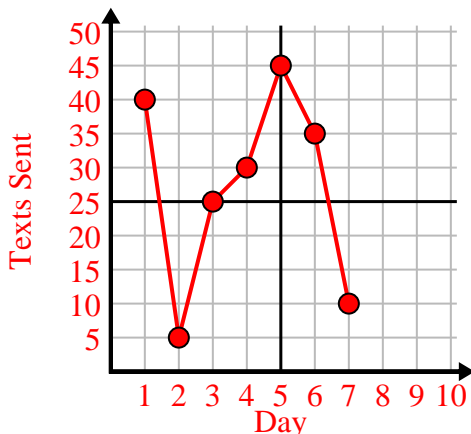
4)

Day	1	2	3	4	5	6	7
Youtube Videos Watched	90	150	270	60	240	210	30



5)

Day	1	2	3	4	5	6	7
Texts Sent	40	5	25	30	45	35	10



6)

Year	1	2	3	4	5
Boxes of Pens Used	2	4	5	10	6

