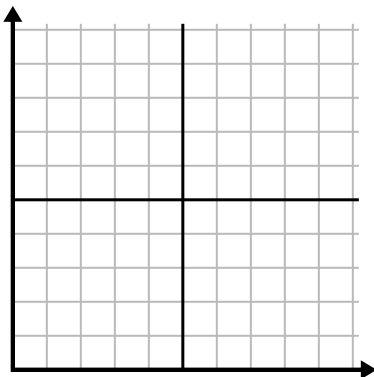




Fill in the grid using the chart.

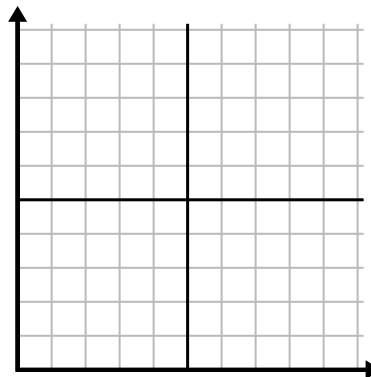
1)

Hour	1	2	3	4	5	6
Amount Sold	8	3	1	6	7	10



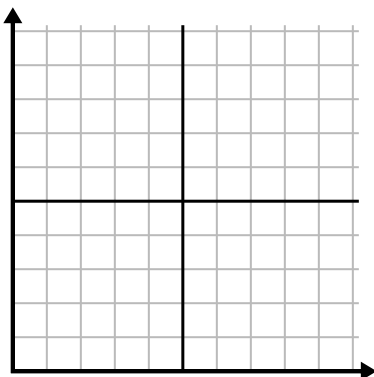
2)

Week	1	2	3	4	5	6	7
Hours of TV watched	15	40	20	35	10	30	45



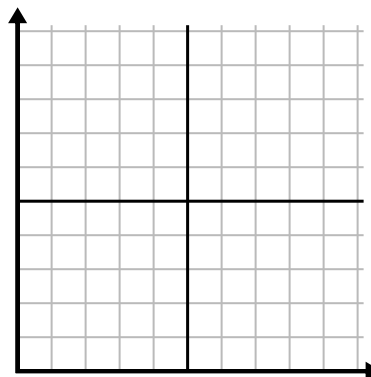
3)

Day	1	2	3	4	5	6	7
Texts Sent	40	45	30	35	5	50	15



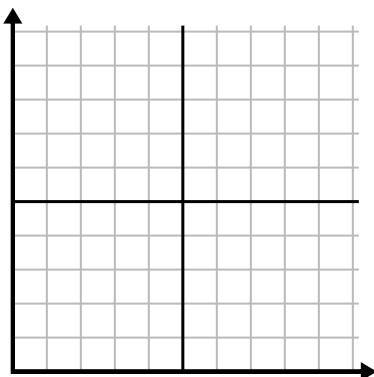
4)

Day	1	2	3	4	5	6	7
Money Spent	8	7	1	3	9	6	10



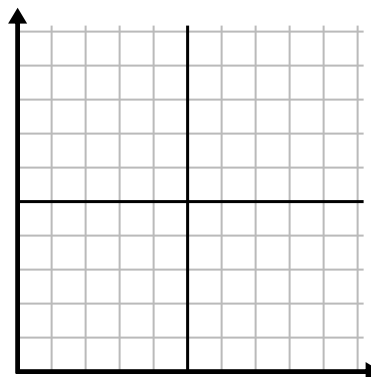
5)

Week	1	2	3	4	5
Water Used (gallons)	60	80	40	10	20



6)

Year	1	2	3	4	5
Ink Cartridges Used	12	6	16	2	18

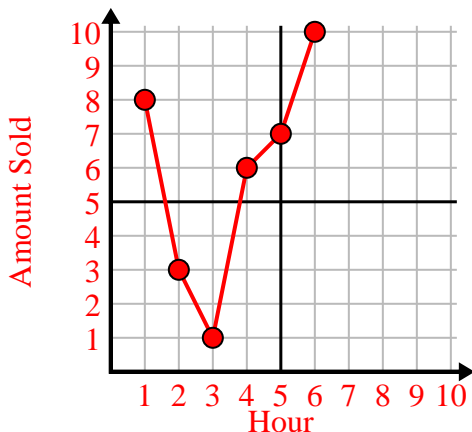




Fill in the grid using the chart.

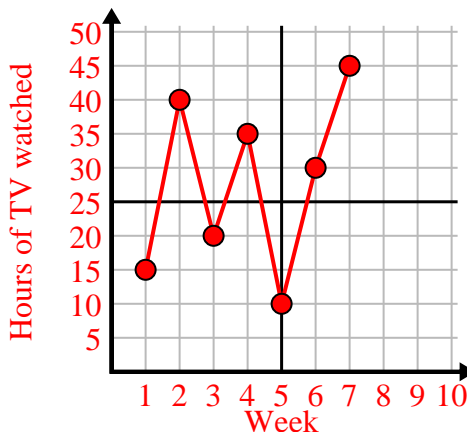
1)

Hour	1	2	3	4	5	6
Amount Sold	8	3	1	6	7	10



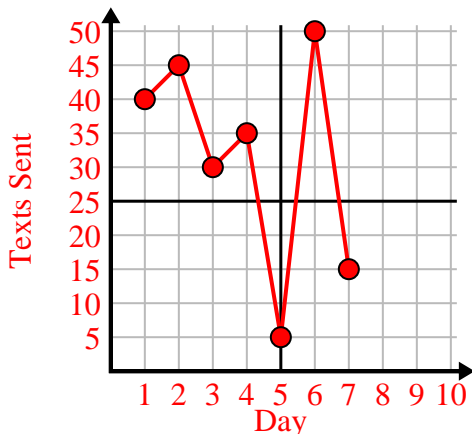
2)

Week	1	2	3	4	5	6	7
Hours of TV watched	15	40	20	35	10	30	45



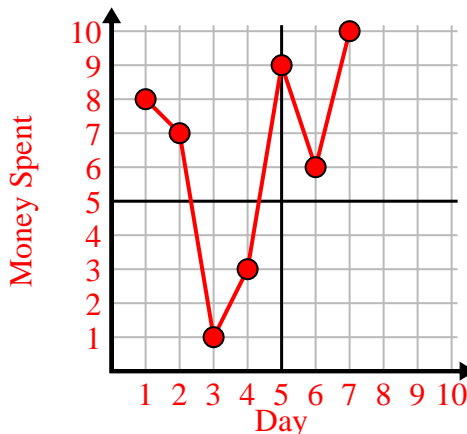
3)

Day	1	2	3	4	5	6	7
Texts Sent	40	45	30	35	5	50	15



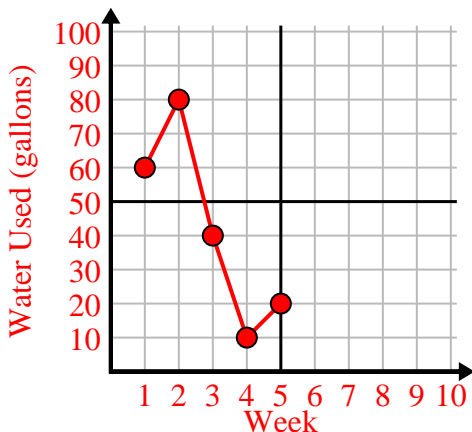
4)

Day	1	2	3	4	5	6	7
Money Spent	8	7	1	3	9	6	10



5)

Week	1	2	3	4	5
Water Used (gallons)	60	80	40	10	20



6)

Year	1	2	3	4	5
Ink Cartridges Used	12	6	16	2	18

