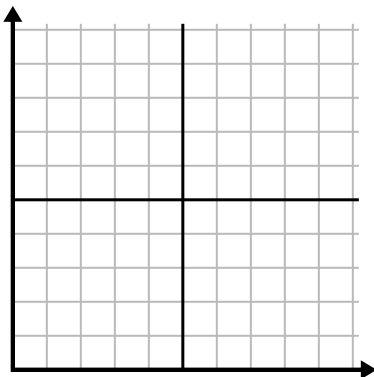




Fill in the grid using the chart.

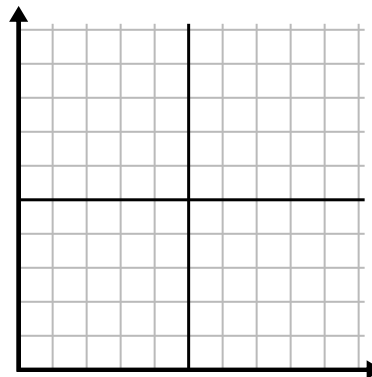
1)

Hour	1	2	3	4	5
Amount Sold	7	1	9	10	5



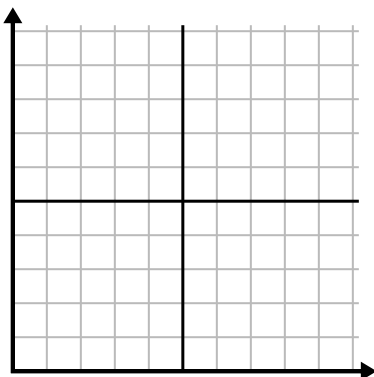
2)

Day	1	2	3	4	5
Texts Sent	50	25	40	30	10



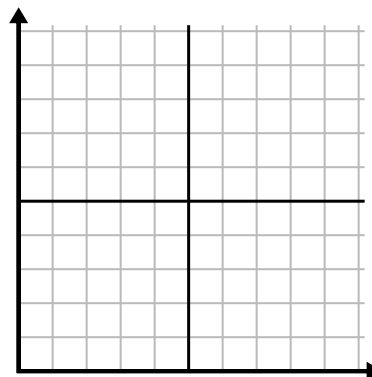
3)

Month	1	2	3	4	5	6	7
Electric Bill Price	75	150	50	125	175	250	200



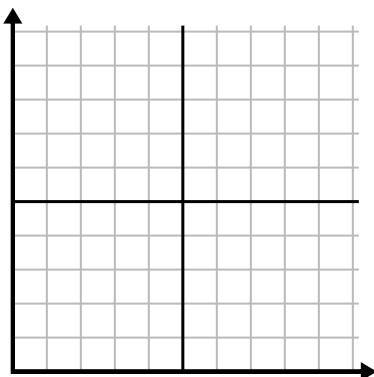
4)

Week	1	2	3	4	5	6
Water Used (gallons)	10	30	80	50	40	60



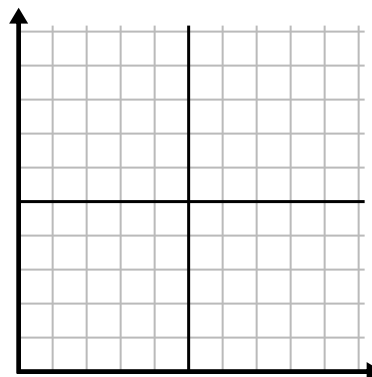
5)

Day	1	2	3	4	5	6	7
Meals Sold	200	800	500	100	1,000	300	600



6)

Year	1	2	3	4	5	6	7
Ink Cartridges Used	8	18	12	6	16	14	4

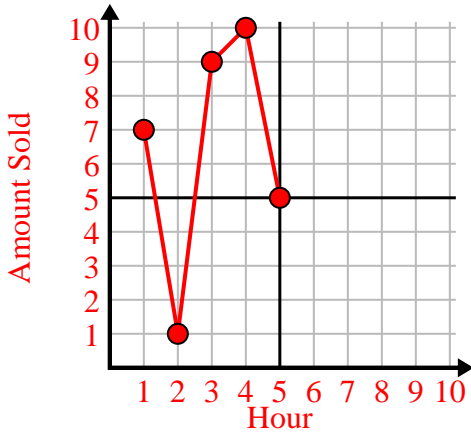




Fill in the grid using the chart.

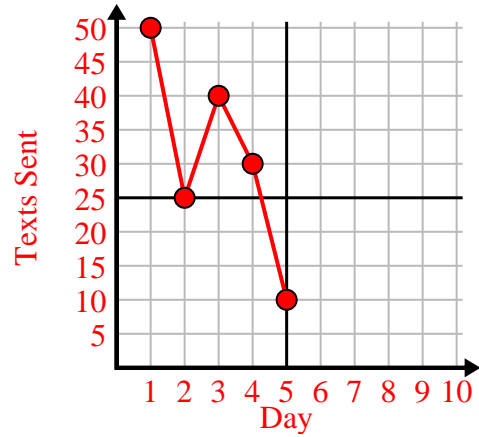
1)

Hour	1	2	3	4	5
Amount Sold	7	1	9	10	5



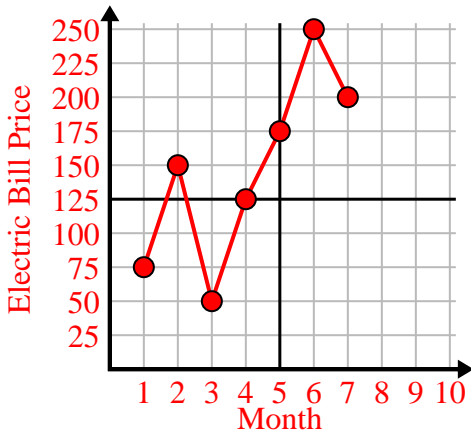
2)

Day	1	2	3	4	5
Texts Sent	50	25	40	30	10



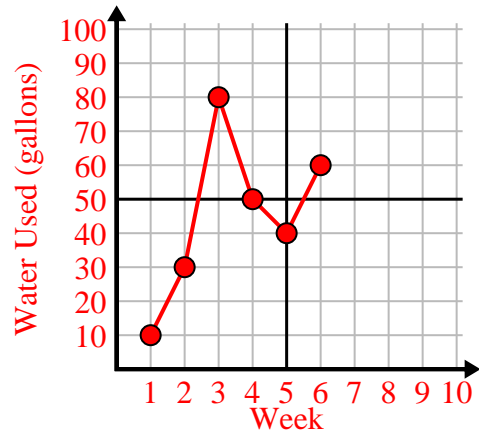
3)

Month	1	2	3	4	5	6	7
Electric Bill Price	75	150	50	125	175	250	200



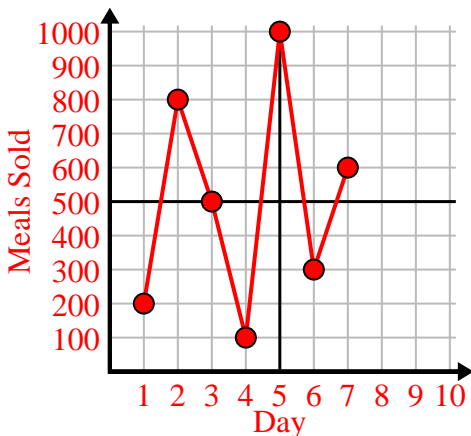
4)

Week	1	2	3	4	5	6
Water Used (gallons)	10	30	80	50	40	60



5)

Day	1	2	3	4	5	6	7
Meals Sold	200	800	500	100	1,000	300	600



6)

Year	1	2	3	4	5	6	7
Ink Cartridges Used	8	18	12	6	16	14	4

