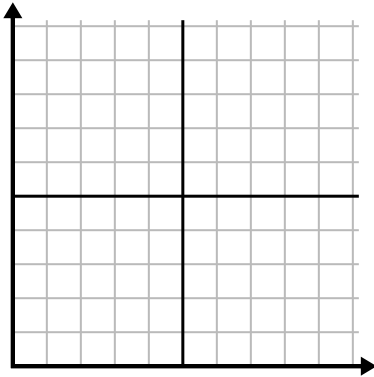




Fill in the grid using the chart.

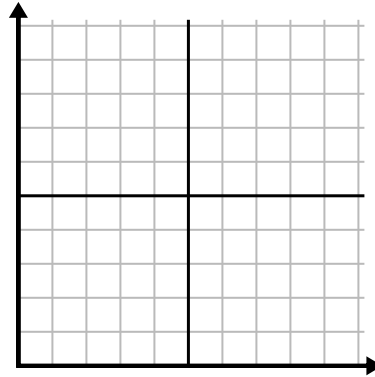
1)

Month	1	2	3	4	5	6	7
Electric Bill Price	175	50	225	150	200	125	250



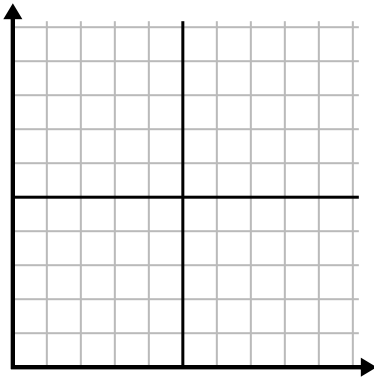
2)

Week	1	2	3	4	5	6	7
Water Used (gallons)	20	60	70	50	40	30	10



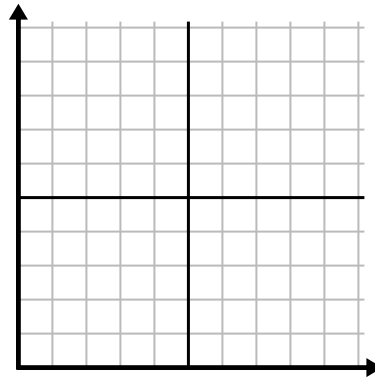
3)

Day	1	2	3	4	5	6	7
Texts Sent	35	40	50	30	20	45	10



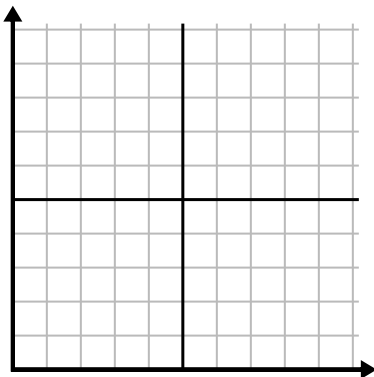
4)

Day	1	2	3	4	5	6	7
Youtube Videos Watched	180	300	270	150	120	60	90



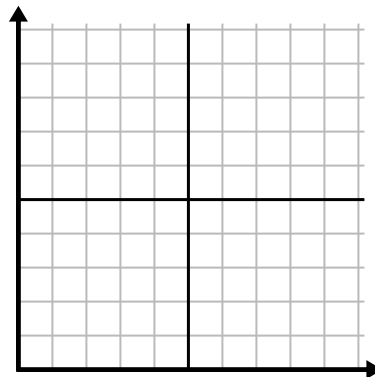
5)

Day	1	2	3	4	5
Money Spent	10	1	8	2	5



6)

Year	1	2	3	4	5
Ink Cartridges Used	2	4	12	6	18

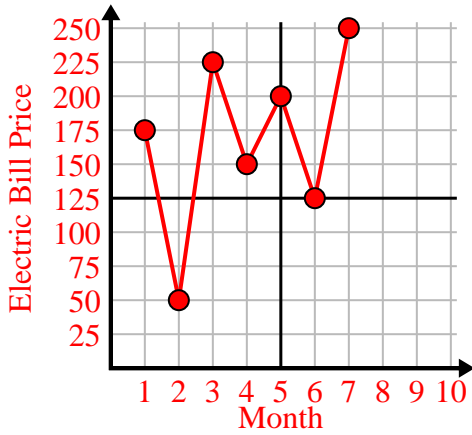




Fill in the grid using the chart.

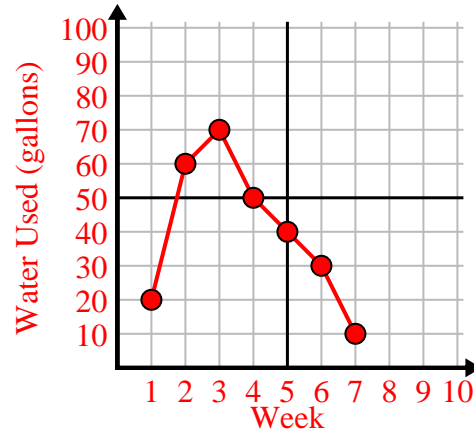
1)

Month	1	2	3	4	5	6	7
Electric Bill Price	175	50	225	150	200	125	250



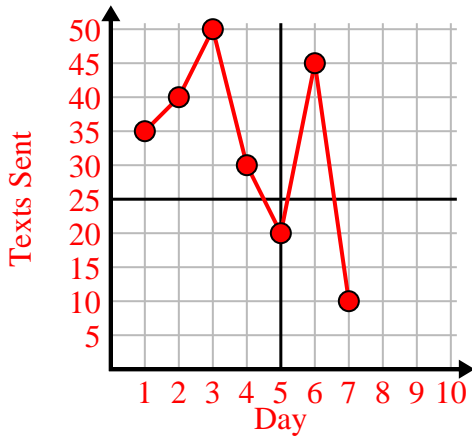
2)

Week	1	2	3	4	5	6	7
Water Used (gallons)	20	60	70	50	40	30	10



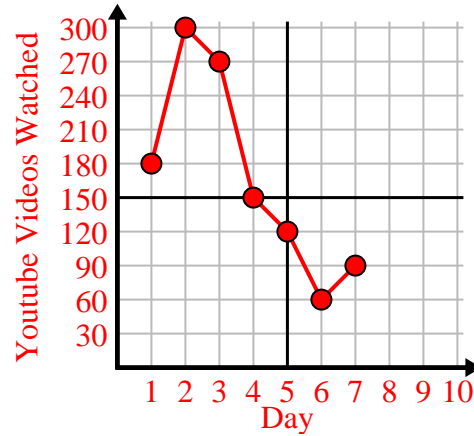
3)

Day	1	2	3	4	5	6	7
Texts Sent	35	40	50	30	20	45	10



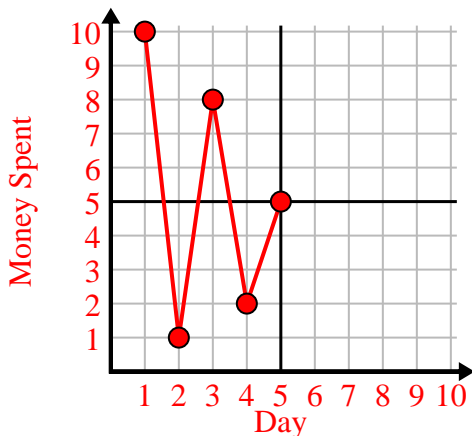
4)

Day	1	2	3	4	5	6	7
Youtube Videos Watched	180	300	270	150	120	60	90



5)

Day	1	2	3	4	5
Money Spent	10	1	8	2	5



6)

Year	1	2	3	4	5
Ink Cartridges Used	2	4	12	6	18

