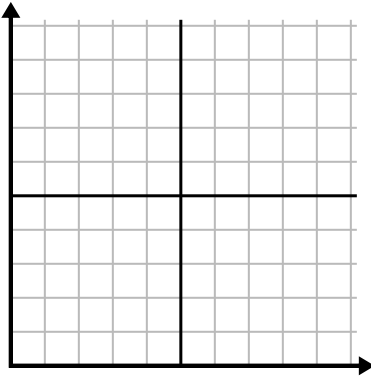




Fill in the grid using the chart.

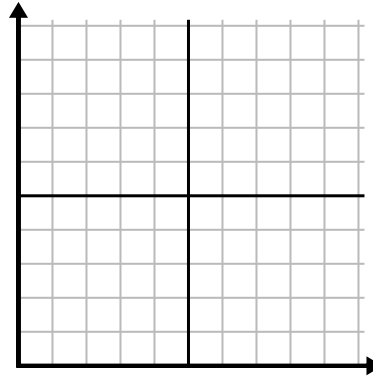
1)

Day	1	2	3	4	5
Texts Sent	45	35	10	30	15



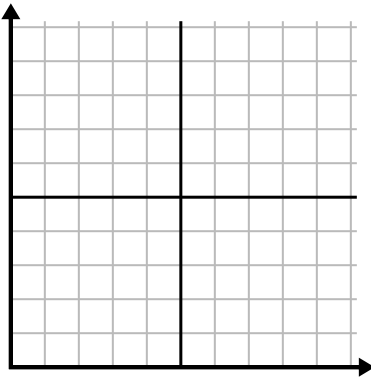
2)

Year	1	2	3	4	5	6
Boxes of Pens Used	7	3	9	1	4	8



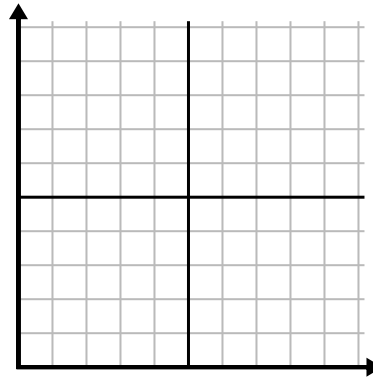
3)

Week	1	2	3	4	5	6
Hours of TV watched	30	15	45	5	25	40



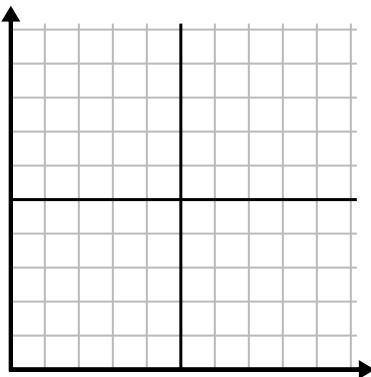
4)

Year	1	2	3	4	5
Ink Cartridges Used	10	14	16	18	2



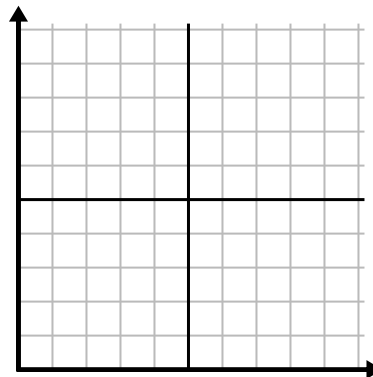
5)

Hour	1	2	3	4	5	6
Amount Sold	4	9	10	2	7	8



6)

Day	1	2	3	4	5	6	7
Calories Burned	40	60	120	180	100	160	200

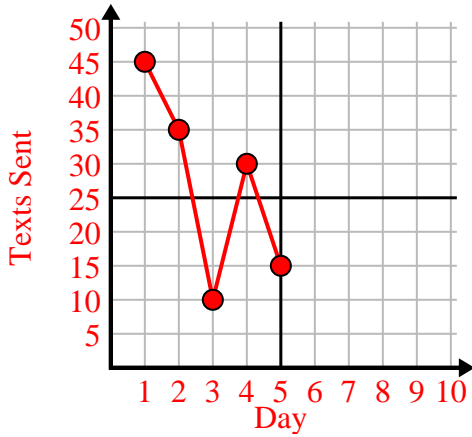




Fill in the grid using the chart.

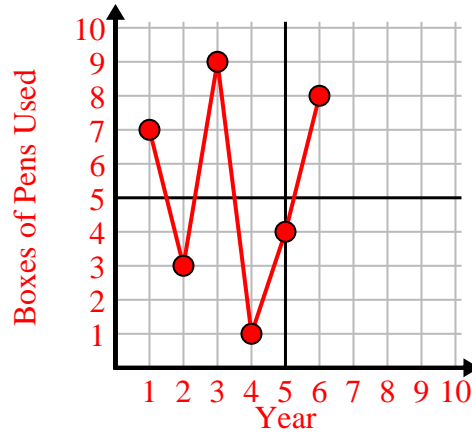
1)

Day	1	2	3	4	5
Texts Sent	45	35	10	30	15



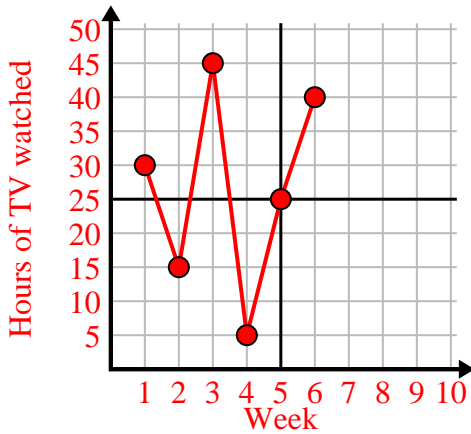
2)

Year	1	2	3	4	5	6
Boxes of Pens Used	7	3	9	1	4	8



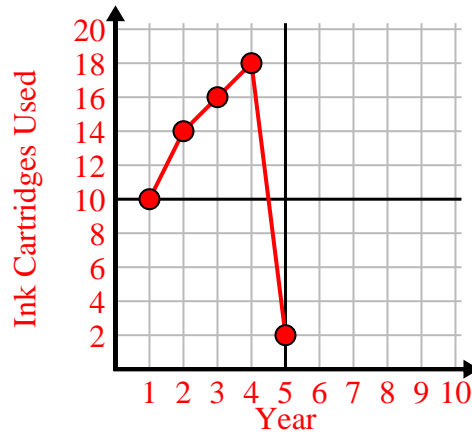
3)

Week	1	2	3	4	5	6
Hours of TV watched	30	15	45	5	25	40



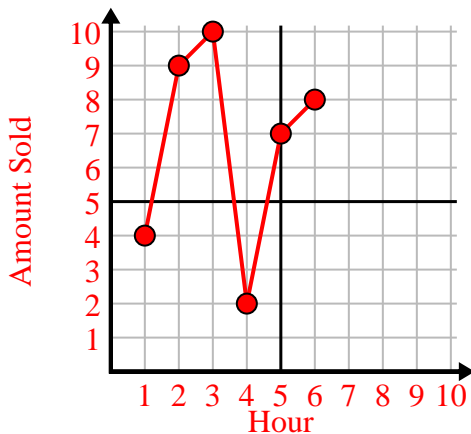
4)

Year	1	2	3	4	5
Ink Cartridges Used	10	14	16	18	2



5)

Hour	1	2	3	4	5	6
Amount Sold	4	9	10	2	7	8



6)

Day	1	2	3	4	5	6	7
Calories Burned	40	60	120	180	100	160	200

