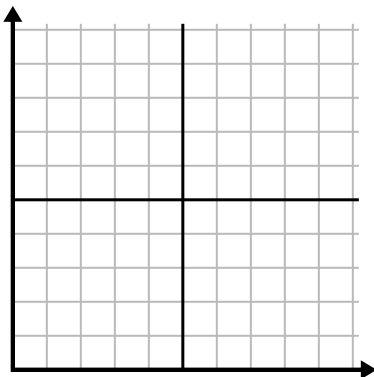




Fill in the grid using the chart.

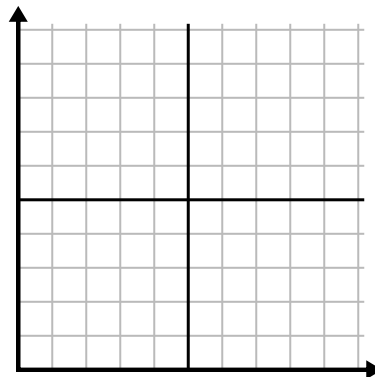
1)

Month	1	2	3	4	5	6
Electric Bill Price	75	125	175	150	250	100



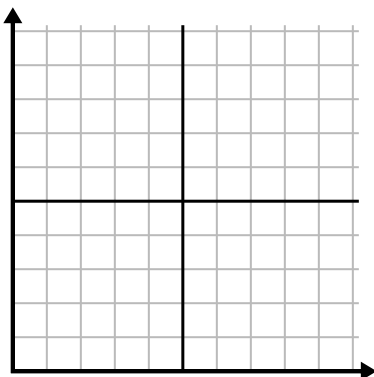
2)

Day	1	2	3	4	5	6	7
Calories Burned	100	60	20	200	80	40	160



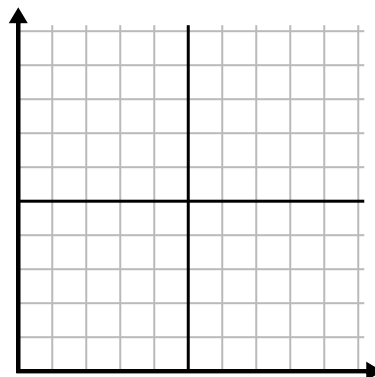
3)

Week	1	2	3	4	5	6	7
Hours of TV watched	50	15	30	5	35	45	20



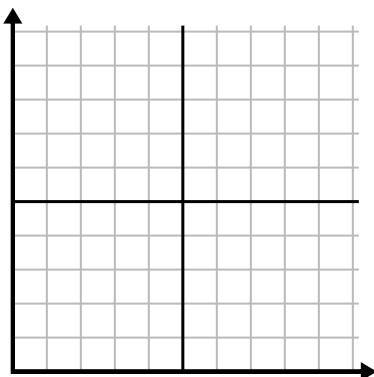
4)

Year	1	2	3	4	5
Ink Cartridges Used	16	18	6	2	10



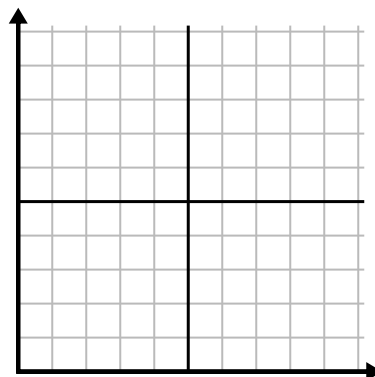
5)

Week	1	2	3	4	5	6	7
Water Used (gallons)	60	30	20	70	50	80	90



6)

Year	1	2	3	4	5	6
Boxes of Pens Used	4	3	7	1	6	9

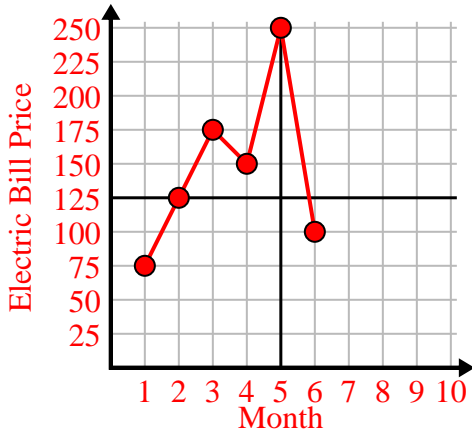




Fill in the grid using the chart.

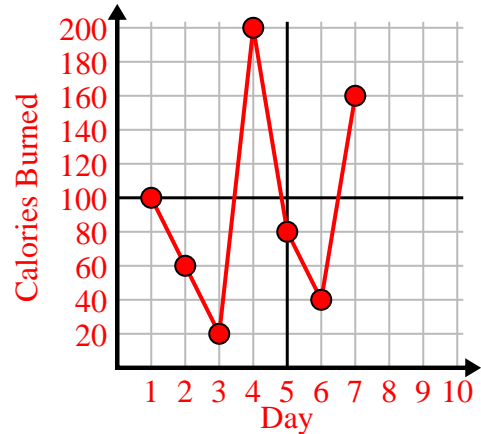
1)

Month	1	2	3	4	5	6
Electric Bill Price	75	125	175	150	250	100



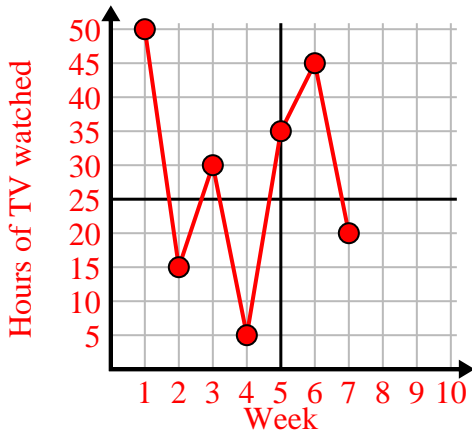
2)

Day	1	2	3	4	5	6	7
Calories Burned	100	60	20	200	80	40	160



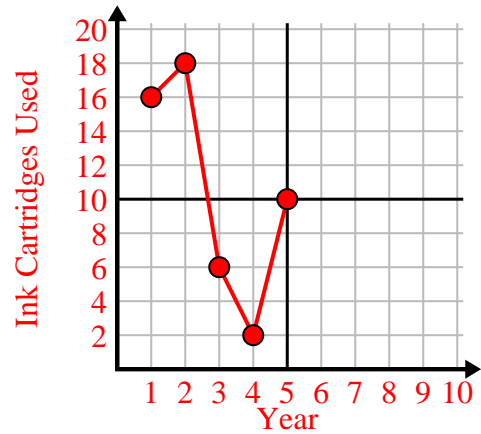
3)

Week	1	2	3	4	5	6	7
Hours of TV watched	50	15	30	5	35	45	20



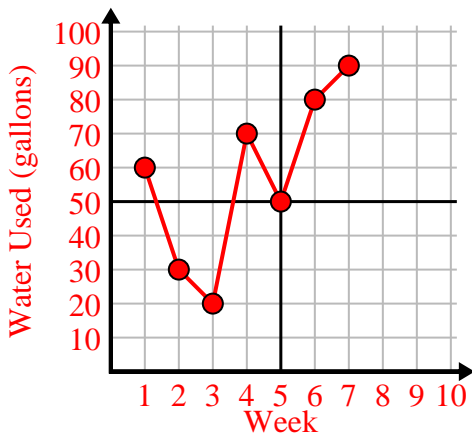
4)

Year	1	2	3	4	5
Ink Cartridges Used	16	18	6	2	10



5)

Week	1	2	3	4	5	6	7
Water Used (gallons)	60	30	20	70	50	80	90



6)

Year	1	2	3	4	5	6
Boxes of Pens Used	4	3	7	1	6	9

