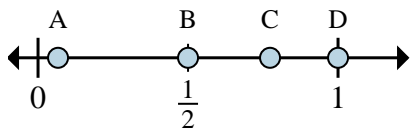
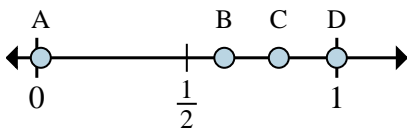




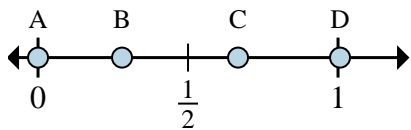
Determine which letter best shows the location of the fraction.



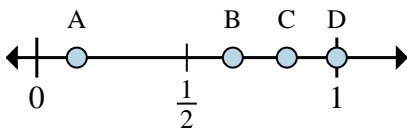
- 1) Which letter best shows  $\frac{1}{2}$ ?
- 2) Which letter best shows  $\frac{2}{2}$ ?



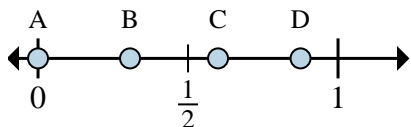
- 3) Which letter best shows  $\frac{5}{8}$ ?
- 4) Which letter best shows  $\frac{8}{8}$ ?



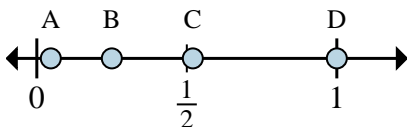
- 5) Which letter best shows  $\frac{0}{3}$ ?
- 6) Which letter best shows  $\frac{2}{3}$ ?



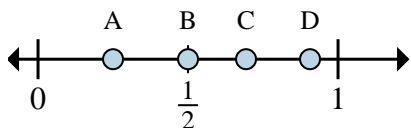
- 7) Which letter best shows  $\frac{6}{6}$ ?
- 8) Which letter best shows  $\frac{5}{6}$ ?



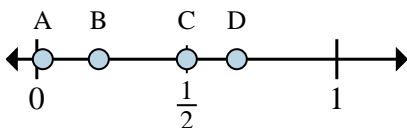
- 9) Which letter best shows  $\frac{0}{8}$ ?
- 10) Which letter best shows  $\frac{7}{8}$ ?



- 11) Which letter best shows  $\frac{4}{4}$ ?
- 12) Which letter best shows  $\frac{1}{4}$ ?



- 13) Which letter best shows  $\frac{2}{8}$ ?
- 14) Which letter best shows  $\frac{4}{8}$ ?



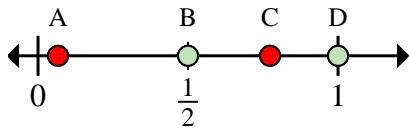
- 15) Which letter best shows  $\frac{4}{6}$ ?
- 16) Which letter best shows  $\frac{3}{6}$ ?

Answers

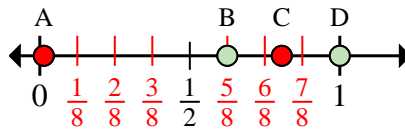
- 1. \_\_\_\_\_
- 2. \_\_\_\_\_
- 3. \_\_\_\_\_
- 4. \_\_\_\_\_
- 5. \_\_\_\_\_
- 6. \_\_\_\_\_
- 7. \_\_\_\_\_
- 8. \_\_\_\_\_
- 9. \_\_\_\_\_
- 10. \_\_\_\_\_
- 11. \_\_\_\_\_
- 12. \_\_\_\_\_
- 13. \_\_\_\_\_
- 14. \_\_\_\_\_
- 15. \_\_\_\_\_
- 16. \_\_\_\_\_



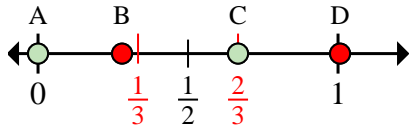
Determine which letter best shows the location of the fraction.



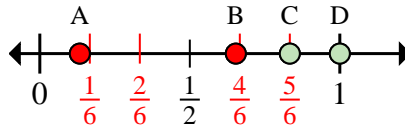
- 1) Which letter best shows  $\frac{1}{2}$ ?
- 2) Which letter best shows  $\frac{2}{2}$ ?



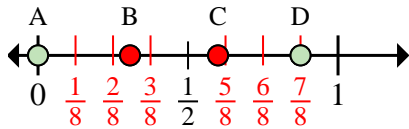
- 3) Which letter best shows  $\frac{5}{8}$ ?
- 4) Which letter best shows  $\frac{8}{8}$ ?



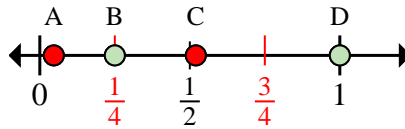
- 5) Which letter best shows  $\frac{0}{3}$ ?
- 6) Which letter best shows  $\frac{2}{3}$ ?



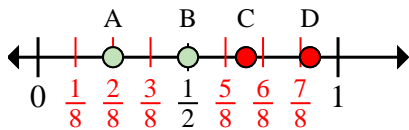
- 7) Which letter best shows  $\frac{6}{6}$ ?
- 8) Which letter best shows  $\frac{5}{6}$ ?



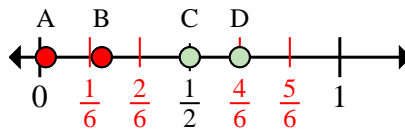
- 9) Which letter best shows  $\frac{0}{8}$ ?
- 10) Which letter best shows  $\frac{7}{8}$ ?



- 11) Which letter best shows  $\frac{4}{4}$ ?
- 12) Which letter best shows  $\frac{1}{4}$ ?



- 13) Which letter best shows  $\frac{2}{8}$ ?
- 14) Which letter best shows  $\frac{4}{8}$ ?



- 15) Which letter best shows  $\frac{4}{6}$ ?
- 16) Which letter best shows  $\frac{3}{6}$ ?

Answers

1. **B**
2. **D**
3. **B**
4. **D**
5. **A**
6. **C**
7. **D**
8. **C**
9. **A**
10. **D**
11. **D**
12. **B**
13. **A**
14. **B**
15. **D**
16. **C**